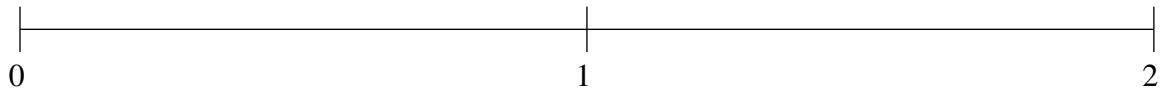


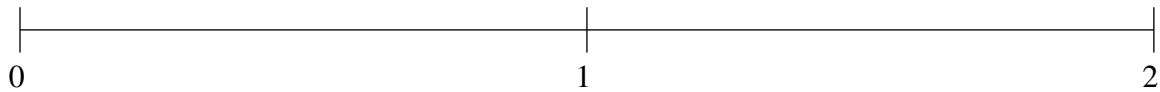
Ordenar Fracciones (J)

Ordene cada conjunto de fracciones usando la recta numérica.

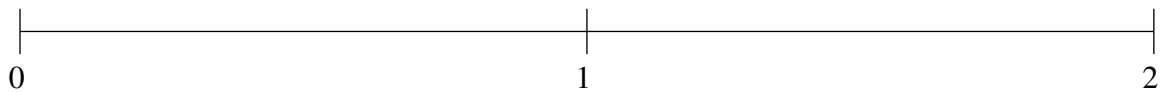
$$1\frac{4}{5}, 1\frac{1}{2}, \frac{9}{25}, 1\frac{9}{50}, \frac{3}{5}$$



$$\frac{1}{4}, 1\frac{1}{2}, \frac{3}{4}, \frac{1}{2}, 1\frac{1}{5}$$



$$1\frac{1}{2}, \frac{1}{2}, \frac{3}{4}, 1\frac{4}{5}, 1\frac{1}{5}$$

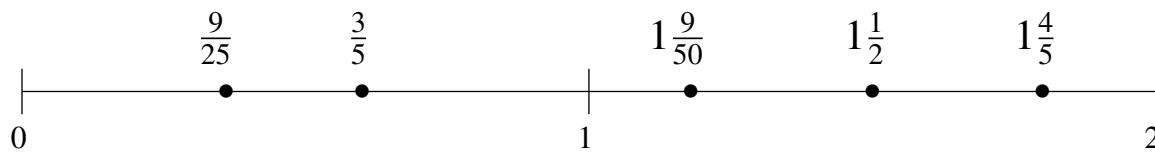


Ordenar Fracciones (J) Respuestas

Ordene cada conjunto de fracciones usando la recta numérica.

$$1\frac{4}{5}, 1\frac{1}{2}, \frac{9}{25}, 1\frac{9}{50}, \frac{3}{5}$$

$$\frac{9}{25}, \frac{3}{5}, 1\frac{9}{50}, 1\frac{1}{2}, 1\frac{4}{5}$$



$$\frac{1}{4}, 1\frac{1}{2}, \frac{3}{4}, \frac{1}{2}, 1\frac{1}{5}$$

$$\frac{1}{4}, \frac{1}{2}, \frac{3}{4}, 1\frac{1}{5}, 1\frac{1}{2}$$



$$1\frac{1}{2}, \frac{1}{2}, \frac{3}{4}, 1\frac{4}{5}, 1\frac{1}{5}$$

$$\frac{1}{2}, \frac{3}{4}, 1\frac{1}{5}, 1\frac{1}{2}, 1\frac{4}{5}$$

