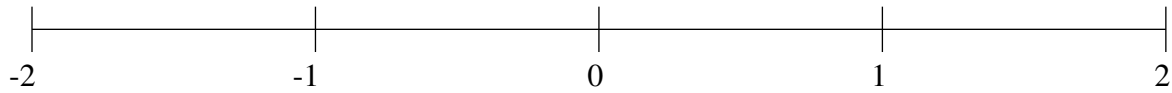


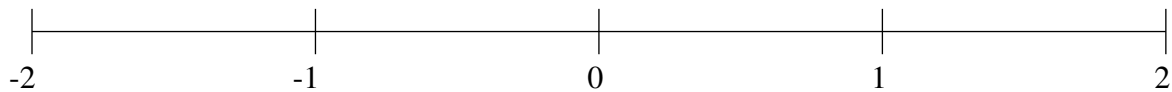
Ordenar Fracciones (B)

Ordene cada conjunto de fracciones usando la recta numérica.

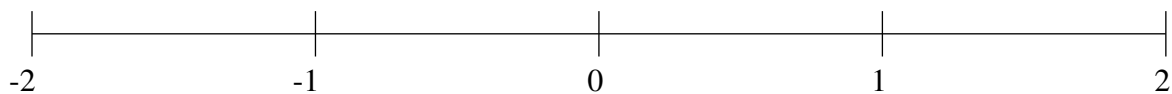
$$\frac{1}{4}, \frac{3}{4}, -1\frac{1}{2}, \frac{1}{2}, 1\frac{1}{2}, -\frac{19}{25}, 1\frac{1}{25}, -\frac{1}{4}$$



$$-\frac{13}{25}, -1\frac{22}{25}, -\frac{1}{5}, \frac{3}{20}, -1\frac{3}{5}, \frac{3}{4}, 1\frac{3}{4}, 1\frac{1}{2}$$



$$1\frac{1}{4}, \frac{1}{2}, 1\frac{1}{2}, \frac{6}{25}, -\frac{2}{5}, -1\frac{1}{2}, -\frac{19}{25}, -1\frac{1}{5}$$

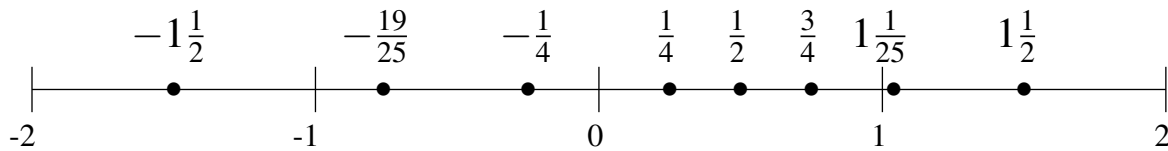


Ordenar Fracciones (B) Respuestas

Ordene cada conjunto de fracciones usando la recta numérica.

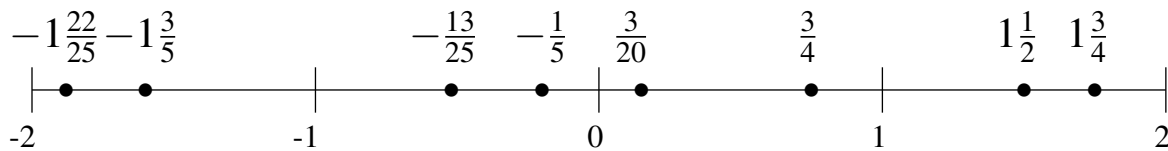
$$\frac{1}{4}, \frac{3}{4}, -1\frac{1}{2}, \frac{1}{2}, 1\frac{1}{2}, -\frac{19}{25}, 1\frac{1}{25}, -\frac{1}{4}$$

$$-1\frac{1}{2}, -\frac{19}{25}, -\frac{1}{4}, \frac{1}{4}, \frac{1}{2}, \frac{3}{4}, 1\frac{1}{25}, 1\frac{1}{2}$$



$$-\frac{13}{25}, -1\frac{22}{25}, -\frac{1}{5}, \frac{3}{20}, -1\frac{3}{5}, \frac{3}{4}, 1\frac{3}{4}, 1\frac{1}{2}$$

$$-1\frac{22}{25}, -1\frac{3}{5}, -\frac{13}{25}, -\frac{1}{5}, \frac{3}{20}, \frac{3}{4}, 1\frac{1}{2}, 1\frac{3}{4}$$



$$1\frac{1}{4}, \frac{1}{2}, 1\frac{1}{2}, \frac{6}{25}, -\frac{2}{5}, -1\frac{1}{2}, -\frac{19}{25}, -1\frac{1}{5}$$

$$-1\frac{1}{2}, -1\frac{1}{5}, -\frac{19}{25}, -\frac{2}{5}, \frac{6}{25}, \frac{1}{2}, 1\frac{1}{4}, 1\frac{1}{2}$$

