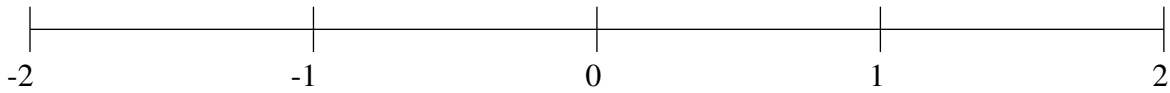


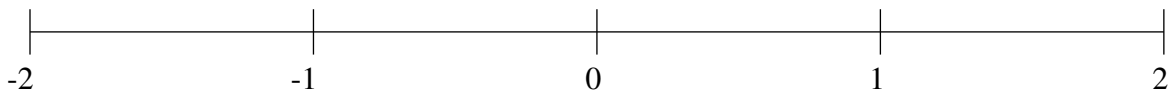
Ordenar Fracciones (F)

Ordene cada conjunto de fracciones usando la recta numérica.

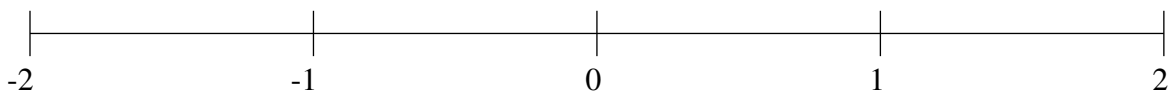
$$-\frac{1}{5}, -1\frac{3}{5}, \frac{4}{5}, -\frac{1}{2}, \frac{1}{4}, 1\frac{23}{25}, \frac{1}{2}, 1\frac{1}{2}$$



$$-1\frac{1}{2}, -\frac{1}{4}, 1\frac{3}{4}, -1\frac{1}{5}, 1\frac{1}{2}, -\frac{11}{20}, \frac{3}{5}, \frac{1}{4}$$



$$1\frac{19}{20}, \frac{27}{50}, 1\frac{4}{25}, -\frac{1}{2}, -1\frac{4}{5}, \frac{23}{25}, 1\frac{1}{2}, -1\frac{1}{2}$$

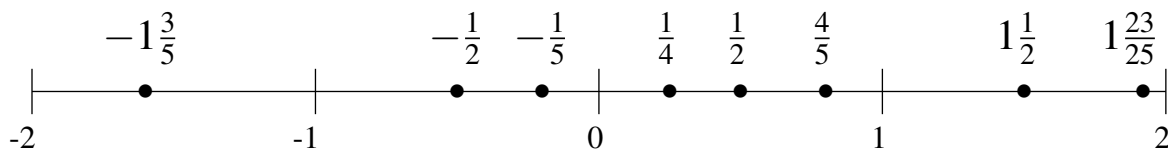


Ordenar Fracciones (F) Respuestas

Ordene cada conjunto de fracciones usando la recta numérica.

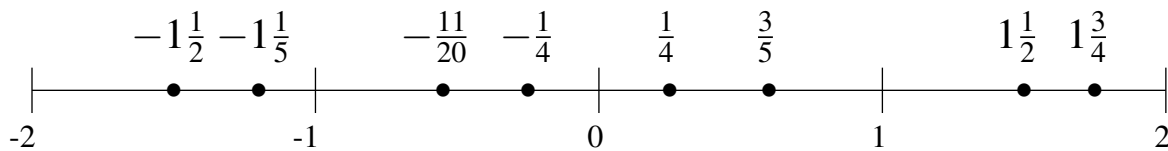
$$-\frac{1}{5}, -1\frac{3}{5}, \frac{4}{5}, -\frac{1}{2}, \frac{1}{4}, 1\frac{23}{25}, \frac{1}{2}, 1\frac{1}{2}$$

$$-1\frac{3}{5}, -\frac{1}{2}, -\frac{1}{5}, \frac{1}{4}, \frac{1}{2}, \frac{4}{5}, 1\frac{1}{2}, 1\frac{23}{25}$$



$$-1\frac{1}{2}, -\frac{1}{4}, 1\frac{3}{4}, -1\frac{1}{5}, 1\frac{1}{2}, -\frac{11}{20}, \frac{3}{5}, \frac{1}{4}$$

$$-1\frac{1}{2}, -1\frac{1}{5}, -\frac{11}{20}, -\frac{1}{4}, \frac{1}{4}, \frac{3}{5}, 1\frac{1}{2}, 1\frac{3}{4}$$



$$1\frac{19}{20}, \frac{27}{50}, 1\frac{4}{25}, -\frac{1}{2}, -1\frac{4}{5}, \frac{23}{25}, 1\frac{1}{2}, -1\frac{1}{2}$$

$$-1\frac{4}{5}, -1\frac{1}{2}, -\frac{1}{2}, \frac{27}{50}, \frac{23}{25}, 1\frac{4}{25}, 1\frac{1}{2}, 1\frac{19}{20}$$

