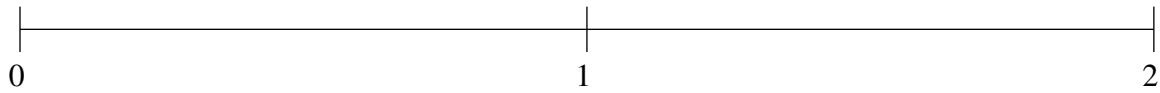


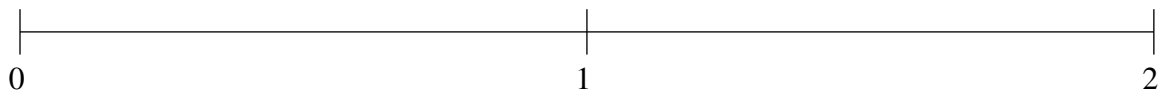
Ordenar Fracciones (A)

Ordene cada conjunto de fracciones usando la recta numérica.

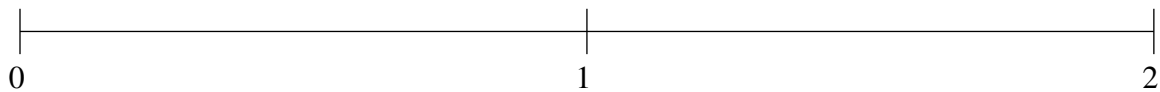
$$\frac{3}{20}, \frac{4}{5}, 1\frac{2}{5}, \frac{1}{2}, 1\frac{21}{25}$$



$$1\frac{1}{4}, \frac{3}{10}, 1\frac{1}{2}, \frac{9}{10}, 1\frac{4}{5}$$



$$\frac{1}{4}, 1\frac{13}{100}, \frac{43}{50}, 1\frac{1}{2}, \frac{1}{2}$$

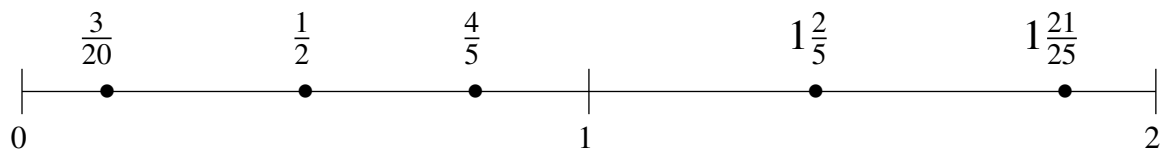


Ordenar Fracciones (A) Respuestas

Ordene cada conjunto de fracciones usando la recta numérica.

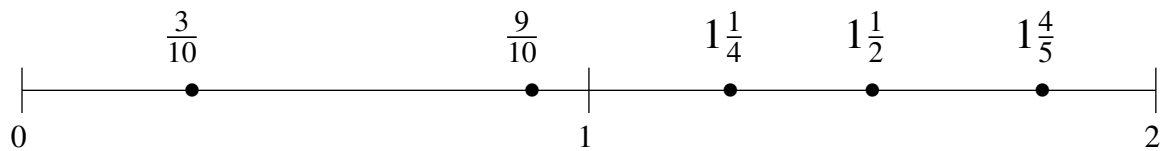
$$\frac{3}{20}, \frac{4}{5}, 1\frac{2}{5}, \frac{1}{2}, 1\frac{21}{25}$$

$$\frac{3}{20}, \frac{1}{2}, \frac{4}{5}, 1\frac{2}{5}, 1\frac{21}{25}$$



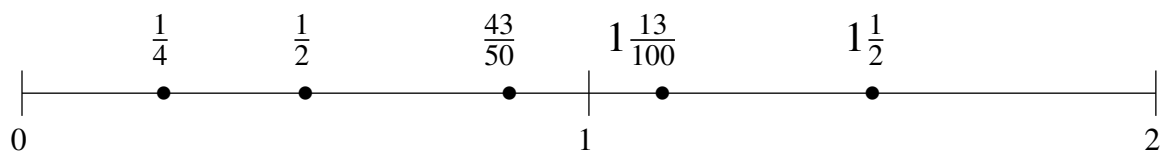
$$1\frac{1}{4}, \frac{3}{10}, 1\frac{1}{2}, \frac{9}{10}, 1\frac{4}{5}$$

$$\frac{3}{10}, \frac{9}{10}, 1\frac{1}{4}, 1\frac{1}{2}, 1\frac{4}{5}$$



$$\frac{1}{4}, 1\frac{13}{100}, \frac{43}{50}, 1\frac{1}{2}, \frac{1}{2}$$

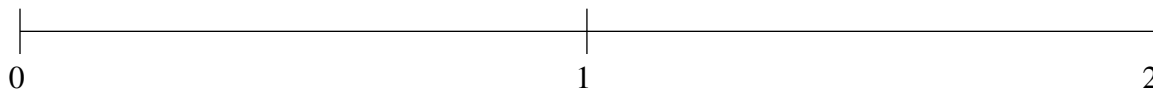
$$\frac{1}{4}, \frac{1}{2}, \frac{43}{50}, 1\frac{13}{100}, 1\frac{1}{2}$$



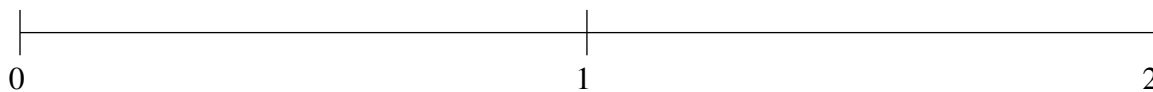
Ordenar Fracciones (B)

Ordene cada conjunto de fracciones usando la recta numérica.

$$\frac{18}{25}, \frac{1}{10}, \frac{1}{2}, 1\frac{1}{2}, 1\frac{4}{5}$$



$$1\frac{6}{25}, \frac{2}{5}, 1\frac{3}{4}, \frac{4}{5}, 1\frac{1}{2}$$



$$\frac{1}{10}, 1\frac{4}{5}, \frac{3}{4}, 1\frac{2}{5}, \frac{1}{2}$$

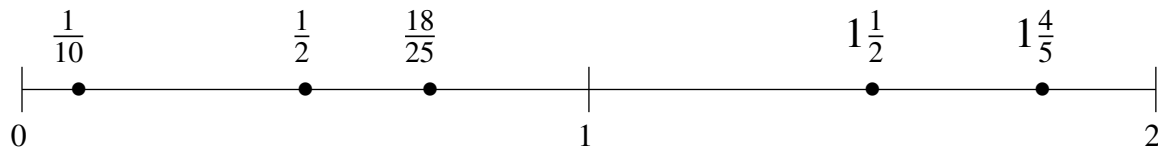


Ordenar Fracciones (B) Respuestas

Ordene cada conjunto de fracciones usando la recta numérica.

$$\frac{18}{25}, \frac{1}{10}, \frac{1}{2}, 1\frac{1}{2}, 1\frac{4}{5}$$

$$\frac{1}{10}, \frac{1}{2}, \frac{18}{25}, 1\frac{1}{2}, 1\frac{4}{5}$$



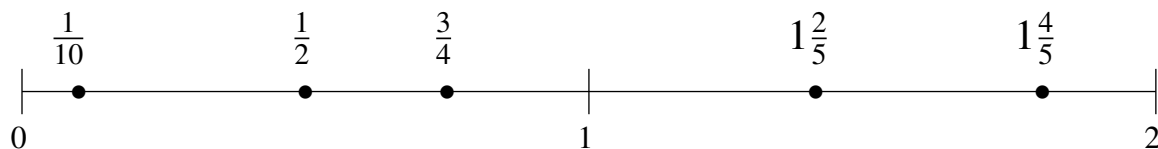
$$1\frac{6}{25}, \frac{2}{5}, 1\frac{3}{4}, \frac{4}{5}, 1\frac{1}{2}$$

$$\frac{2}{5}, \frac{4}{5}, 1\frac{6}{25}, 1\frac{1}{2}, 1\frac{3}{4}$$



$$\frac{1}{10}, 1\frac{4}{5}, \frac{3}{4}, 1\frac{2}{5}, \frac{1}{2}$$

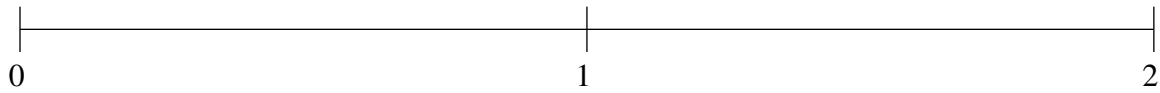
$$\frac{1}{10}, \frac{1}{2}, \frac{3}{4}, 1\frac{2}{5}, 1\frac{4}{5}$$



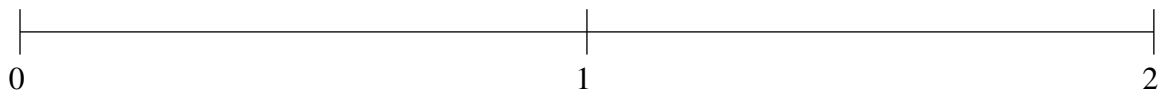
Ordenar Fracciones (C)

Ordene cada conjunto de fracciones usando la recta numérica.

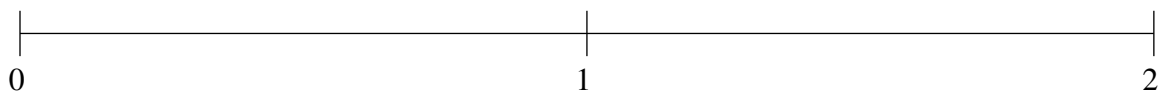
$$1\frac{1}{10}, \frac{1}{5}, 1\frac{3}{4}, \frac{1}{2}, \frac{4}{5}$$



$$1\frac{1}{2}, 1\frac{1}{4}, \frac{3}{4}, 1\frac{9}{10}, \frac{1}{5}$$



$$1\frac{9}{10}, 1\frac{3}{5}, \frac{1}{2}, \frac{17}{20}, \frac{1}{5}$$

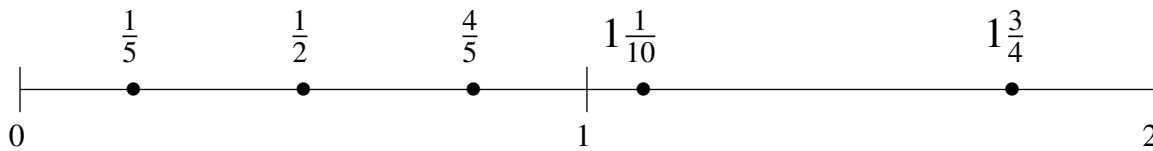


Ordenar Fracciones (C) Respuestas

Ordene cada conjunto de fracciones usando la recta numérica.

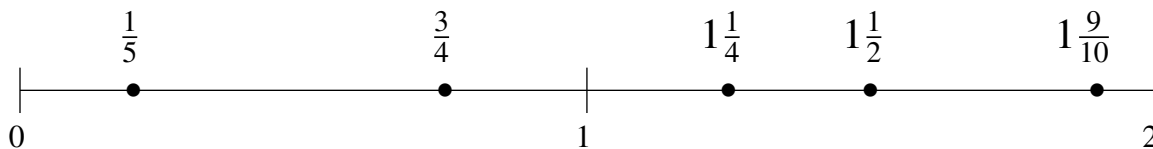
$$1\frac{1}{10}, \frac{1}{5}, 1\frac{3}{4}, \frac{1}{2}, \frac{4}{5}$$

$$\frac{1}{5}, \frac{1}{2}, \frac{4}{5}, 1\frac{1}{10}, 1\frac{3}{4}$$



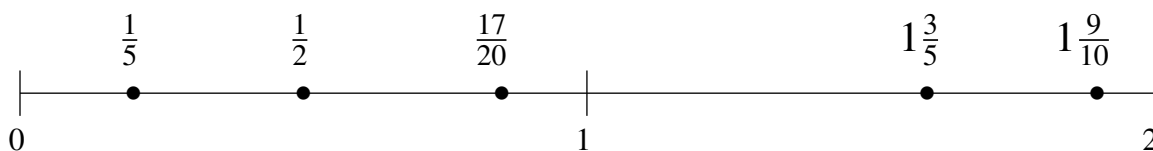
$$1\frac{1}{2}, 1\frac{1}{4}, \frac{3}{4}, 1\frac{9}{10}, \frac{1}{5}$$

$$\frac{1}{5}, \frac{3}{4}, 1\frac{1}{4}, 1\frac{1}{2}, 1\frac{9}{10}$$



$$1\frac{9}{10}, 1\frac{3}{5}, \frac{1}{2}, \frac{17}{20}, \frac{1}{5}$$

$$\frac{1}{5}, \frac{1}{2}, \frac{17}{20}, 1\frac{3}{5}, 1\frac{9}{10}$$



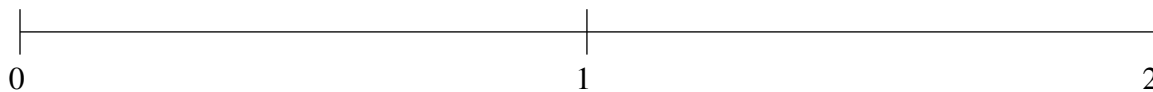
Ordenar Fracciones (D)

Ordene cada conjunto de fracciones usando la recta numérica.

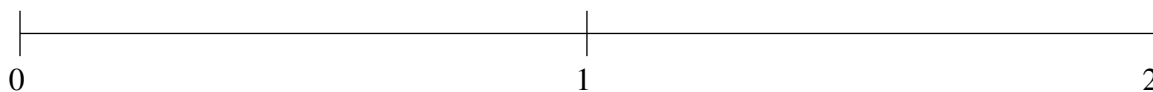
$$1\frac{1}{2}, 1\frac{4}{5}, \frac{12}{25}, \frac{3}{4}, 1\frac{1}{5}$$



$$1\frac{17}{20}, 1\frac{4}{25}, \frac{4}{5}, 1\frac{11}{25}, \frac{2}{5}$$



$$\frac{3}{5}, 1\frac{1}{2}, 1\frac{1}{5}, \frac{1}{5}, 1\frac{3}{4}$$

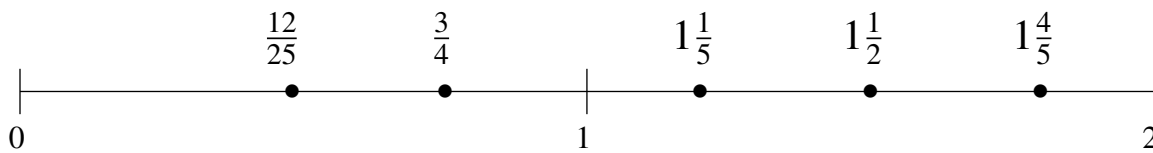


Ordenar Fracciones (D) Respuestas

Ordene cada conjunto de fracciones usando la recta numérica.

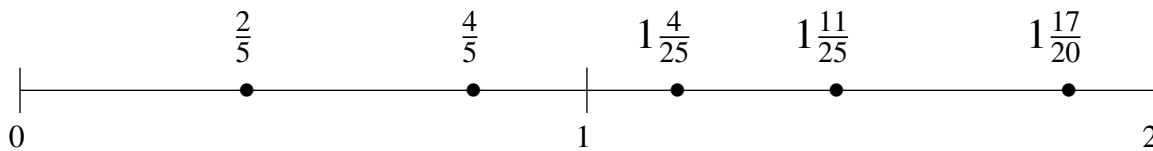
$$1\frac{1}{2}, 1\frac{4}{5}, \frac{12}{25}, \frac{3}{4}, 1\frac{1}{5}$$

$$\frac{12}{25}, \frac{3}{4}, 1\frac{1}{5}, 1\frac{1}{2}, 1\frac{4}{5}$$



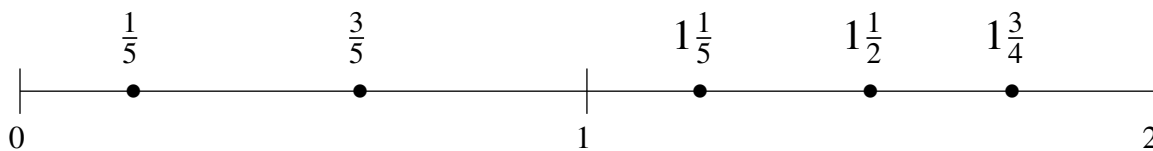
$$1\frac{17}{20}, 1\frac{4}{25}, \frac{4}{5}, 1\frac{11}{25}, \frac{2}{5}$$

$$\frac{2}{5}, \frac{4}{5}, 1\frac{4}{25}, 1\frac{11}{25}, 1\frac{17}{20}$$



$$\frac{3}{5}, 1\frac{1}{2}, 1\frac{1}{5}, \frac{1}{5}, 1\frac{3}{4}$$

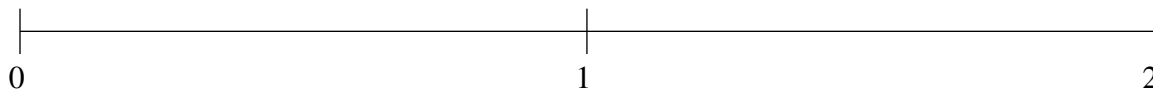
$$\frac{1}{5}, \frac{3}{5}, 1\frac{1}{5}, 1\frac{1}{2}, 1\frac{3}{4}$$



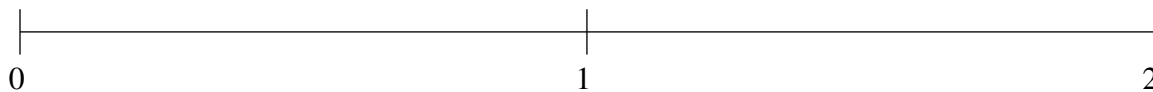
Ordenar Fracciones (E)

Ordene cada conjunto de fracciones usando la recta numérica.

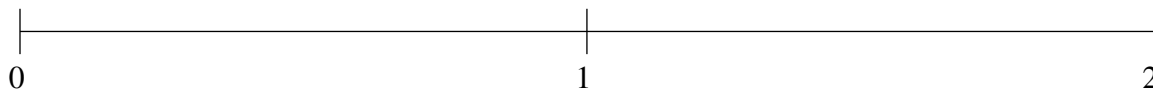
$$\frac{1}{5}, 1\frac{17}{20}, \frac{1}{2}, 1\frac{14}{25}, 1\frac{3}{10}$$



$$1\frac{1}{10}, \frac{4}{5}, \frac{1}{5}, \frac{29}{50}, 1\frac{4}{5}$$



$$\frac{1}{2}, \frac{1}{4}, 1\frac{2}{5}, \frac{3}{4}, 1\frac{3}{4}$$

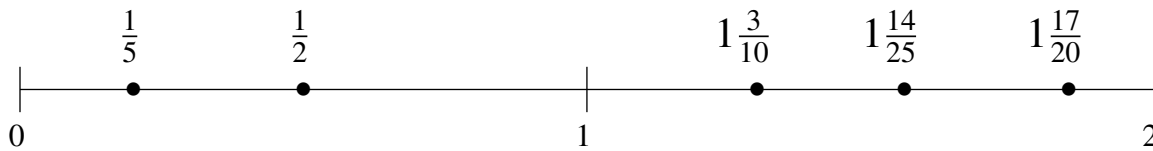


Ordenar Fracciones (E) Respuestas

Ordene cada conjunto de fracciones usando la recta numérica.

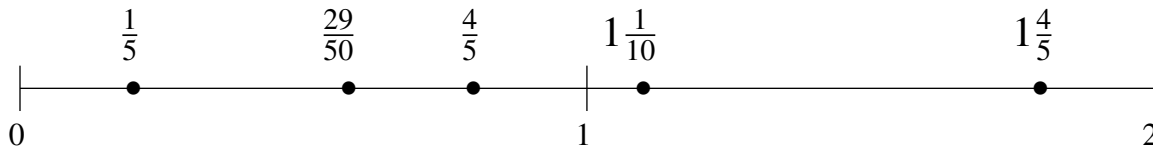
$$\frac{1}{5}, 1\frac{17}{20}, \frac{1}{2}, 1\frac{14}{25}, 1\frac{3}{10}$$

$$\frac{1}{5}, \frac{1}{2}, 1\frac{3}{10}, 1\frac{14}{25}, 1\frac{17}{20}$$



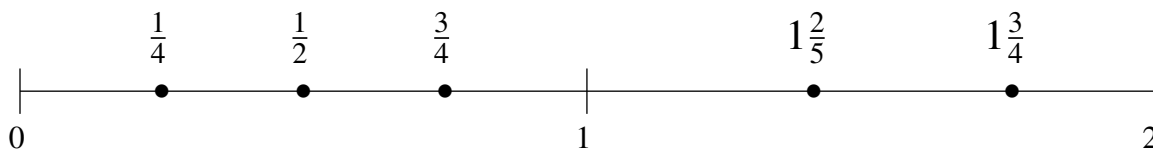
$$1\frac{1}{10}, \frac{4}{5}, \frac{1}{5}, \frac{29}{50}, 1\frac{4}{5}$$

$$\frac{1}{5}, \frac{29}{50}, \frac{4}{5}, 1\frac{1}{10}, 1\frac{4}{5}$$



$$\frac{1}{2}, \frac{1}{4}, 1\frac{2}{5}, \frac{3}{4}, 1\frac{3}{4}$$

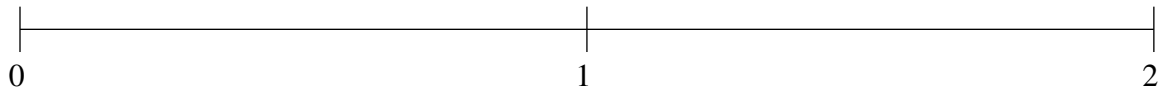
$$\frac{1}{4}, \frac{1}{2}, \frac{3}{4}, 1\frac{2}{5}, 1\frac{3}{4}$$



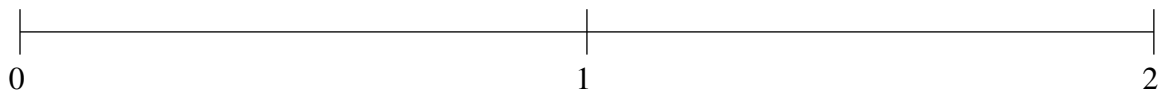
Ordenar Fracciones (F)

Ordene cada conjunto de fracciones usando la recta numérica.

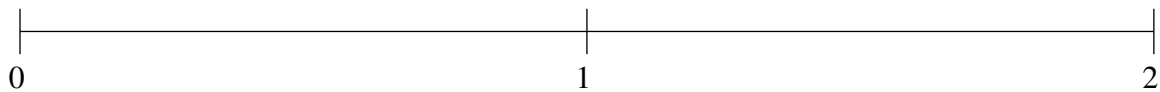
$$1\frac{23}{50}, \frac{9}{50}, 1\frac{17}{20}, 1\frac{1}{5}, \frac{1}{2}$$



$$1\frac{3}{4}, \frac{3}{4}, 1\frac{1}{2}, 1\frac{1}{20}, \frac{1}{2}$$



$$\frac{1}{5}, 1\frac{4}{5}, 1\frac{1}{2}, 1\frac{1}{4}, \frac{1}{2}$$

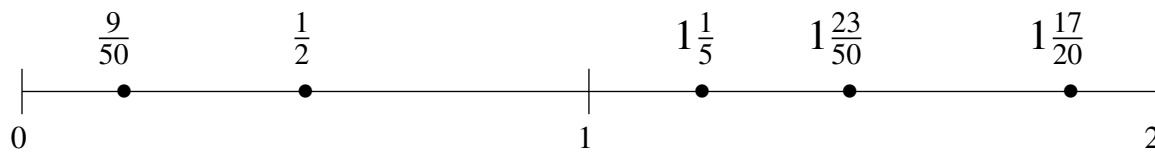


Ordenar Fracciones (F) Respuestas

Ordene cada conjunto de fracciones usando la recta numérica.

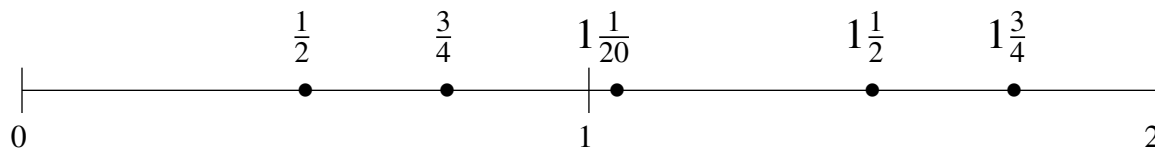
$$1\frac{23}{50}, \frac{9}{50}, 1\frac{17}{20}, 1\frac{1}{5}, \frac{1}{2}$$

$$\frac{9}{50}, \frac{1}{2}, 1\frac{1}{5}, 1\frac{23}{50}, 1\frac{17}{20}$$



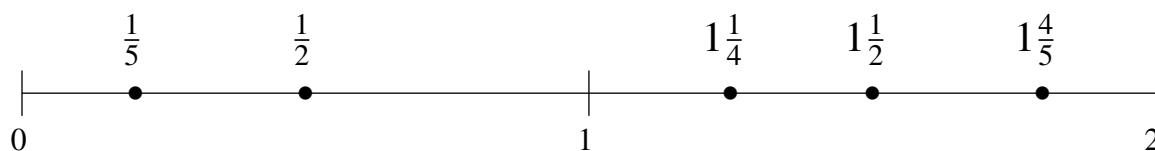
$$1\frac{3}{4}, \frac{3}{4}, 1\frac{1}{2}, 1\frac{1}{20}, \frac{1}{2}$$

$$\frac{1}{2}, \frac{3}{4}, 1\frac{1}{20}, 1\frac{1}{2}, 1\frac{3}{4}$$



$$\frac{1}{5}, 1\frac{4}{5}, 1\frac{1}{2}, 1\frac{1}{4}, \frac{1}{2}$$

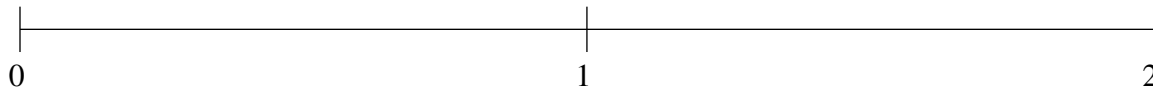
$$\frac{1}{5}, \frac{1}{2}, 1\frac{1}{4}, 1\frac{1}{2}, 1\frac{4}{5}$$



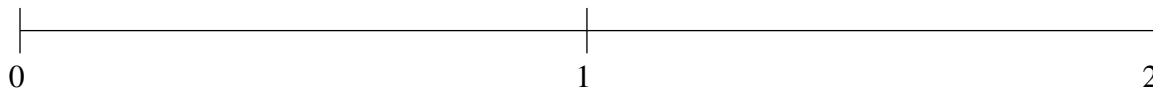
Ordenar Fracciones (G)

Ordene cada conjunto de fracciones usando la recta numérica.

$$1\frac{3}{4}, 1\frac{1}{2}, \frac{4}{5}, \frac{1}{2}, \frac{1}{10}$$



$$1\frac{16}{25}, 1\frac{3}{10}, \frac{1}{2}, \frac{1}{20}, \frac{3}{4}$$



$$1\frac{1}{5}, \frac{1}{2}, \frac{3}{4}, 1\frac{24}{25}, 1\frac{1}{2}$$



Ordenar Fracciones (G) Respuestas

Ordene cada conjunto de fracciones usando la recta numérica.

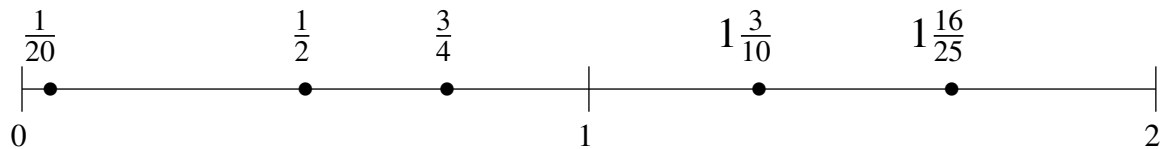
$$1\frac{3}{4}, 1\frac{1}{2}, \frac{4}{5}, \frac{1}{2}, \frac{1}{10}$$

$$\frac{1}{10}, \frac{1}{2}, \frac{4}{5}, 1\frac{1}{2}, 1\frac{3}{4}$$



$$1\frac{16}{25}, 1\frac{3}{10}, \frac{1}{2}, \frac{1}{20}, \frac{3}{4}$$

$$\frac{1}{20}, \frac{1}{2}, \frac{3}{4}, 1\frac{3}{10}, 1\frac{16}{25}$$



$$1\frac{1}{5}, \frac{1}{2}, \frac{3}{4}, 1\frac{24}{25}, 1\frac{1}{2}$$

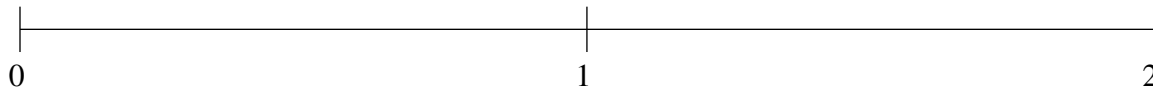
$$\frac{1}{2}, \frac{3}{4}, 1\frac{1}{5}, 1\frac{1}{2}, 1\frac{24}{25}$$



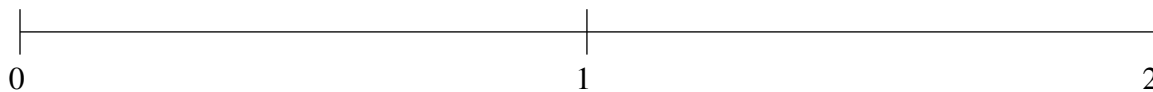
Ordenar Fracciones (H)

Ordene cada conjunto de fracciones usando la recta numérica.

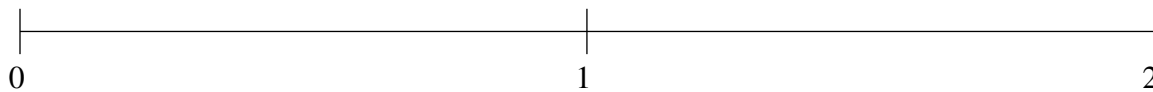
$$1\frac{1}{2}, \frac{3}{20}, 1\frac{1}{5}, 1\frac{3}{4}, \frac{3}{4}$$



$$1\frac{3}{4}, 1\frac{1}{2}, \frac{3}{5}, 1\frac{1}{4}, \frac{1}{50}$$



$$1\frac{7}{10}, \frac{3}{4}, \frac{1}{4}, 1\frac{9}{20}, \frac{1}{2}$$

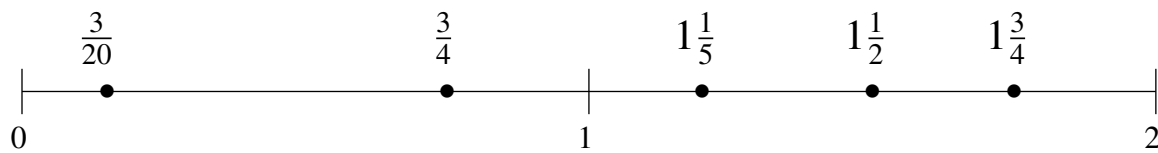


Ordenar Fracciones (H) Respuestas

Ordene cada conjunto de fracciones usando la recta numérica.

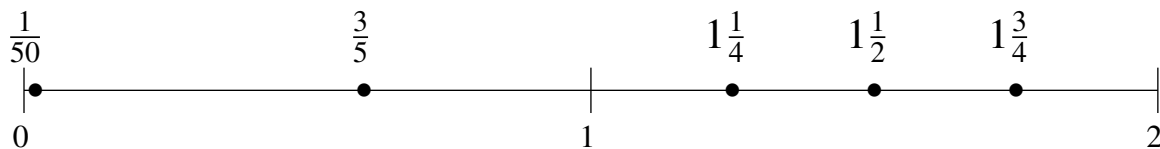
$$1\frac{1}{2}, \frac{3}{20}, 1\frac{1}{5}, 1\frac{3}{4}, \frac{3}{4}$$

$$\frac{3}{20}, \frac{3}{4}, 1\frac{1}{5}, 1\frac{1}{2}, 1\frac{3}{4}$$



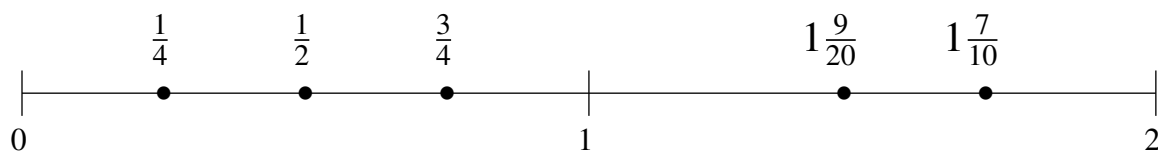
$$1\frac{3}{4}, 1\frac{1}{2}, \frac{3}{5}, 1\frac{1}{4}, \frac{1}{50}$$

$$\frac{1}{50}, \frac{3}{5}, 1\frac{1}{4}, 1\frac{1}{2}, 1\frac{3}{4}$$



$$1\frac{7}{10}, \frac{3}{4}, \frac{1}{4}, 1\frac{9}{20}, \frac{1}{2}$$

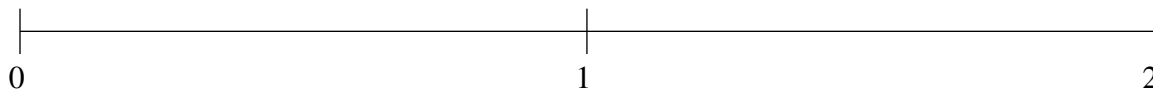
$$\frac{1}{4}, \frac{1}{2}, \frac{3}{4}, 1\frac{9}{20}, 1\frac{7}{10}$$



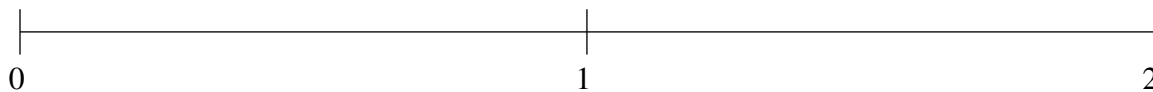
Ordenar Fracciones (I)

Ordene cada conjunto de fracciones usando la recta numérica.

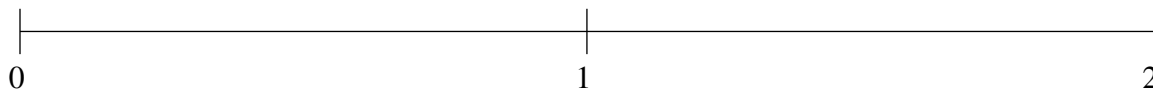
$$\frac{1}{5}, 1\frac{4}{5}, 1\frac{1}{2}, \frac{3}{4}, \frac{12}{25}$$



$$\frac{1}{5}, \frac{4}{5}, 1\frac{3}{4}, 1\frac{1}{2}, \frac{1}{2}$$



$$\frac{1}{5}, 1\frac{1}{2}, 1\frac{3}{20}, \frac{1}{2}, 1\frac{3}{4}$$

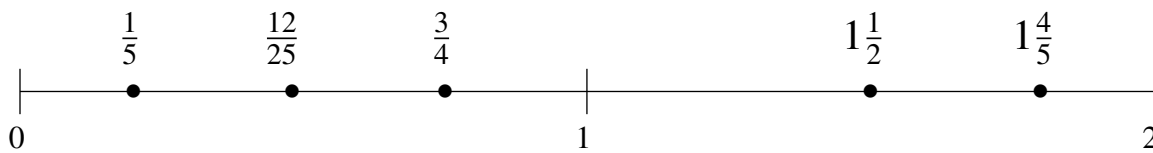


Ordenar Fracciones (I) Respuestas

Ordene cada conjunto de fracciones usando la recta numérica.

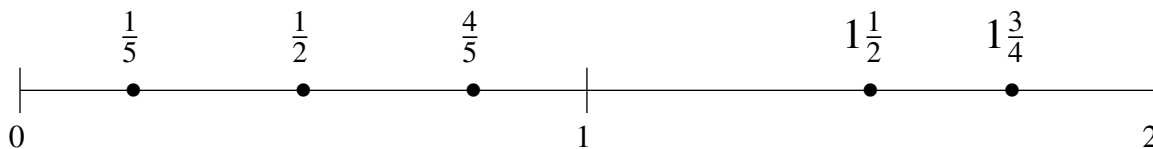
$$\frac{1}{5}, 1\frac{4}{5}, 1\frac{1}{2}, \frac{3}{4}, \frac{12}{25}$$

$$\frac{1}{5}, \frac{12}{25}, \frac{3}{4}, 1\frac{1}{2}, 1\frac{4}{5}$$



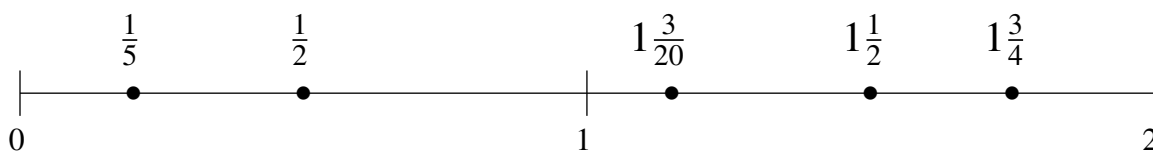
$$\frac{1}{5}, \frac{4}{5}, 1\frac{3}{4}, 1\frac{1}{2}, \frac{1}{2}$$

$$\frac{1}{5}, \frac{1}{2}, \frac{4}{5}, 1\frac{1}{2}, 1\frac{3}{4}$$



$$\frac{1}{5}, 1\frac{1}{2}, 1\frac{3}{20}, \frac{1}{2}, 1\frac{3}{4}$$

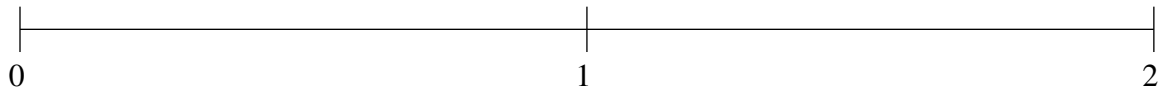
$$\frac{1}{5}, \frac{1}{2}, 1\frac{3}{20}, 1\frac{1}{2}, 1\frac{3}{4}$$



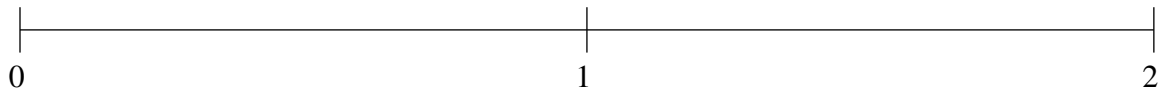
Ordenar Fracciones (J)

Ordene cada conjunto de fracciones usando la recta numérica.

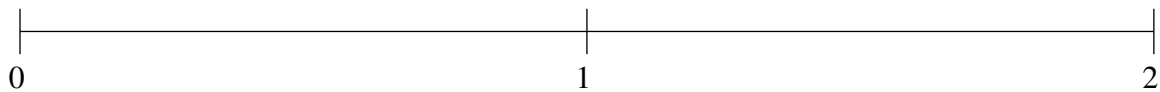
$$1\frac{4}{5}, 1\frac{1}{2}, \frac{9}{25}, 1\frac{9}{50}, \frac{3}{5}$$



$$\frac{1}{4}, 1\frac{1}{2}, \frac{3}{4}, \frac{1}{2}, 1\frac{1}{5}$$



$$1\frac{1}{2}, \frac{1}{2}, \frac{3}{4}, 1\frac{4}{5}, 1\frac{1}{5}$$

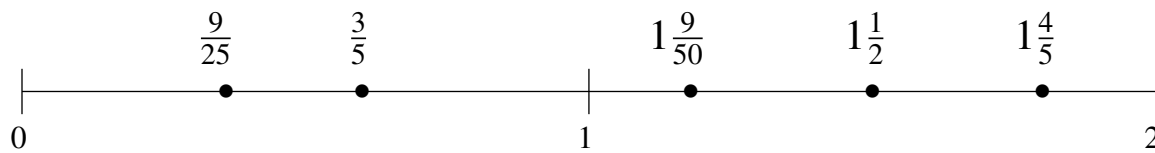


Ordenar Fracciones (J) Respuestas

Ordene cada conjunto de fracciones usando la recta numérica.

$$1\frac{4}{5}, 1\frac{1}{2}, \frac{9}{25}, 1\frac{9}{50}, \frac{3}{5}$$

$$\frac{9}{25}, \frac{3}{5}, 1\frac{9}{50}, 1\frac{1}{2}, 1\frac{4}{5}$$



$$\frac{1}{4}, 1\frac{1}{2}, \frac{3}{4}, \frac{1}{2}, 1\frac{1}{5}$$

$$\frac{1}{4}, \frac{1}{2}, \frac{3}{4}, 1\frac{1}{5}, 1\frac{1}{2}$$



$$1\frac{1}{2}, \frac{1}{2}, \frac{3}{4}, 1\frac{4}{5}, 1\frac{1}{5}$$

$$\frac{1}{2}, \frac{3}{4}, 1\frac{1}{5}, 1\frac{1}{2}, 1\frac{4}{5}$$

