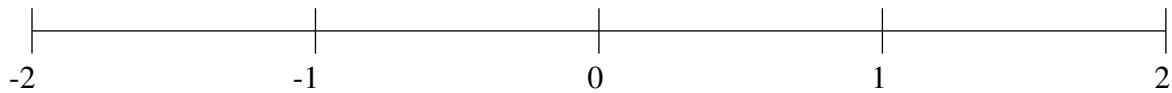


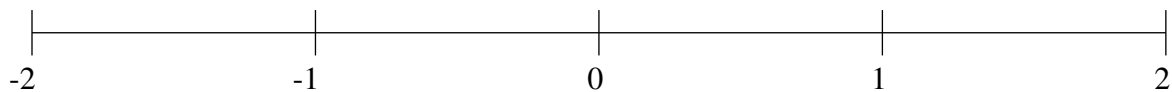
## Ordenar Fracciones (A)

Ordene cada conjunto de fracciones usando la recta numérica.

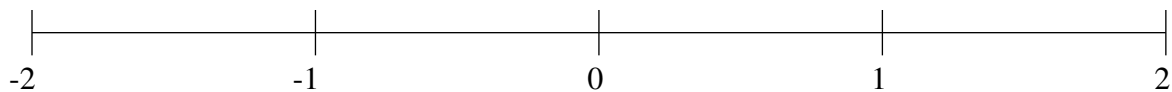
$$-1\frac{5}{44}, 1\frac{1}{8}, \frac{4}{7}, -1\frac{1}{2}, 1\frac{11}{19}, -\frac{7}{18}, -\frac{23}{35}, \frac{5}{18}$$



$$-1\frac{1}{13}, -1\frac{11}{14}, -\frac{1}{3}, -\frac{20}{29}, 1\frac{13}{14}, 1\frac{13}{21}, -1\frac{4}{7}, \frac{1}{3}$$



$$\frac{1}{7}, 1\frac{1}{2}, \frac{4}{7}, -\frac{23}{36}, -1\frac{2}{7}, -1\frac{5}{6}, 1\frac{3}{11}, -\frac{11}{29}$$

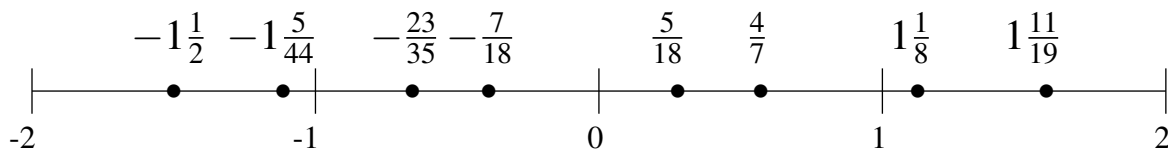


## Ordenar Fracciones (A) Respuestas

Ordene cada conjunto de fracciones usando la recta numérica.

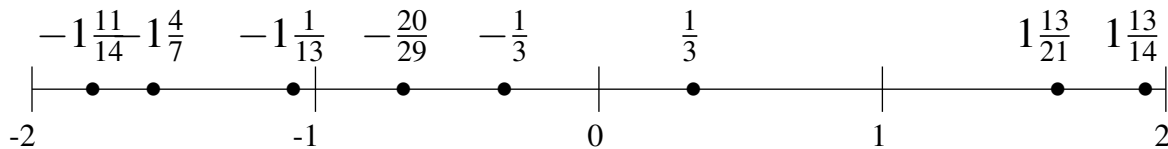
$$-1\frac{5}{44}, 1\frac{1}{8}, \frac{4}{7}, -1\frac{1}{2}, 1\frac{11}{19}, -\frac{7}{18}, -\frac{23}{35}, \frac{5}{18}$$

$$-1\frac{1}{2}, -1\frac{5}{44}, -\frac{23}{35}, -\frac{7}{18}, \frac{5}{18}, \frac{4}{7}, 1\frac{1}{8}, 1\frac{11}{19}$$



$$-1\frac{1}{13}, -1\frac{11}{14}, -\frac{1}{3}, -\frac{20}{29}, 1\frac{13}{14}, 1\frac{13}{21}, -1\frac{4}{7}, \frac{1}{3}$$

$$-1\frac{11}{14}, -1\frac{4}{7}, -1\frac{1}{13}, -\frac{20}{29}, -\frac{1}{3}, \frac{1}{3}, 1\frac{13}{21}, 1\frac{13}{14}$$



$$\frac{1}{7}, 1\frac{1}{2}, \frac{4}{7}, -\frac{23}{36}, -1\frac{2}{7}, -1\frac{5}{6}, 1\frac{3}{11}, -\frac{11}{29}$$

$$-1\frac{5}{6}, -1\frac{2}{7}, -\frac{23}{36}, -\frac{11}{29}, \frac{1}{7}, \frac{4}{7}, 1\frac{3}{11}, 1\frac{1}{2}$$

