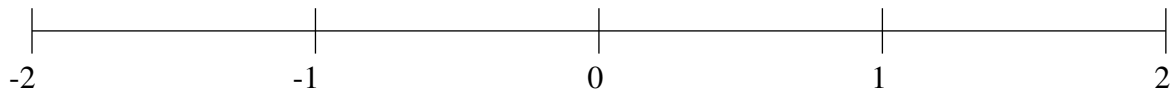


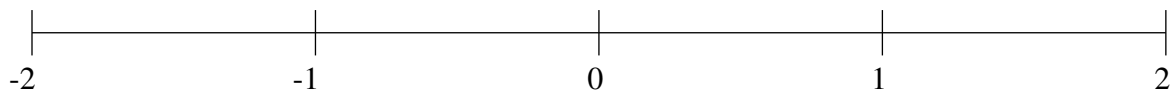
Ordenar Fracciones (E)

Ordene cada conjunto de fracciones usando la recta numérica.

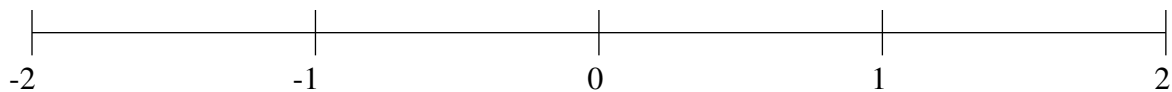
$$-1\frac{7}{9}, \frac{3}{4}, -1\frac{5}{11}, -1\frac{1}{6}, \frac{7}{31}, -\frac{1}{3}, 1\frac{1}{4}, 1\frac{3}{5}$$



$$1\frac{21}{74}, \frac{3}{4}, 1\frac{7}{8}, -\frac{17}{19}, -1\frac{1}{9}, 1\frac{1}{2}, \frac{1}{6}, -\frac{1}{4}$$



$$-\frac{3}{47}, -1\frac{8}{9}, -1\frac{3}{8}, 1\frac{5}{7}, -\frac{1}{2}, \frac{84}{89}, 1\frac{1}{4}, -1\frac{1}{19}$$

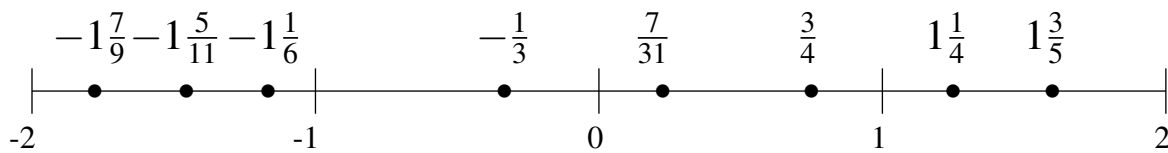


Ordenar Fracciones (E) Respuestas

Ordene cada conjunto de fracciones usando la recta numérica.

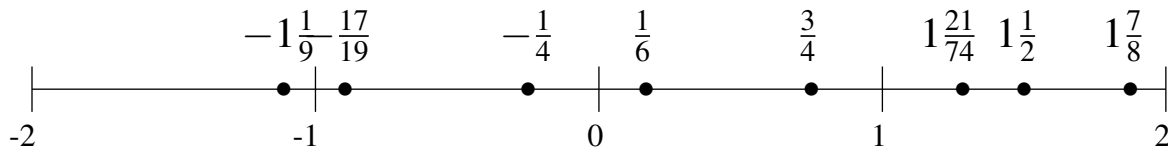
$$-1\frac{7}{9}, \frac{3}{4}, -1\frac{5}{11}, -1\frac{1}{6}, \frac{7}{31}, -\frac{1}{3}, 1\frac{1}{4}, 1\frac{3}{5}$$

$$-1\frac{7}{9}, -1\frac{5}{11}, -1\frac{1}{6}, -\frac{1}{3}, \frac{7}{31}, \frac{3}{4}, 1\frac{1}{4}, 1\frac{3}{5}$$



$$1\frac{21}{74}, \frac{3}{4}, 1\frac{7}{8}, -\frac{17}{19}, -1\frac{1}{9}, 1\frac{1}{2}, \frac{1}{6}, -\frac{1}{4}$$

$$-1\frac{1}{9}, -\frac{17}{19}, -\frac{1}{4}, \frac{1}{6}, \frac{3}{4}, 1\frac{21}{74}, 1\frac{1}{2}, 1\frac{7}{8}$$



$$-\frac{3}{47}, -1\frac{8}{9}, -1\frac{3}{8}, 1\frac{5}{7}, -\frac{1}{2}, \frac{84}{89}, 1\frac{1}{4}, -1\frac{1}{19}$$

$$-1\frac{8}{9}, -1\frac{3}{8}, -1\frac{1}{19}, -\frac{1}{2}, -\frac{3}{47}, \frac{84}{89}, 1\frac{1}{4}, 1\frac{5}{7}$$

