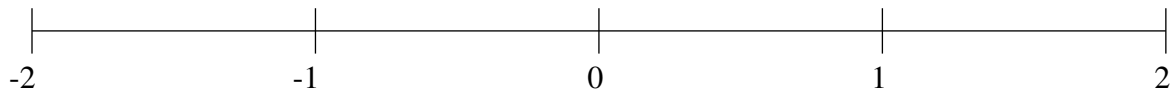


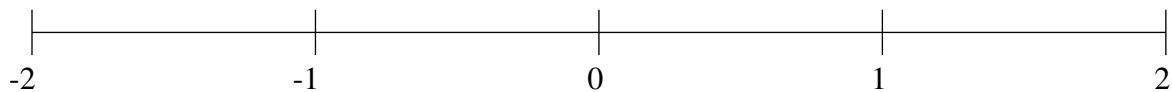
Ordenar Fracciones (G)

Ordene cada conjunto de fracciones usando la recta numérica.

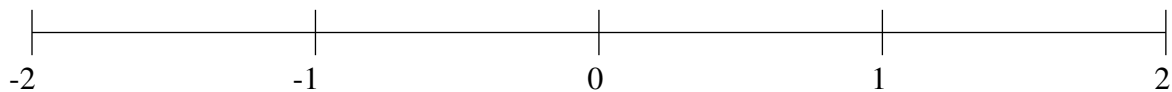
$$-\frac{1}{5}, -1\frac{5}{19}, \frac{8}{25}, 1\frac{7}{68}, \frac{19}{27}, -1\frac{6}{7}, -1\frac{11}{17}, 1\frac{12}{25}$$



$$-1\frac{1}{2}, \frac{1}{3}, -\frac{4}{5}, \frac{1}{14}, -\frac{1}{4}, 1\frac{2}{7}, 1\frac{2}{3}, -\frac{7}{15}$$



$$-\frac{1}{6}, -1\frac{3}{4}, -1\frac{2}{9}, 1\frac{11}{63}, -1\frac{7}{13}, 1\frac{25}{29}, -1\frac{38}{39}, -\frac{1}{2}$$

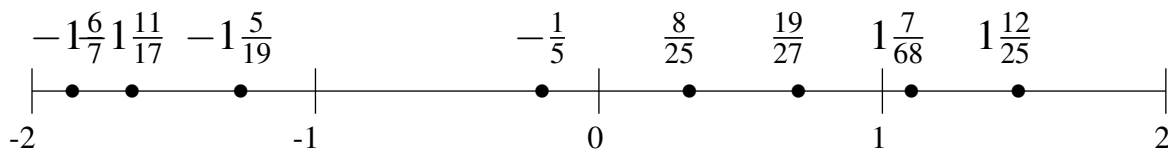


Ordenar Fracciones (G) Respuestas

Ordene cada conjunto de fracciones usando la recta numérica.

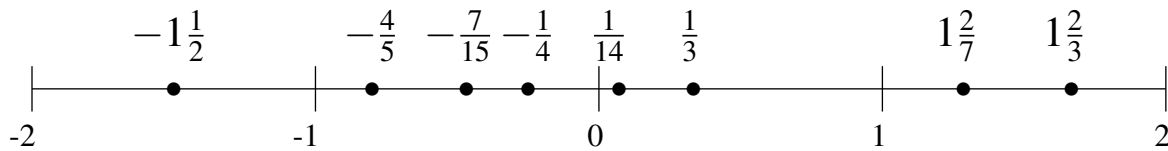
$$-\frac{1}{5}, -1\frac{5}{19}, \frac{8}{25}, 1\frac{7}{68}, \frac{19}{27}, -1\frac{6}{7}, -1\frac{11}{17}, 1\frac{12}{25}$$

$$-1\frac{6}{7}, -1\frac{11}{17}, -1\frac{5}{19}, -\frac{1}{5}, \frac{8}{25}, \frac{19}{27}, 1\frac{7}{68}, 1\frac{12}{25}$$



$$-1\frac{1}{2}, \frac{1}{3}, -\frac{4}{5}, \frac{1}{14}, -\frac{1}{4}, 1\frac{2}{7}, 1\frac{2}{3}, -\frac{7}{15}$$

$$-1\frac{1}{2}, -\frac{4}{5}, -\frac{7}{15}, -\frac{1}{4}, \frac{1}{14}, \frac{1}{3}, 1\frac{2}{7}, 1\frac{2}{3}$$



$$-\frac{1}{6}, -1\frac{3}{4}, -1\frac{2}{9}, 1\frac{11}{63}, -1\frac{7}{13}, 1\frac{25}{29}, -1\frac{38}{39}, -\frac{1}{2}$$

$$-1\frac{38}{39}, -1\frac{3}{4}, -1\frac{7}{13}, -1\frac{2}{9}, -\frac{1}{2}, -\frac{1}{6}, 1\frac{11}{63}, 1\frac{25}{29}$$

