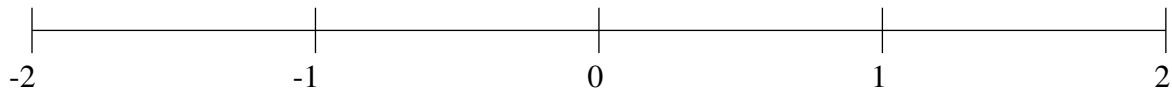


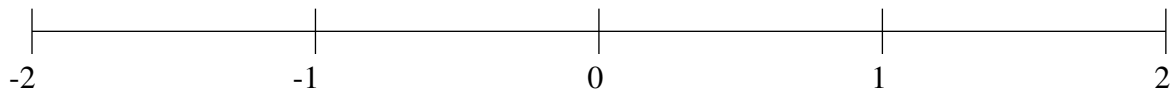
Ordenar Fracciones (I)

Ordene cada conjunto de fracciones usando la recta numérica.

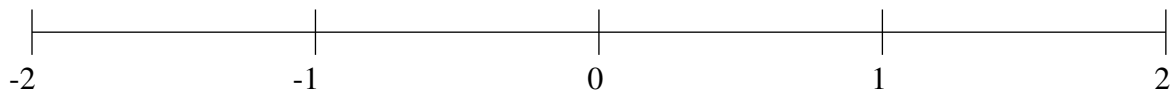
$$1\frac{2}{5}, -\frac{16}{27}, -1\frac{3}{4}, 1\frac{25}{28}, -1\frac{23}{24}, -\frac{15}{16}, \frac{3}{4}, \frac{1}{3}$$



$$\frac{1}{3}, \frac{61}{71}, -\frac{3}{20}, 1\frac{4}{31}, -1\frac{5}{8}, -\frac{69}{80}, -1\frac{5}{6}, 1\frac{13}{14}$$



$$\frac{1}{2}, -1\frac{3}{17}, \frac{3}{14}, -\frac{1}{3}, 1\frac{41}{61}, -\frac{12}{13}, 1\frac{7}{8}, -1\frac{9}{13}$$

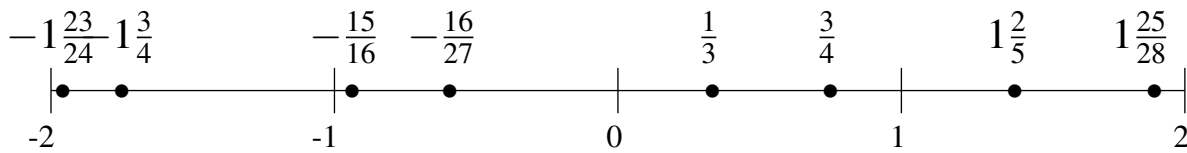


Ordenar Fracciones (I) Respuestas

Ordene cada conjunto de fracciones usando la recta numérica.

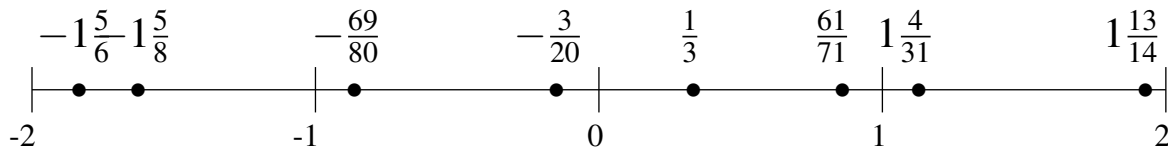
$$1\frac{2}{5}, -\frac{16}{27}, -1\frac{3}{4}, 1\frac{25}{28}, -1\frac{23}{24}, -\frac{15}{16}, \frac{3}{4}, \frac{1}{3}$$

$$-1\frac{23}{24}, -1\frac{3}{4}, -\frac{15}{16}, -\frac{16}{27}, \frac{1}{3}, \frac{3}{4}, 1\frac{2}{5}, 1\frac{25}{28}$$



$$\frac{1}{3}, \frac{61}{71}, -\frac{3}{20}, 1\frac{4}{31}, -1\frac{5}{8}, -\frac{69}{80}, -1\frac{5}{6}, 1\frac{13}{14}$$

$$-1\frac{5}{6}, -1\frac{5}{8}, -\frac{69}{80}, -\frac{3}{20}, \frac{1}{3}, \frac{61}{71}, 1\frac{4}{31}, 1\frac{13}{14}$$



$$\frac{1}{2}, -1\frac{3}{17}, \frac{3}{14}, -\frac{1}{3}, 1\frac{41}{61}, -\frac{12}{13}, 1\frac{7}{8}, -1\frac{9}{13}$$

$$-1\frac{9}{13}, -1\frac{3}{17}, -\frac{12}{13}, -\frac{1}{3}, \frac{3}{14}, \frac{1}{2}, 1\frac{41}{61}, 1\frac{7}{8}$$

