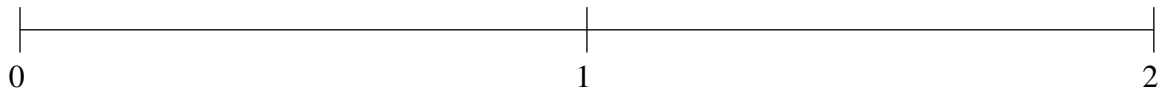


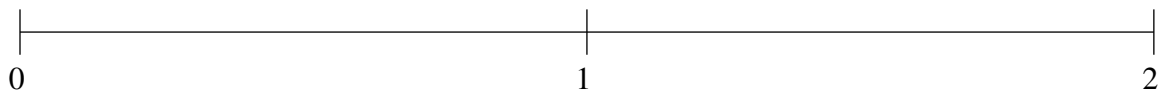
Ordenar Fracciones (A)

Ordene cada conjunto de fracciones usando la recta numérica.

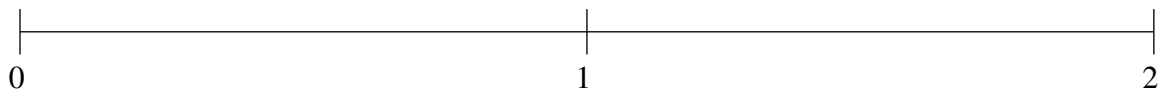
$$1\frac{7}{9}, \frac{2}{5}, \frac{3}{4}, 1\frac{1}{4}, \frac{7}{65}$$



$$\frac{27}{64}, 1\frac{12}{13}, 1\frac{1}{11}, \frac{9}{74}, 1\frac{11}{28}$$



$$1\frac{1}{3}, \frac{1}{2}, 1\frac{1}{14}, 1\frac{2}{3}, \frac{1}{69}$$



Ordenar Fracciones (A) Respuestas

Ordene cada conjunto de fracciones usando la recta numérica.

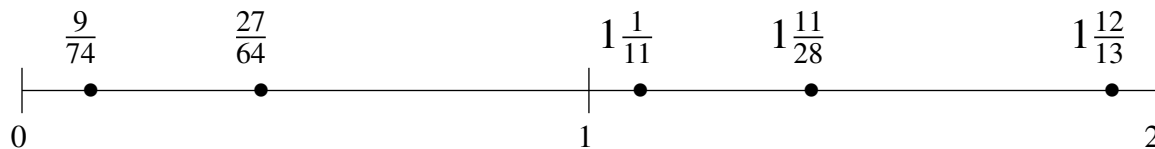
$$1\frac{7}{9}, \frac{2}{5}, \frac{3}{4}, 1\frac{1}{4}, \frac{7}{65}$$

$$\frac{7}{65}, \frac{2}{5}, \frac{3}{4}, 1\frac{1}{4}, 1\frac{7}{9}$$



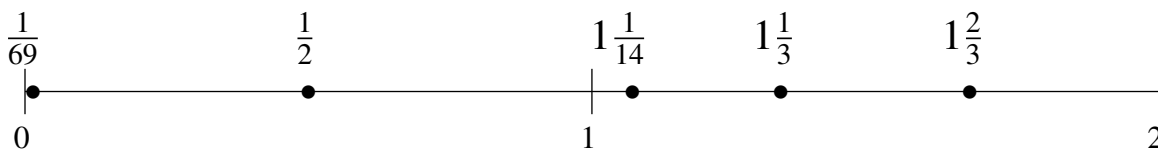
$$\frac{27}{64}, 1\frac{12}{13}, 1\frac{1}{11}, \frac{9}{74}, 1\frac{11}{28}$$

$$\frac{9}{74}, \frac{27}{64}, 1\frac{1}{11}, 1\frac{11}{28}, 1\frac{12}{13}$$



$$1\frac{1}{3}, \frac{1}{2}, 1\frac{1}{14}, 1\frac{2}{3}, \frac{1}{69}$$

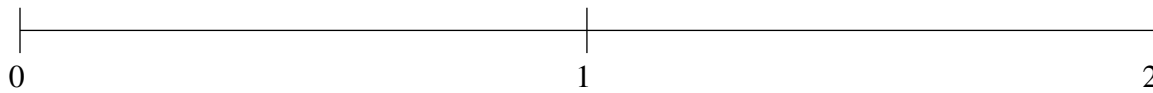
$$\frac{1}{69}, \frac{1}{2}, 1\frac{1}{14}, 1\frac{1}{3}, 1\frac{2}{3}$$



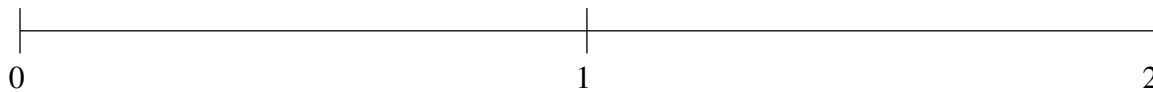
Ordenar Fracciones (B)

Ordene cada conjunto de fracciones usando la recta numérica.

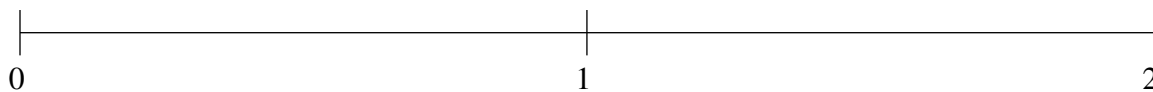
$$1\frac{3}{7}, \frac{1}{7}, 1\frac{3}{17}, 1\frac{52}{53}, 1\frac{2}{3}$$



$$1\frac{5}{11}, \frac{1}{3}, 1\frac{1}{4}, \frac{13}{24}, \frac{4}{5}$$



$$1\frac{13}{69}, \frac{1}{4}, \frac{27}{44}, \frac{6}{7}, 1\frac{1}{2}$$

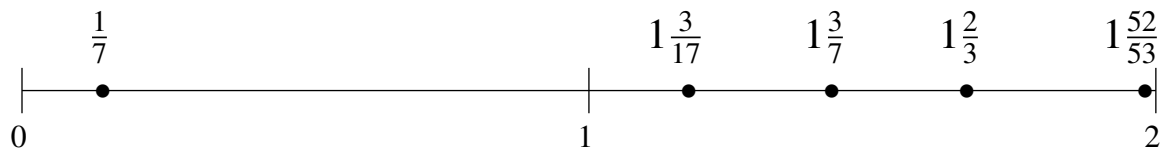


Ordenar Fracciones (B) Respuestas

Ordene cada conjunto de fracciones usando la recta numérica.

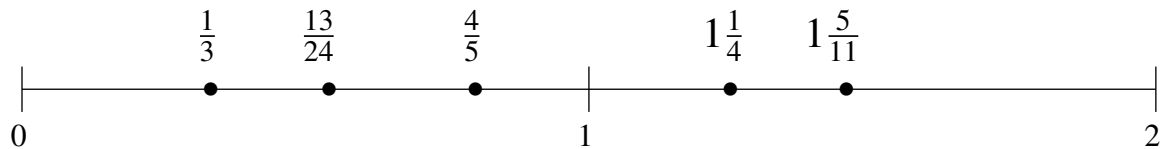
$$1\frac{3}{7}, \frac{1}{7}, 1\frac{3}{17}, 1\frac{52}{53}, 1\frac{2}{3}$$

$$\frac{1}{7}, 1\frac{3}{17}, 1\frac{3}{7}, 1\frac{2}{3}, 1\frac{52}{53}$$



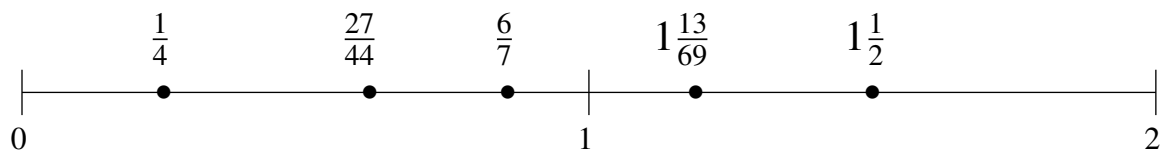
$$1\frac{5}{11}, \frac{1}{3}, 1\frac{1}{4}, \frac{13}{24}, \frac{4}{5}$$

$$\frac{1}{3}, \frac{13}{24}, \frac{4}{5}, 1\frac{1}{4}, 1\frac{5}{11}$$



$$1\frac{13}{69}, \frac{1}{4}, \frac{27}{44}, \frac{6}{7}, 1\frac{1}{2}$$

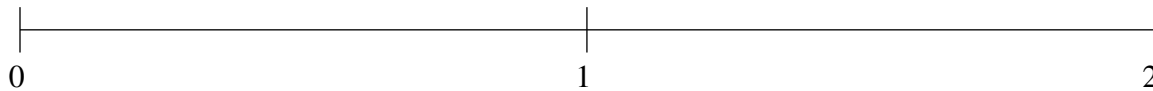
$$\frac{1}{4}, \frac{27}{44}, \frac{6}{7}, 1\frac{13}{69}, 1\frac{1}{2}$$



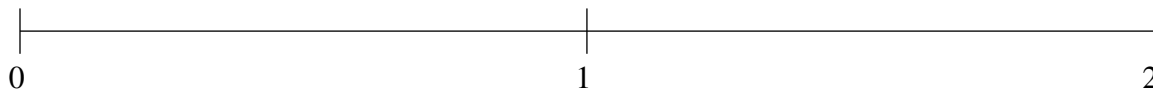
Ordenar Fracciones (C)

Ordene cada conjunto de fracciones usando la recta numérica.

$$\frac{1}{5}, \frac{23}{29}, 1\frac{24}{25}, 1\frac{1}{2}, 1\frac{3}{4}$$



$$1\frac{2}{5}, \frac{46}{49}, \frac{3}{50}, \frac{13}{31}, 1\frac{33}{40}$$



$$1\frac{11}{15}, \frac{1}{14}, 1\frac{1}{5}, 1\frac{1}{2}, \frac{7}{9}$$



Ordenar Fracciones (C) Respuestas

Ordene cada conjunto de fracciones usando la recta numérica.

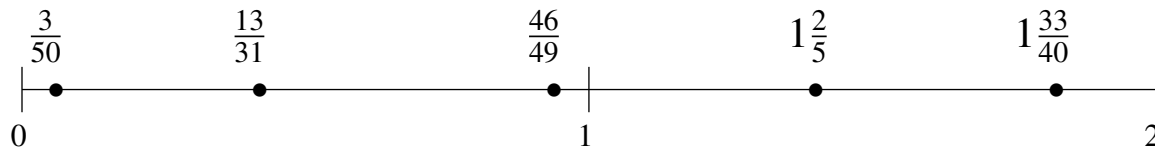
$$\frac{1}{5}, \frac{23}{29}, 1\frac{24}{25}, 1\frac{1}{2}, 1\frac{3}{4}$$

$$\frac{1}{5}, \frac{23}{29}, 1\frac{1}{2}, 1\frac{3}{4}, 1\frac{24}{25}$$



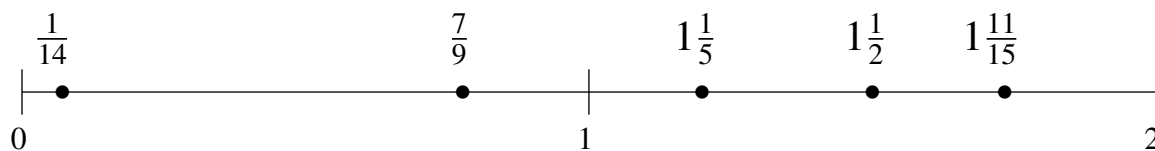
$$1\frac{2}{5}, \frac{46}{49}, \frac{3}{50}, \frac{13}{31}, 1\frac{33}{40}$$

$$\frac{3}{50}, \frac{13}{31}, \frac{46}{49}, 1\frac{2}{5}, 1\frac{33}{40}$$



$$1\frac{11}{15}, \frac{1}{14}, 1\frac{1}{5}, 1\frac{1}{2}, \frac{7}{9}$$

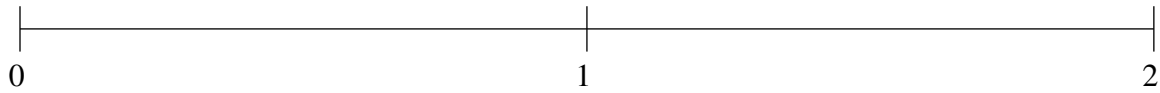
$$\frac{1}{14}, \frac{7}{9}, 1\frac{1}{5}, 1\frac{1}{2}, 1\frac{11}{15}$$



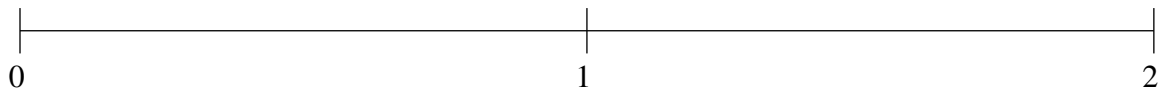
Ordenar Fracciones (D)

Ordene cada conjunto de fracciones usando la recta numérica.

$$\frac{5}{9}, 1\frac{5}{11}, \frac{1}{3}, 1\frac{32}{35}, \frac{13}{15}$$



$$\frac{2}{19}, \frac{7}{9}, 1\frac{13}{14}, 1\frac{19}{43}, \frac{3}{8}$$



$$\frac{9}{59}, \frac{9}{11}, 1\frac{12}{13}, \frac{15}{28}, 1\frac{23}{38}$$

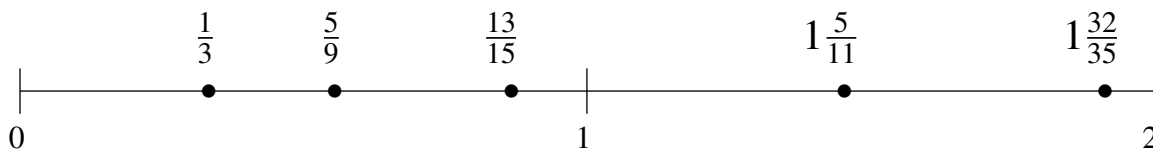


Ordenar Fracciones (D) Respuestas

Ordene cada conjunto de fracciones usando la recta numérica.

$$\frac{5}{9}, 1\frac{5}{11}, \frac{1}{3}, 1\frac{32}{35}, \frac{13}{15}$$

$$\frac{1}{3}, \frac{5}{9}, \frac{13}{15}, 1\frac{5}{11}, 1\frac{32}{35}$$



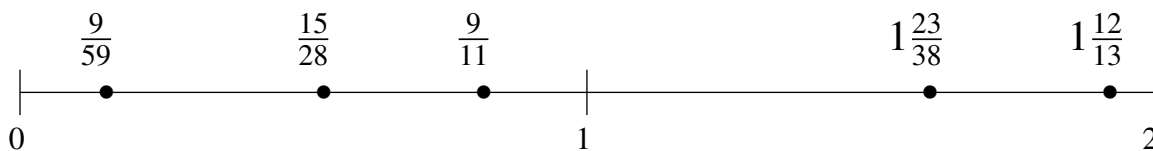
$$\frac{2}{19}, \frac{7}{9}, 1\frac{13}{14}, 1\frac{19}{43}, \frac{3}{8}$$

$$\frac{2}{19}, \frac{3}{8}, \frac{7}{9}, 1\frac{19}{43}, 1\frac{13}{14}$$



$$\frac{9}{59}, \frac{9}{11}, 1\frac{12}{13}, \frac{15}{28}, 1\frac{23}{38}$$

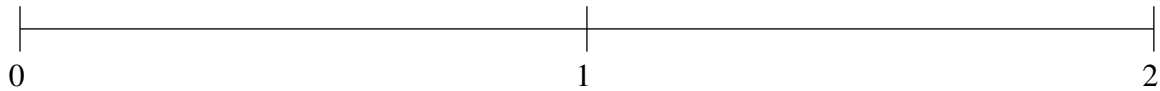
$$\frac{9}{59}, \frac{15}{28}, \frac{9}{11}, 1\frac{23}{38}, 1\frac{12}{13}$$



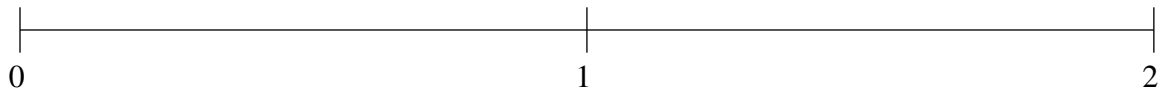
Ordenar Fracciones (E)

Ordene cada conjunto de fracciones usando la recta numérica.

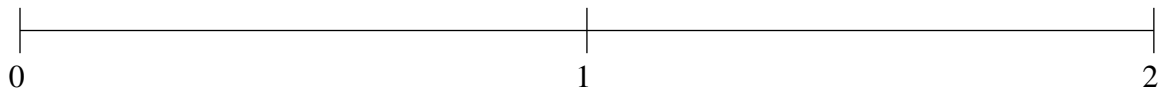
$$\frac{5}{7}, \frac{1}{9}, 1\frac{1}{2}, \frac{1}{2}, 1\frac{1}{21}$$



$$1\frac{5}{7}, 1\frac{9}{19}, \frac{11}{16}, \frac{24}{25}, \frac{1}{8}$$



$$\frac{2}{5}, 1\frac{1}{5}, \frac{3}{4}, \frac{9}{70}, 1\frac{7}{16}$$

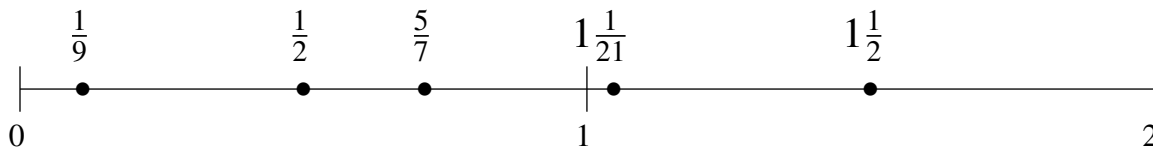


Ordenar Fracciones (E) Respuestas

Ordene cada conjunto de fracciones usando la recta numérica.

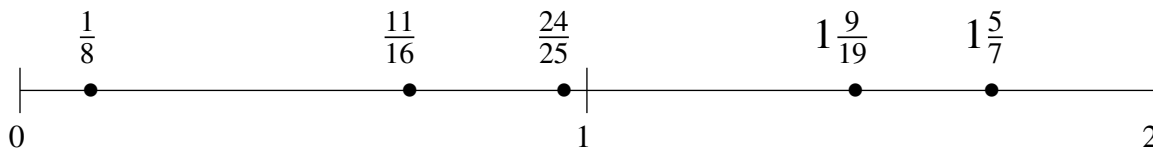
$$\frac{5}{7}, \frac{1}{9}, 1\frac{1}{2}, \frac{1}{2}, 1\frac{1}{21}$$

$$\frac{1}{9}, \frac{1}{2}, \frac{5}{7}, 1\frac{1}{21}, 1\frac{1}{2}$$



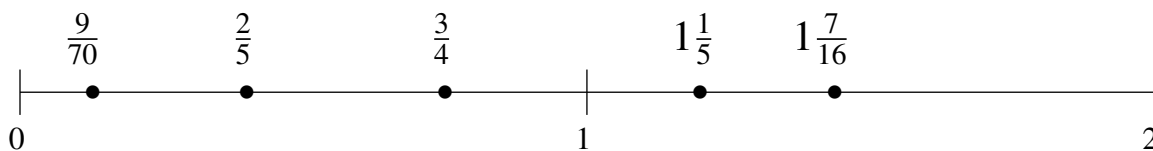
$$1\frac{5}{7}, 1\frac{9}{19}, \frac{11}{16}, \frac{24}{25}, \frac{1}{8}$$

$$\frac{1}{8}, \frac{11}{16}, \frac{24}{25}, 1\frac{9}{19}, 1\frac{5}{7}$$



$$\frac{2}{5}, 1\frac{1}{5}, \frac{3}{4}, \frac{9}{70}, 1\frac{7}{16}$$

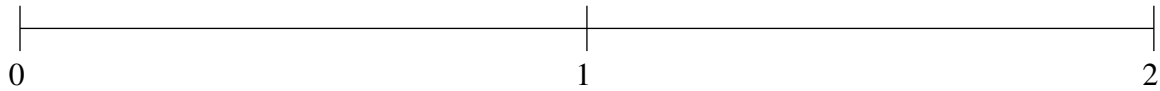
$$\frac{9}{70}, \frac{2}{5}, \frac{3}{4}, 1\frac{1}{5}, 1\frac{7}{16}$$



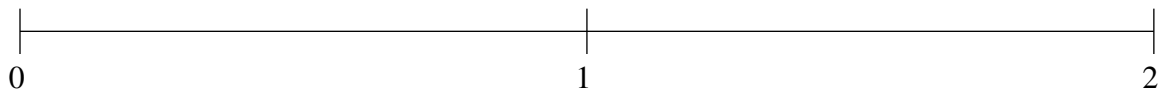
Ordenar Fracciones (F)

Ordene cada conjunto de fracciones usando la recta numérica.

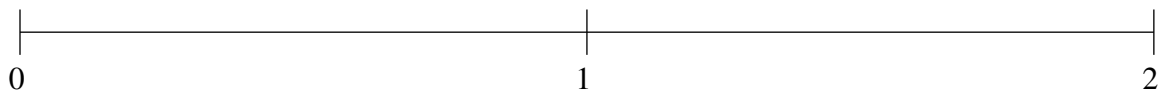
$$1\frac{17}{18}, \frac{23}{40}, 1\frac{2}{5}, 1\frac{2}{3}, \frac{5}{18}$$



$$\frac{59}{65}, \frac{7}{10}, \frac{3}{20}, 1\frac{2}{3}, 1\frac{1}{3}$$



$$\frac{10}{13}, \frac{8}{21}, 1\frac{10}{13}, 1\frac{1}{5}, 1\frac{23}{50}$$

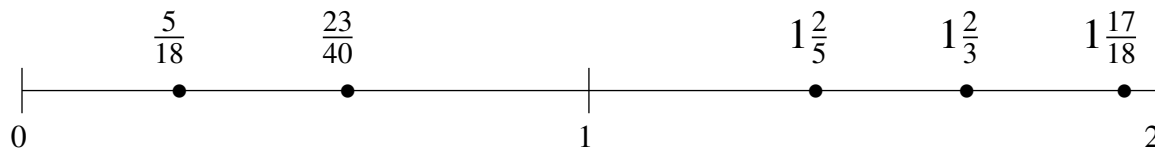


Ordenar Fracciones (F) Respuestas

Ordene cada conjunto de fracciones usando la recta numérica.

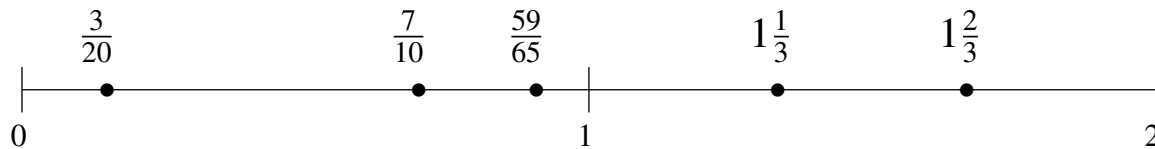
$$1\frac{17}{18}, \frac{23}{40}, 1\frac{2}{5}, 1\frac{2}{3}, \frac{5}{18}$$

$$\frac{5}{18}, \frac{23}{40}, 1\frac{2}{5}, 1\frac{2}{3}, 1\frac{17}{18}$$



$$\frac{59}{65}, \frac{7}{10}, \frac{3}{20}, 1\frac{2}{3}, 1\frac{1}{3}$$

$$\frac{3}{20}, \frac{7}{10}, \frac{59}{65}, 1\frac{1}{3}, 1\frac{2}{3}$$



$$\frac{10}{13}, \frac{8}{21}, 1\frac{10}{13}, 1\frac{1}{5}, 1\frac{23}{50}$$

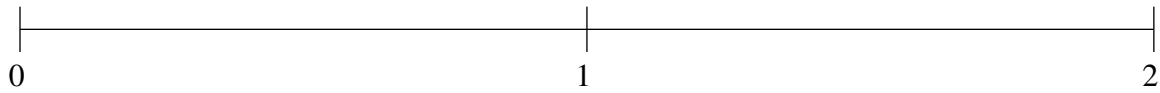
$$\frac{8}{21}, \frac{10}{13}, 1\frac{1}{5}, 1\frac{23}{50}, 1\frac{10}{13}$$



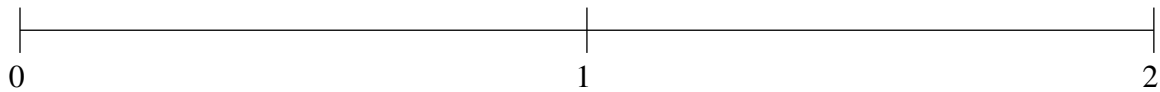
Ordenar Fracciones (G)

Ordene cada conjunto de fracciones usando la recta numérica.

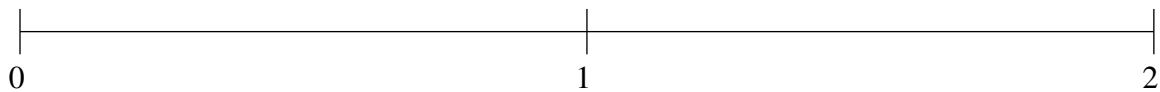
$$\frac{13}{14}, 1\frac{43}{46}, \frac{17}{66}, \frac{13}{23}, 1\frac{11}{16}$$



$$\frac{3}{7}, 1\frac{1}{2}, 1\frac{20}{21}, \frac{4}{19}, 1\frac{3}{4}$$



$$1\frac{4}{5}, \frac{2}{3}, 1\frac{3}{13}, 1\frac{1}{2}, \frac{29}{32}$$

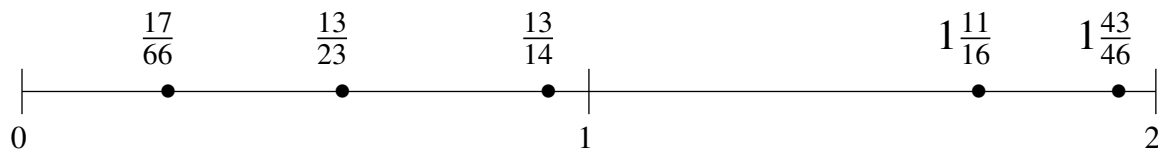


Ordenar Fracciones (G) Respuestas

Ordene cada conjunto de fracciones usando la recta numérica.

$$\frac{13}{14}, 1\frac{43}{46}, \frac{17}{66}, \frac{13}{23}, 1\frac{11}{16}$$

$$\frac{17}{66}, \frac{13}{23}, \frac{13}{14}, 1\frac{11}{16}, 1\frac{43}{46}$$



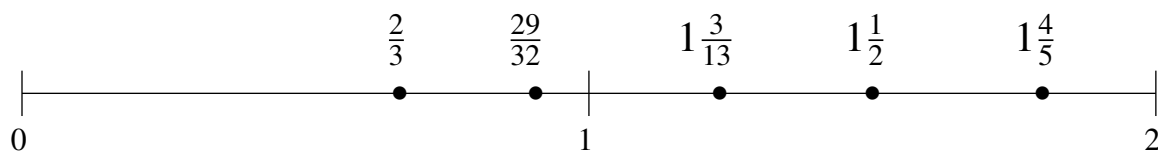
$$\frac{3}{7}, 1\frac{1}{2}, 1\frac{20}{21}, \frac{4}{19}, 1\frac{3}{4}$$

$$\frac{4}{19}, \frac{3}{7}, 1\frac{1}{2}, 1\frac{3}{4}, 1\frac{20}{21}$$



$$1\frac{4}{5}, \frac{2}{3}, 1\frac{3}{13}, 1\frac{1}{2}, \frac{29}{32}$$

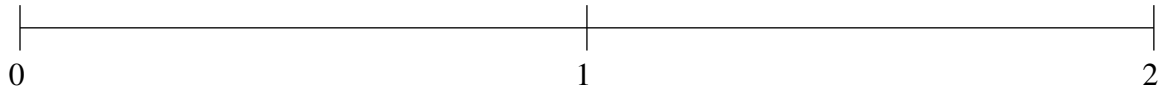
$$\frac{2}{3}, \frac{29}{32}, 1\frac{3}{13}, 1\frac{1}{2}, 1\frac{4}{5}$$



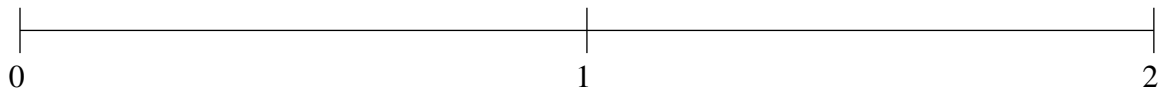
Ordenar Fracciones (H)

Ordene cada conjunto de fracciones usando la recta numérica.

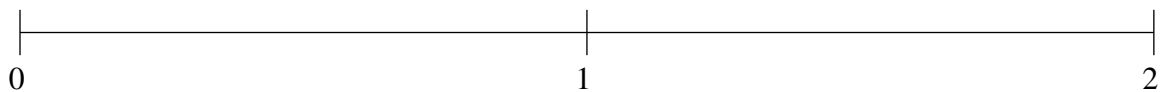
$$\frac{28}{39}, 1\frac{18}{19}, 1\frac{2}{3}, 1\frac{2}{9}, \frac{1}{2}$$



$$\frac{2}{11}, 1\frac{41}{100}, \frac{1}{2}, \frac{5}{6}, 1\frac{13}{21}$$



$$1\frac{51}{55}, 1\frac{3}{5}, \frac{21}{44}, 1\frac{7}{29}, \frac{79}{88}$$

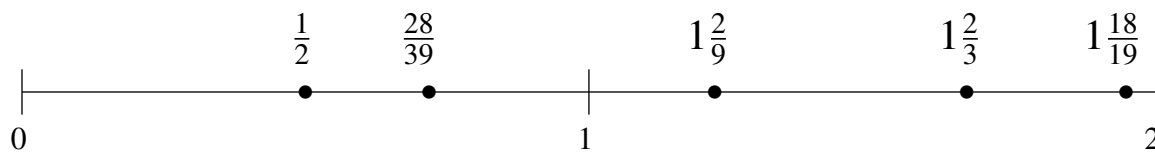


Ordenar Fracciones (H) Respuestas

Ordene cada conjunto de fracciones usando la recta numérica.

$$\frac{28}{39}, 1\frac{18}{19}, 1\frac{2}{3}, 1\frac{2}{9}, \frac{1}{2}$$

$$\frac{1}{2}, \frac{28}{39}, 1\frac{2}{9}, 1\frac{2}{3}, 1\frac{18}{19}$$



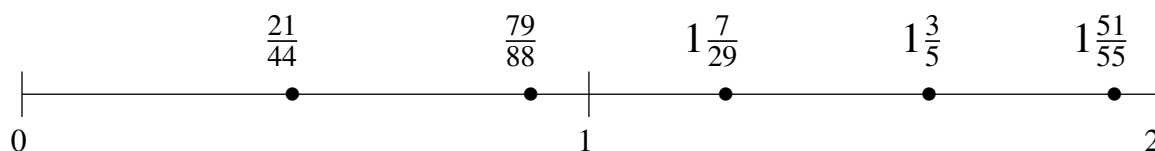
$$\frac{2}{11}, 1\frac{41}{100}, \frac{1}{2}, \frac{5}{6}, 1\frac{13}{21}$$

$$\frac{2}{11}, \frac{1}{2}, \frac{5}{6}, 1\frac{41}{100}, 1\frac{13}{21}$$



$$1\frac{51}{55}, 1\frac{3}{5}, \frac{21}{44}, 1\frac{7}{29}, \frac{79}{88}$$

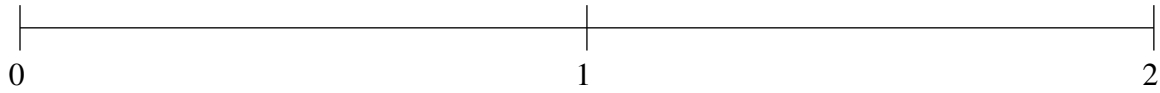
$$\frac{21}{44}, \frac{79}{88}, 1\frac{7}{29}, 1\frac{3}{5}, 1\frac{51}{55}$$



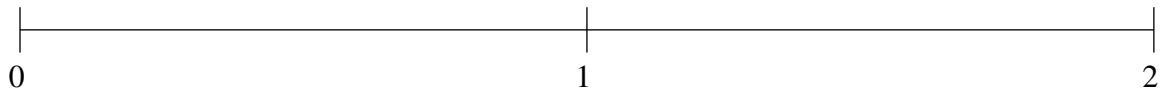
Ordenar Fracciones (I)

Ordene cada conjunto de fracciones usando la recta numérica.

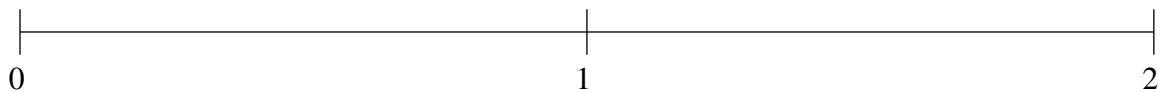
$$1\frac{2}{17}, 1\frac{8}{13}, \frac{1}{2}, \frac{1}{19}, \frac{4}{5}$$



$$\frac{9}{20}, 1\frac{1}{3}, \frac{1}{10}, \frac{39}{53}, 1\frac{3}{4}$$



$$\frac{5}{6}, 1\frac{7}{8}, 1\frac{1}{4}, \frac{26}{45}, \frac{9}{40}$$

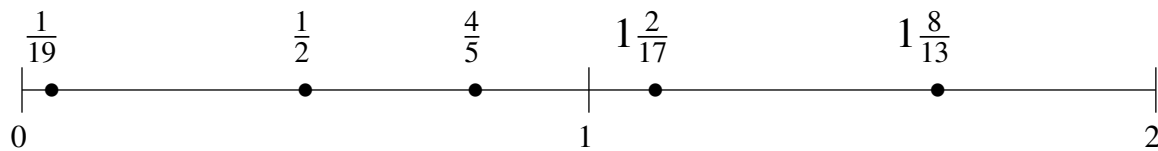


Ordenar Fracciones (I) Respuestas

Ordene cada conjunto de fracciones usando la recta numérica.

$$1\frac{2}{17}, 1\frac{8}{13}, \frac{1}{2}, \frac{1}{19}, \frac{4}{5}$$

$$\frac{1}{19}, \frac{1}{2}, \frac{4}{5}, 1\frac{2}{17}, 1\frac{8}{13}$$



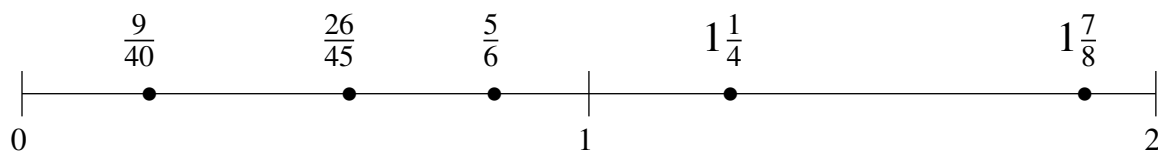
$$\frac{9}{20}, 1\frac{1}{3}, \frac{1}{10}, \frac{39}{53}, 1\frac{3}{4}$$

$$\frac{1}{10}, \frac{9}{20}, \frac{39}{53}, 1\frac{1}{3}, 1\frac{3}{4}$$



$$\frac{5}{6}, 1\frac{7}{8}, 1\frac{1}{4}, \frac{26}{45}, \frac{9}{40}$$

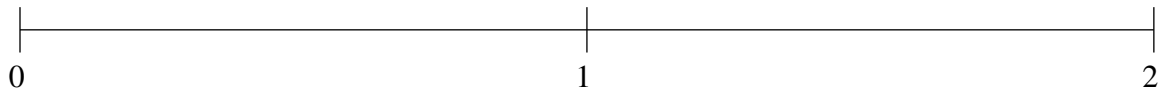
$$\frac{9}{40}, \frac{26}{45}, \frac{5}{6}, 1\frac{1}{4}, 1\frac{7}{8}$$



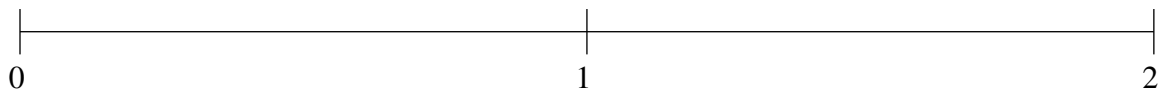
Ordenar Fracciones (J)

Ordene cada conjunto de fracciones usando la recta numérica.

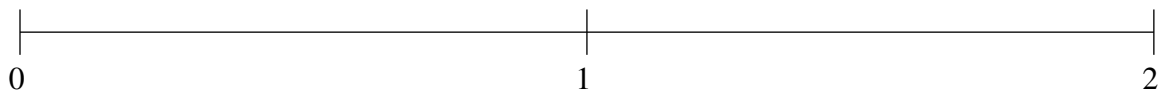
$$1\frac{1}{5}, \frac{1}{4}, 1\frac{9}{11}, \frac{3}{5}, 1\frac{10}{19}$$



$$1\frac{2}{7}, 1\frac{1}{2}, \frac{11}{38}, \frac{2}{23}, \frac{3}{4}$$



$$\frac{1}{5}, 1\frac{1}{2}, \frac{3}{5}, 1\frac{7}{9}, \frac{5}{6}$$

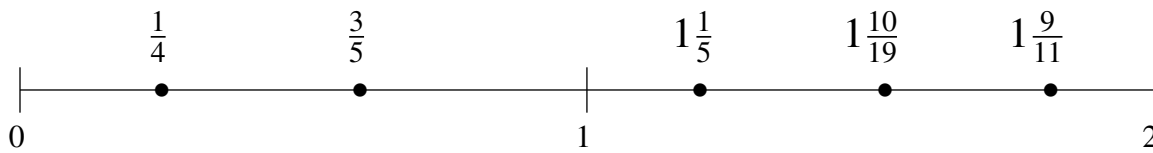


Ordenar Fracciones (J) Respuestas

Ordene cada conjunto de fracciones usando la recta numérica.

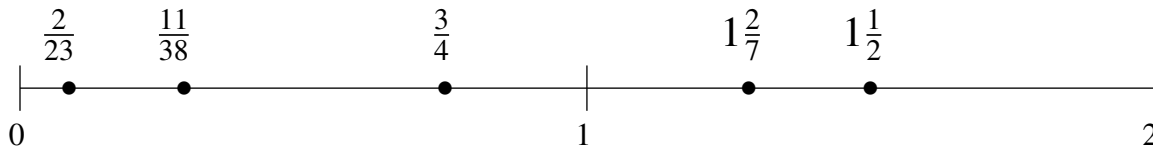
$$1\frac{1}{5}, \frac{1}{4}, 1\frac{9}{11}, \frac{3}{5}, 1\frac{10}{19}$$

$$\frac{1}{4}, \frac{3}{5}, 1\frac{1}{5}, 1\frac{10}{19}, 1\frac{9}{11}$$



$$1\frac{2}{7}, 1\frac{1}{2}, \frac{11}{38}, \frac{2}{23}, \frac{3}{4}$$

$$\frac{2}{23}, \frac{11}{38}, \frac{3}{4}, 1\frac{2}{7}, 1\frac{1}{2}$$



$$\frac{1}{5}, 1\frac{1}{2}, \frac{3}{5}, 1\frac{7}{9}, \frac{5}{6}$$

$$\frac{1}{5}, \frac{3}{5}, \frac{5}{6}, 1\frac{1}{2}, 1\frac{7}{9}$$

