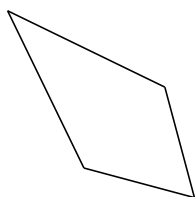


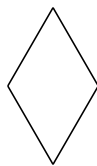
Clasificar Cuadriláteros (B)


Identifique cada cuadrilátero.

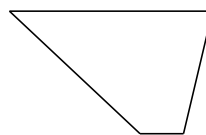





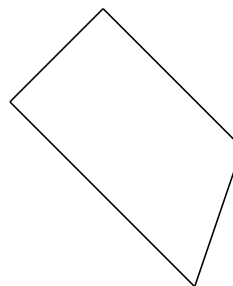


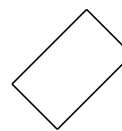












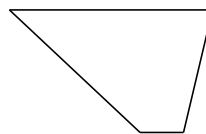


Clasificar Cuadriláteros (B) Respuesta

Identifique cada cuadrilátero.



trapezio isósceles



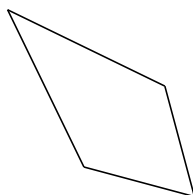
trapezio



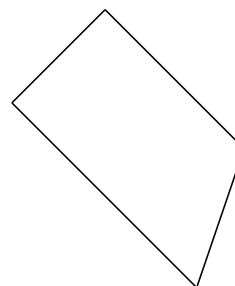
deltoide



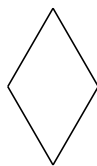
cuadrado



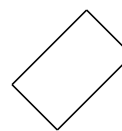
deltoide




trapezio rectángulo



rombo



rectángulo



cuadrilátero irregular



cuadrilátero cóncavo