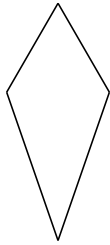
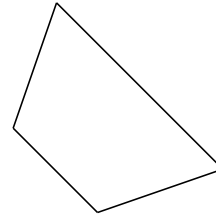


# Clasificar Cuadriláteros (F)

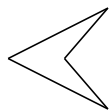
Identifique cada cuadrilátero.



\_\_\_\_\_




\_\_\_\_\_



\_\_\_\_\_



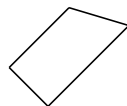
\_\_\_\_\_



\_\_\_\_\_



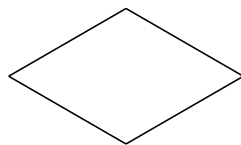
\_\_\_\_\_



\_\_\_\_\_



\_\_\_\_\_



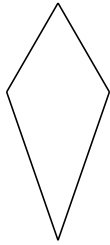
\_\_\_\_\_



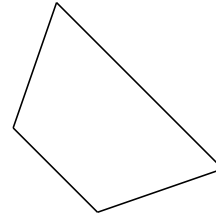
\_\_\_\_\_

# Clasificar Cuadriláteros (F) Respuesta

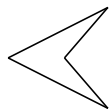
Identifique cada cuadrilátero.




deltoide




trapezio isósceles




cuadrilátero cóncavo



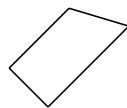
paralelogramo



paralelogramo



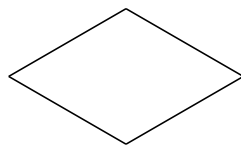
rectángulo



trapezio rectángulo



cuadrado



rombo



cuadrilátero irregular