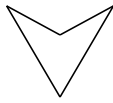
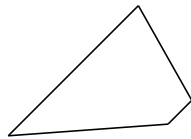


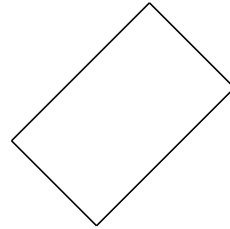
Clasificar Cuadriláteros (J)

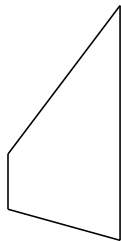
Identifique cada cuadrilátero.

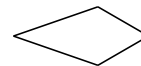


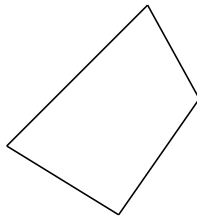


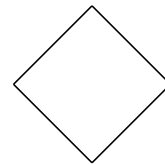


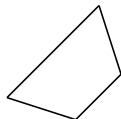














Clasificar Cuadriláteros (J) Respuesta

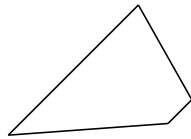
Identifique cada cuadrilátero.



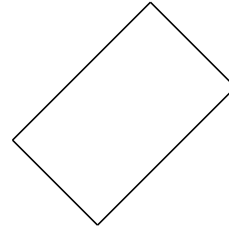
cuadrilátero cóncavo



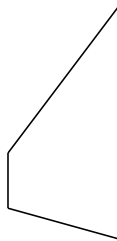
rombo



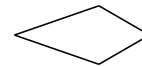
trapecio



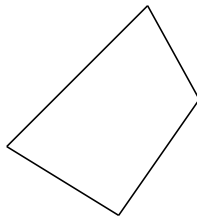
rectángulo



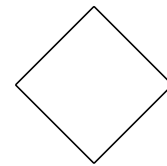
trapecio



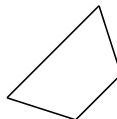
deltoido



cuadrilátero irregular



cuadrado



trapecio isósceles



trapecio rectángulo