


# Clasificar Cuadriláteros (F)

Identifique cada cuadrilátero.



\_\_\_\_\_



\_\_\_\_\_




\_\_\_\_\_



\_\_\_\_\_



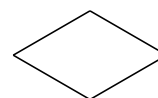
\_\_\_\_\_



\_\_\_\_\_




\_\_\_\_\_



\_\_\_\_\_



\_\_\_\_\_




\_\_\_\_\_

# Clasificar Cuadriláteros (F) Respuesta

Identifique cada cuadrilátero.



cuadrado




cuadrado




paralelogramo



paralelogramo



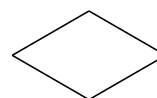
cuadrado




rectángulo




rombo



rombo



paralelogramo



cuadrado