



Clasificar Cuadriláteros (H)

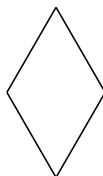
Identifique cada cuadrilátero.

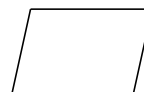







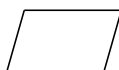
















Clasificar Cuadriláteros (H) Respuesta

Identifique cada cuadrilátero.




paralelogramo



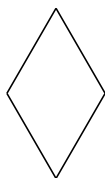
cuadrado



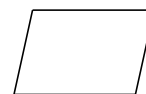
paralelogramo



cuadrado



rombo



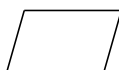
paralelogramo




cuadrado



rectángulo



paralelogramo



rectángulo