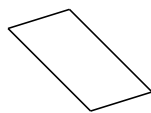
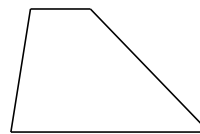
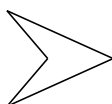


Clasificar Cuadriláteros (A)

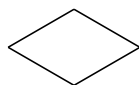
Identifique cada cuadrilátero.

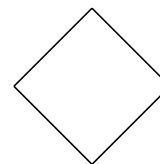


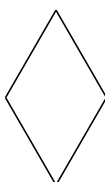




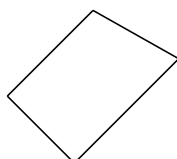


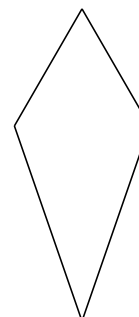






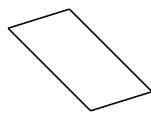




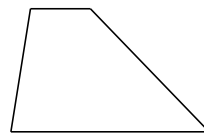


Clasificar Cuadriláteros (A) Respuesta

Identifique cada cuadrilátero.



paralelogramo



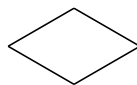
trapezio



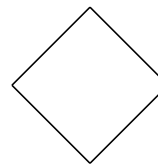
cuadrilátero cóncavo



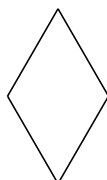
rectángulo



rombo



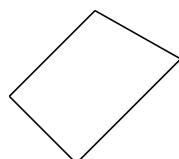
cuadrado



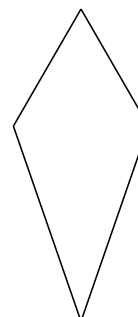
rombo



trapezio isósceles




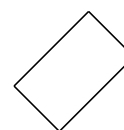
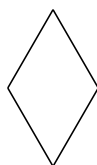
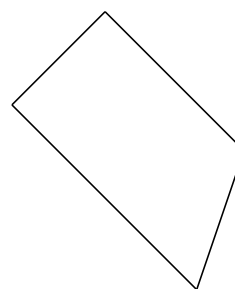
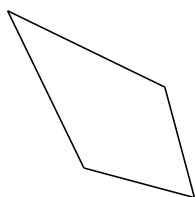
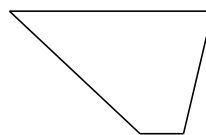
trapezio rectángulo



deltoide

Clasificar Cuadriláteros (B)

Identifique cada cuadrilátero.

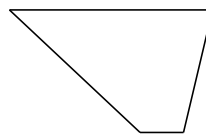


Clasificar Cuadriláteros (B) Respuesta

Identifique cada cuadrilátero.



trapezio isósceles



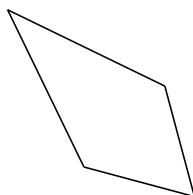
trapezio



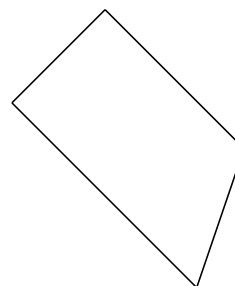
deltoide



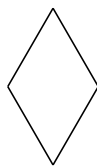
cuadrado



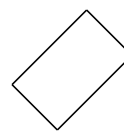
deltoide




trapezio rectángulo



rombo



rectángulo



cuadrilátero irregular



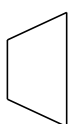
cuadrilátero cóncavo

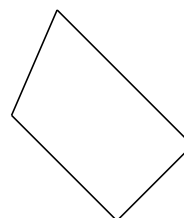
Clasificar Cuadriláteros (C)

Identifique cada cuadrilátero.

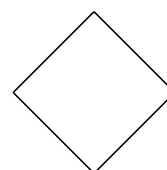


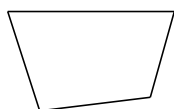


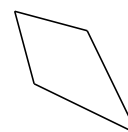


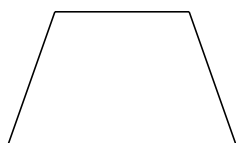














Clasificar Cuadriláteros (C) Respuesta

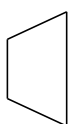
Identifique cada cuadrilátero.



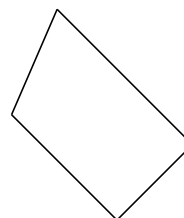
rectángulo



trapezio



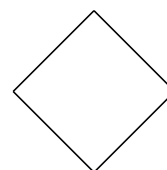
trapezio isósceles



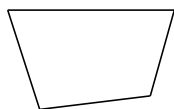
trapezio rectángulo



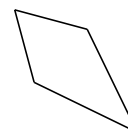
rombo



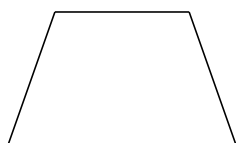
cuadrado



cuadrilátero irregular



deltoide



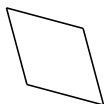
trapezio isósceles

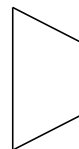


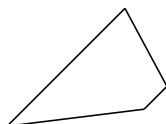
cuadrilátero cóncavo

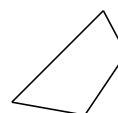
Clasificar Cuadriláteros (D)


Identifique cada cuadrilátero.

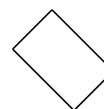


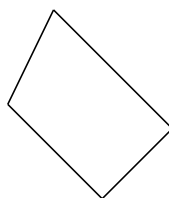


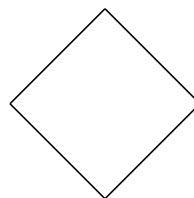










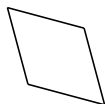






Clasificar Cuadriláteros (D) Respuesta

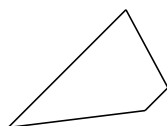
Identifique cada cuadrilátero.



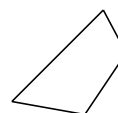
rombo



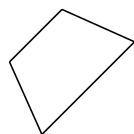
trapecio isósceles



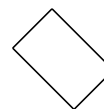
trapecio



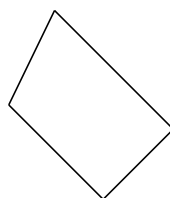
cuadrilátero irregular



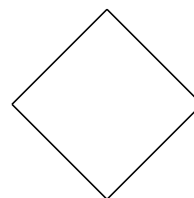
trapecio isósceles



rectángulo



trapecio rectángulo



cuadrado



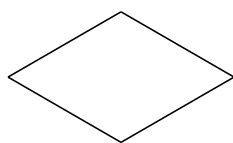
cuadrilátero cóncavo

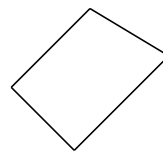


paralelogramo

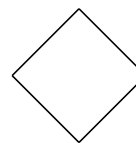
Clasificar Cuadriláteros (E)


Identifique cada cuadrilátero.

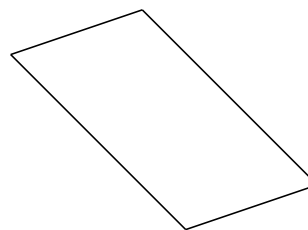





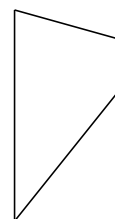


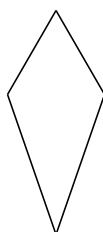








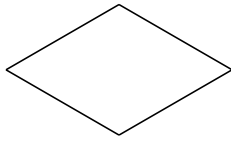




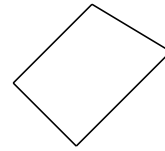


Clasificar Cuadriláteros (E) Respuesta

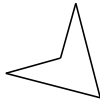
Identifique cada cuadrilátero.



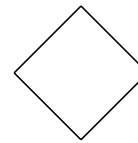
rombo



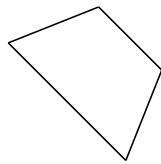
trapecio rectángulo



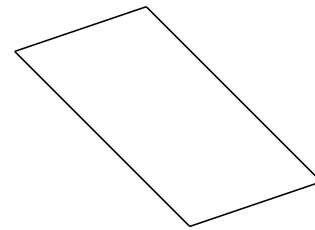
cuadrilátero cóncavo



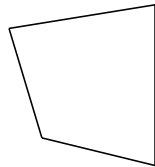
cuadrado



trapecio isósceles



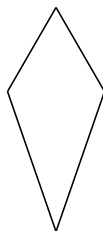
paralelogramo



cuadrilátero irregular



trapecio



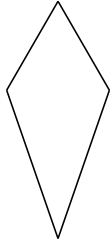
deltoide

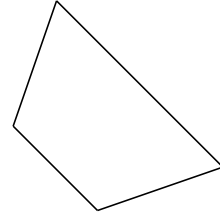


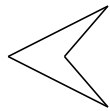
trapecio isósceles

Clasificar Cuadriláteros (F)


Identifique cada cuadrilátero.



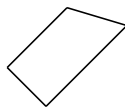




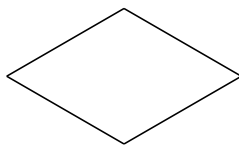








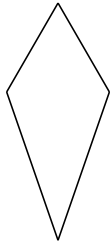




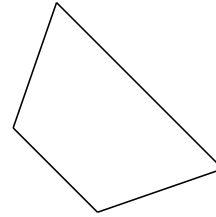


Clasificar Cuadriláteros (F) Respuesta

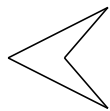
Identifique cada cuadrilátero.




deltoide




trapezio isósceles




cuadrilátero cóncavo



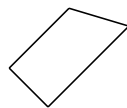
paralelogramo



paralelogramo



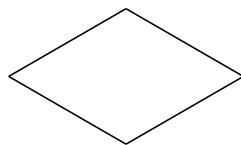
rectángulo



trapezio rectángulo



cuadrado



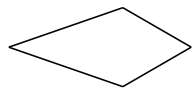
rombo



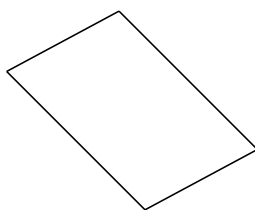
cuadrilátero irregular

Clasificar Cuadriláteros (G)

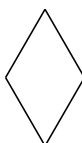
Identifique cada cuadrilátero.

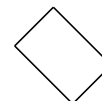


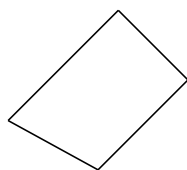




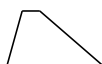


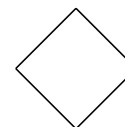






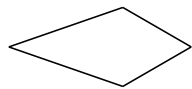







Clasificar Cuadriláteros (G) Respuesta

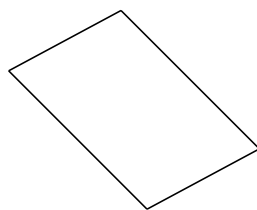
Identifique cada cuadrilátero.



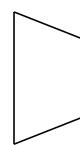
deltoide



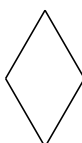
cuadrado



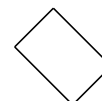
paralelogramo



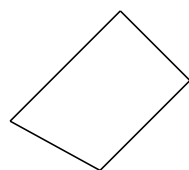
trapecio isósceles



rombo



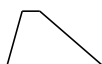
rectángulo



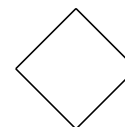
trapecio rectángulo



cuadrilátero cóncavo



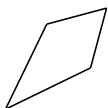
trapecio

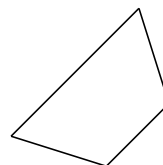


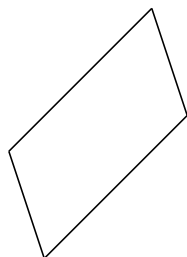
cuadrado

Clasificar Cuadriláteros (H)

Identifique cada cuadrilátero.

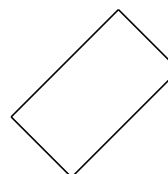


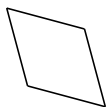


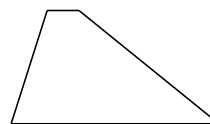










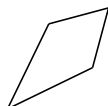




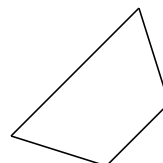


Clasificar Cuadriláteros (H) Respuesta

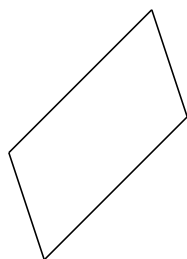
Identifique cada cuadrilátero.



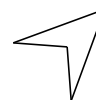
deltoide



trapezio isósceles



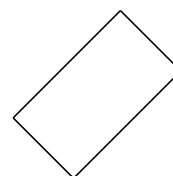
paralelogramo



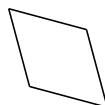
cuadrilátero cóncavo



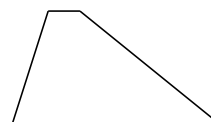
trapezio isósceles



rectángulo



rombo



trapezio



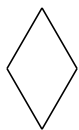
cuadrado

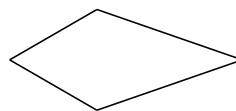


trapezio rectángulo

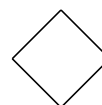
Clasificar Cuadriláteros (I)


Identifique cada cuadrilátero.





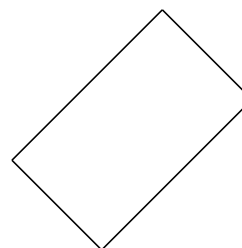


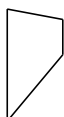








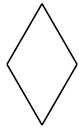




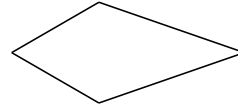


Clasificar Cuadriláteros (I) Respuesta

Identifique cada cuadrilátero.



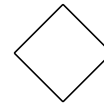
rombo



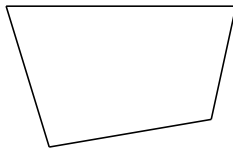
deltoido



cuadrilátero cóncavo



cuadrado



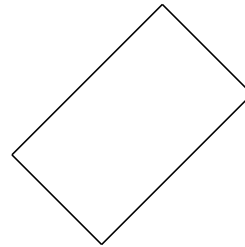
cuadrilátero irregular



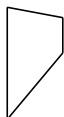
cuadrilátero cóncavo



trapezio rectángulo



rectángulo



trapezio



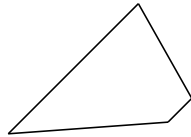
trapezio isósceles

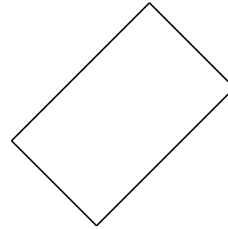
Clasificar Cuadriláteros (J)

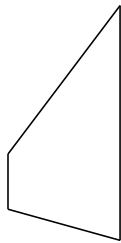
Identifique cada cuadrilátero.

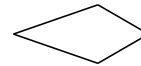


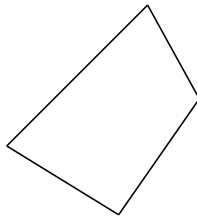


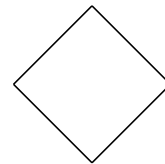


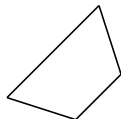








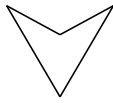






Clasificar Cuadriláteros (J) Respuesta

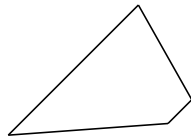
Identifique cada cuadrilátero.



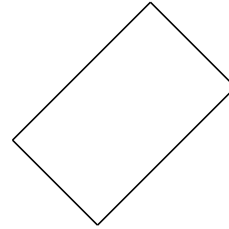
cuadrilátero cóncavo



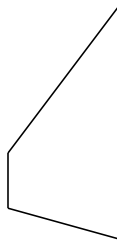
rombo



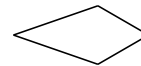
trapecio



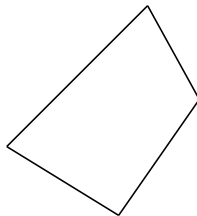
rectángulo



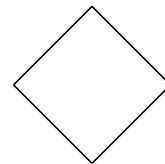
trapecio



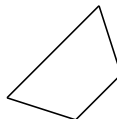
deltoido



cuadrilátero irregular



cuadrado



trapecio isósceles



trapecio rectángulo