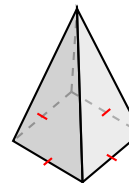
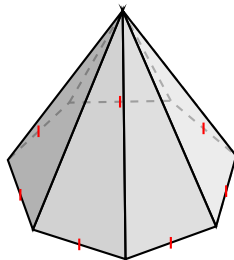
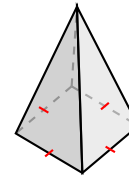
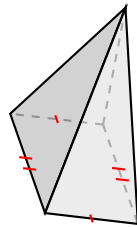
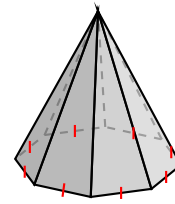
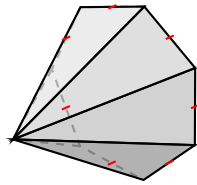
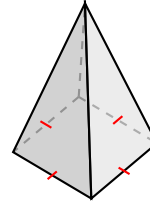
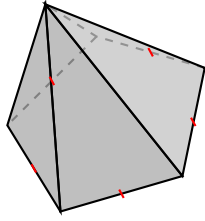


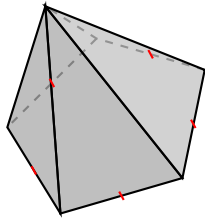
# Clasificar Figuras (A)

Identifique cada figura.

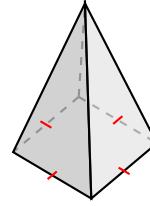


# Clasificar Figuras (A) Respuestas

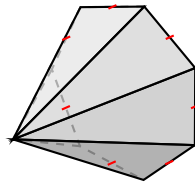
Identifique cada figura.



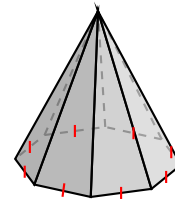
pentagonal pyramid



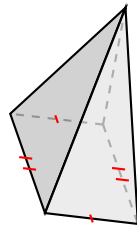
pirámide cuadrada



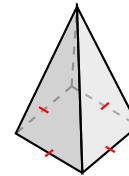
pirámide heptagonal



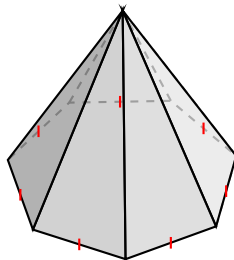
pirámide octagonal



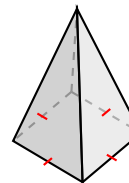
pirámide rectangular



pirámide cuadrada



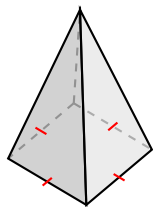
pirámide heptagonal



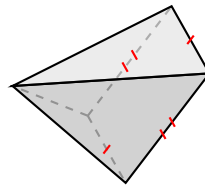
pirámide cuadrada

# Clasificar Figuras (B)

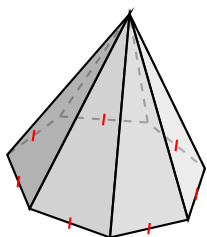
Identifique cada figura.



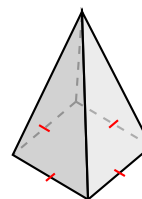
---



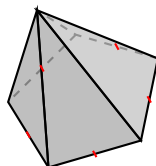
---



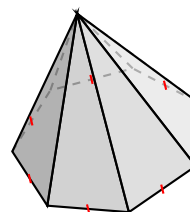
---



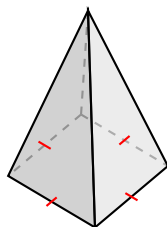
---



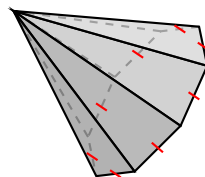
---



---



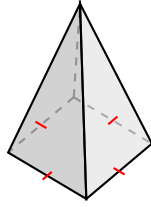
---



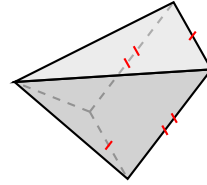
---

# Clasificar Figuras (B) Respuestas

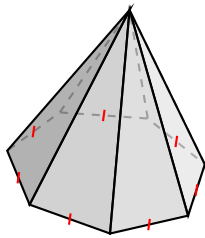
Identifique cada figura.



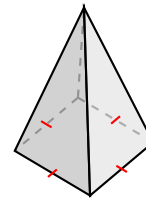
pirámide cuadrada



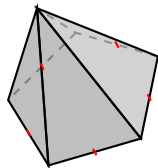
pirámide rectangular



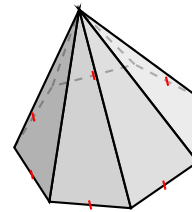
pirámide heptagonal



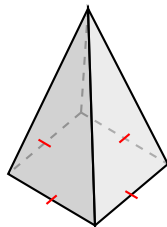
pirámide cuadrada



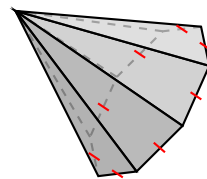
pentagonal pyramid



pirámide heptagonal



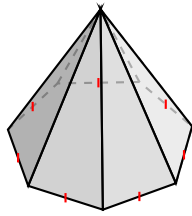
pirámide cuadrada



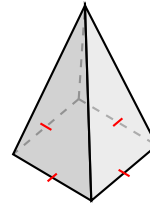
pirámide octagonal

# Clasificar Figuras (C)

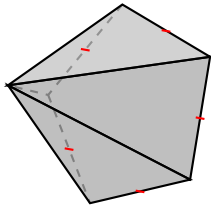
Identifique cada figura.



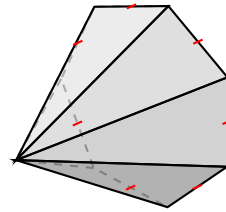
---



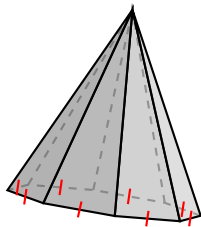
---



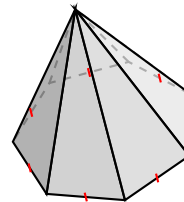
---



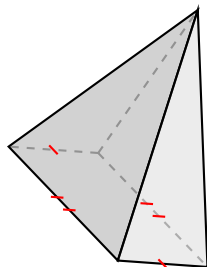
---



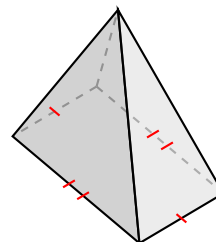
---



---



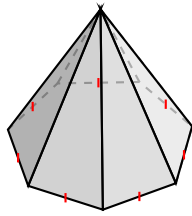
---



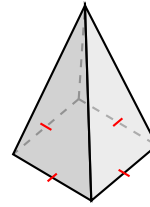
---

# Clasificar Figuras (C) Respuestas

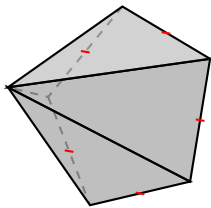
Identifique cada figura.



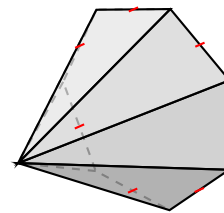
pirámide heptagonal



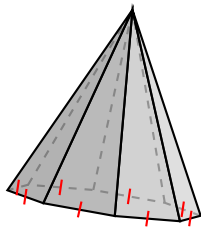
pirámide cuadrada



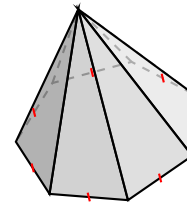
pentagonal pyramid



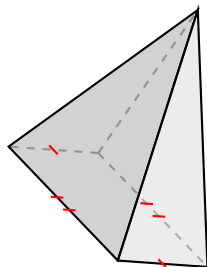
pirámide heptagonal



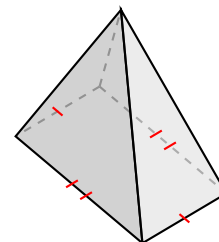
pirámide octagonal



pirámide heptagonal



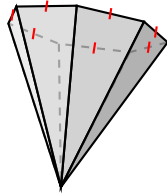
pirámide rectangular



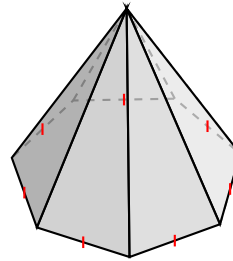
pirámide rectangular

# Clasificar Figuras (D)

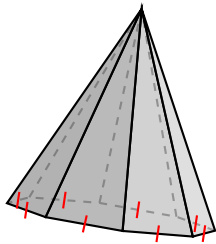
Identifique cada figura.



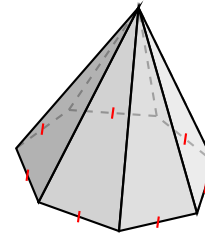
---



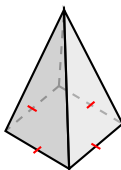
---



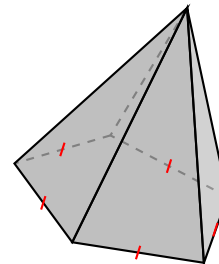
---



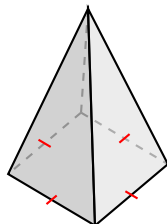
---



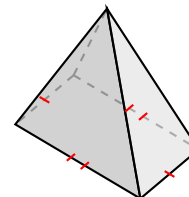
---



---



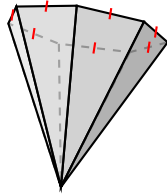
---



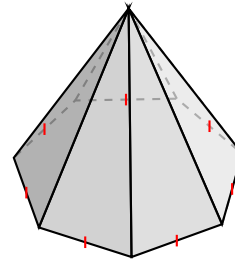
---

# Clasificar Figuras (D) Respuestas

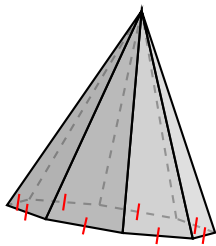
Identifique cada figura.



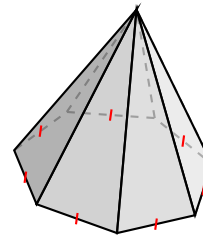
pirámide heptagonal



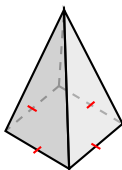
pirámide heptagonal



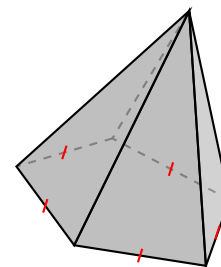
pirámide octagonal



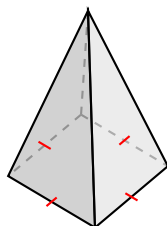
pirámide heptagonal



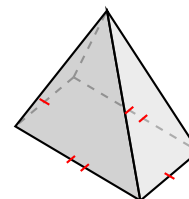
pirámide cuadrada



pentagonal pyramid



pirámide cuadrada

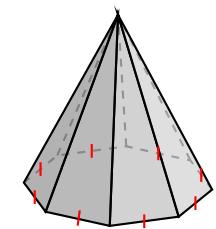
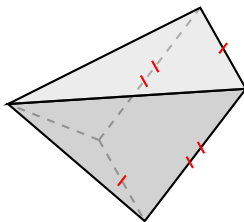
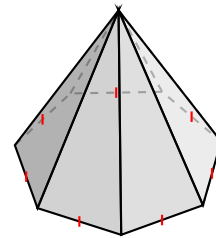
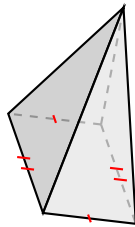
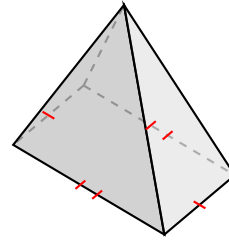
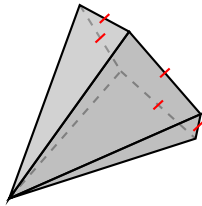
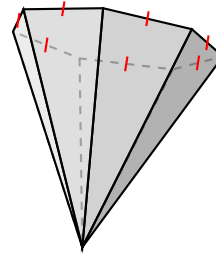
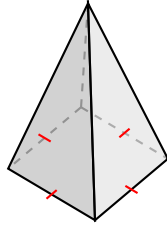


pirámide rectangular



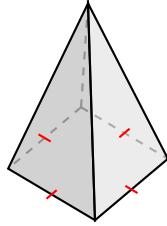
# Clasificar Figuras (E)

Identifique cada figura.

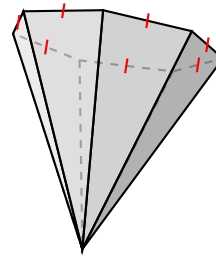


# Clasificar Figuras (E) Respuestas

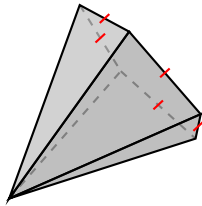
Identifique cada figura.



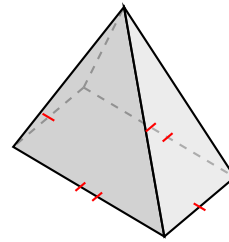
pirámide cuadrada



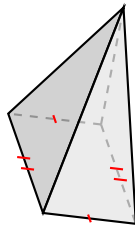
pirámide heptagonal



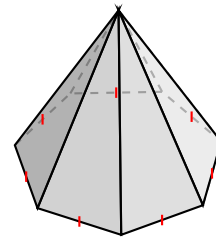
pentagonal pyramid



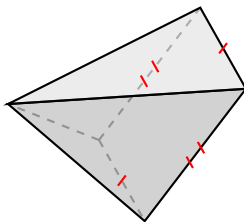
pirámide rectangular



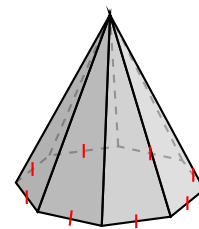
pirámide rectangular



pirámide heptagonal



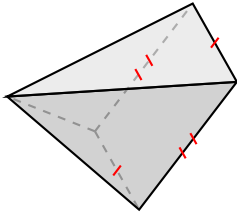
pirámide rectangular



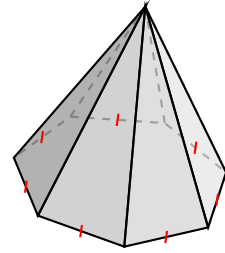
pirámide octagonal

# Clasificar Figuras (F)

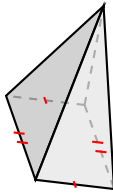
Identifique cada figura.



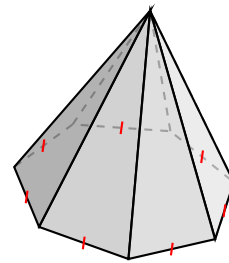
\_\_\_\_\_



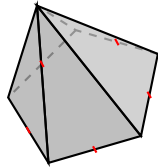
\_\_\_\_\_



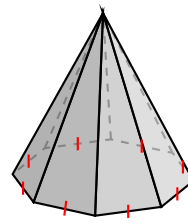
\_\_\_\_\_



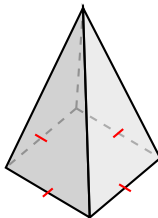
\_\_\_\_\_



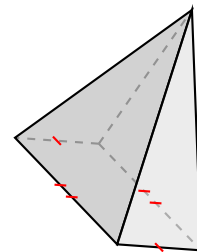
\_\_\_\_\_



\_\_\_\_\_



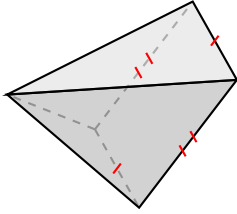
\_\_\_\_\_



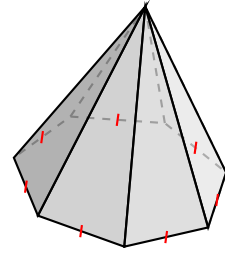
\_\_\_\_\_

# Clasificar Figuras (F) Respuestas

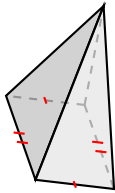
Identifique cada figura.



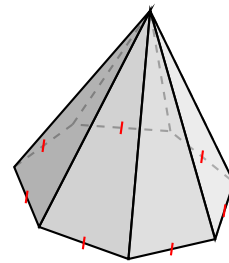
pirámide rectangular



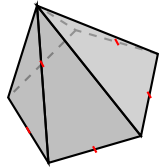
pirámide heptagonal



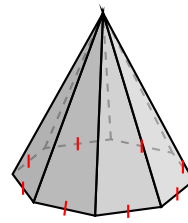
pirámide rectangular



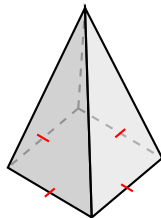
pirámide heptagonal



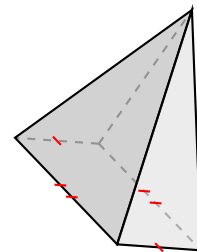
pentagonal pyramid



pirámide octagonal



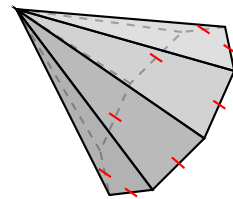
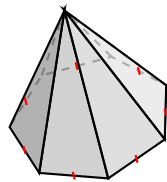
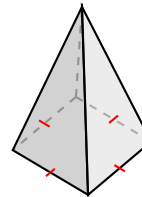
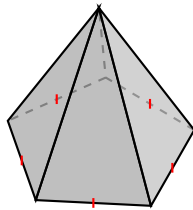
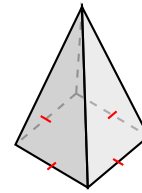
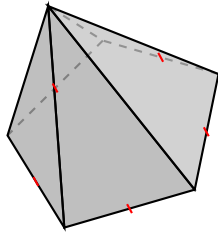
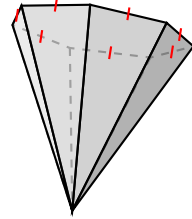
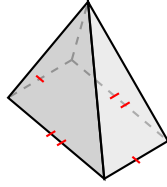
pirámide cuadrada



pirámide rectangular

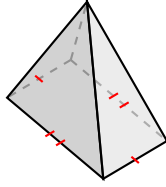
# Clasificar Figuras (G)

Identifique cada figura.

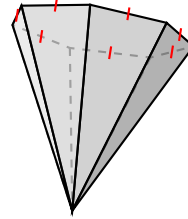


# Clasificar Figuras (G) Respuestas

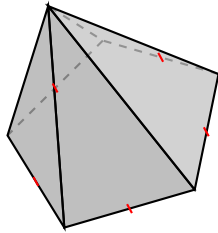
Identifique cada figura.



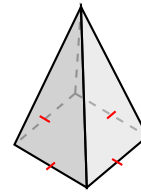
pirámide rectangular



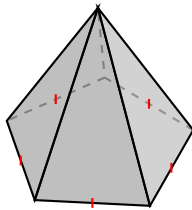
pirámide heptagonal



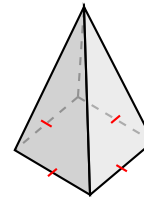
pentagonal pyramid



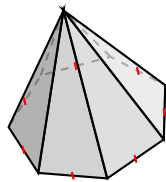
pirámide cuadrada



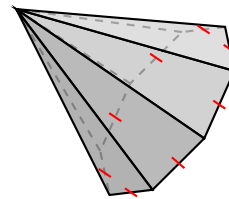
pentagonal pyramid



pirámide cuadrada



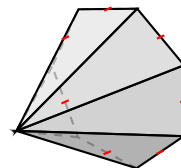
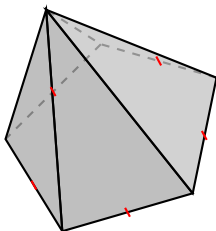
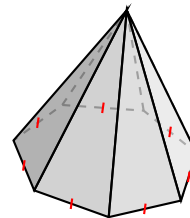
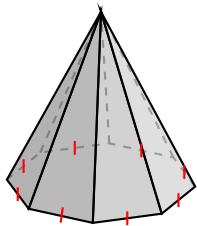
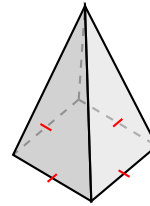
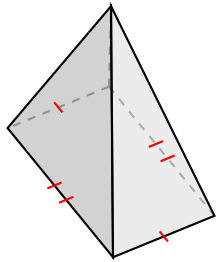
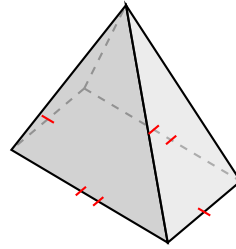
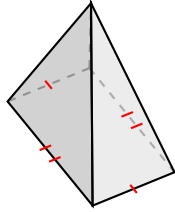
pirámide heptagonal



pirámide octagonal

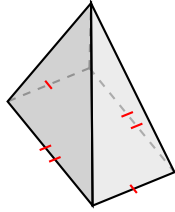
# Clasificar Figuras (H)

Identifique cada figura.

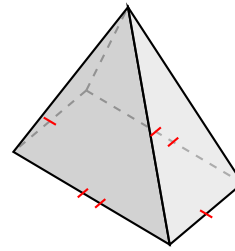


# Clasificar Figuras (H) Respuestas

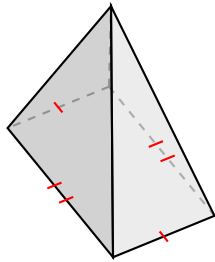
Identifique cada figura.



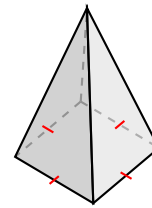
pirámide rectangular



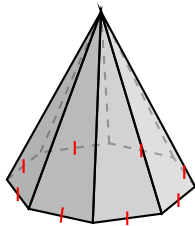
pirámide rectangular



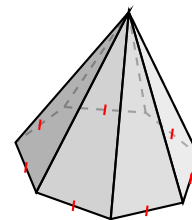
pirámide rectangular



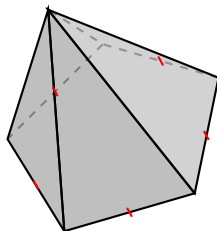
pirámide cuadrada



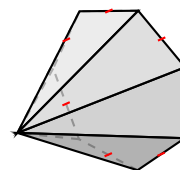
pirámide octagonal



pirámide heptagonal



pentagonal pyramid

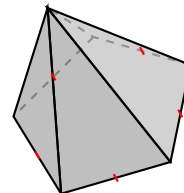
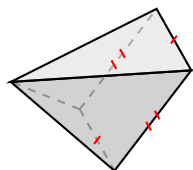
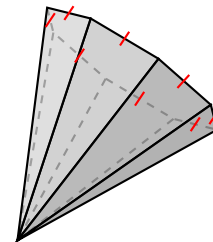
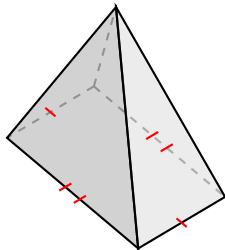
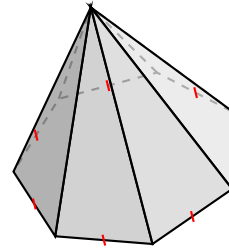
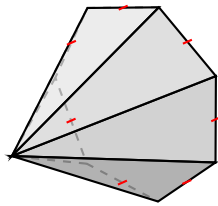
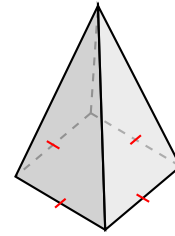
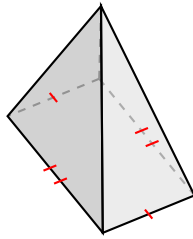


pirámide heptagonal



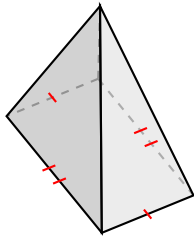
# Clasificar Figuras (I)

Identifique cada figura.

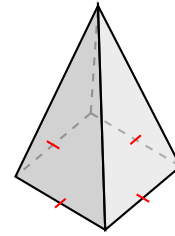


# Clasificar Figuras (I) Respuestas

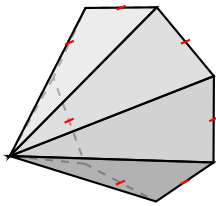
Identifique cada figura.



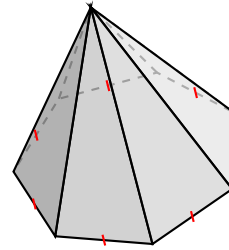
pirámide rectangular



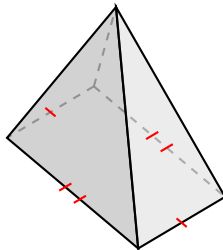
pirámide cuadrada



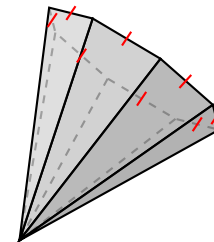
pirámide heptagonal



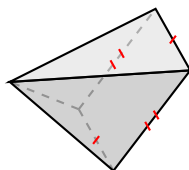
pirámide heptagonal



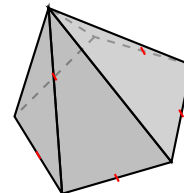
pirámide rectangular



pirámide octagonal



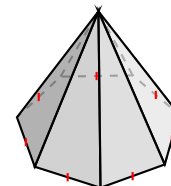
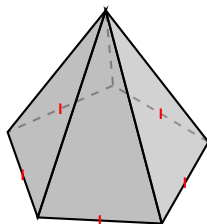
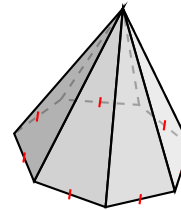
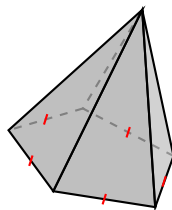
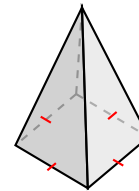
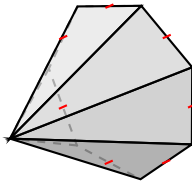
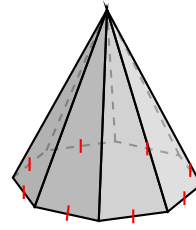
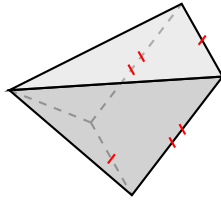
pirámide rectangular



pentagonal pyramid

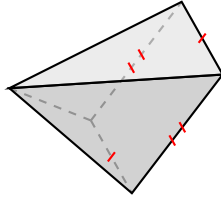
# Clasificar Figuras (J)

Identifique cada figura.

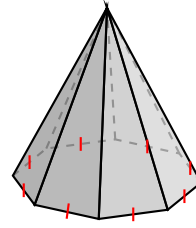


# Clasificar Figuras (J) Respuestas

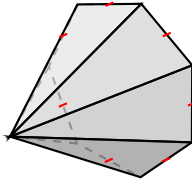
Identifique cada figura.



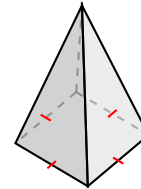
pirámide rectangular



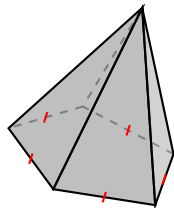
pirámide octagonal



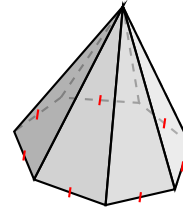
pirámide heptagonal



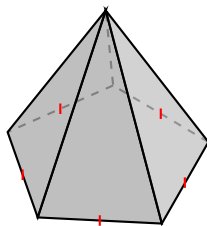
pirámide cuadrada



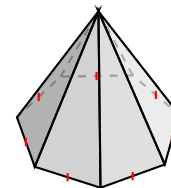
pentagonal pyramid



pirámide heptagonal



pentagonal pyramid



pirámide heptagonal