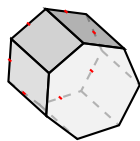
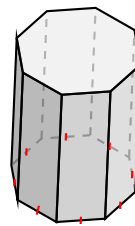
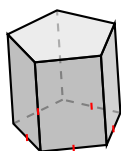


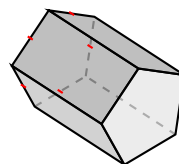
Clasificar Figuras (C)

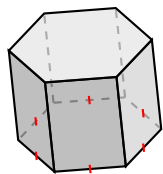
Identifique cada figura.

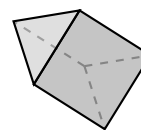


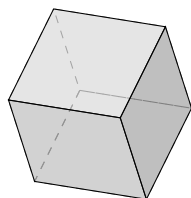


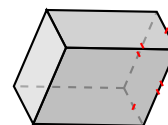






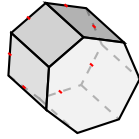




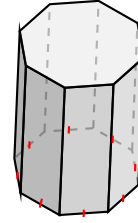


Clasificar Figuras (C) Respuestas

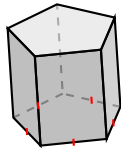
Identifique cada figura.



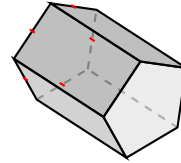
prisma heptagonal



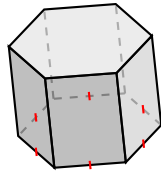
prisma octagonal



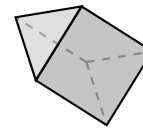
prisma pentagonal



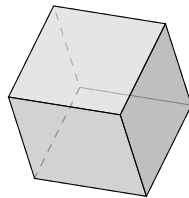
prisma pentagonal



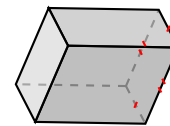
prisma hexagonal



prisma triangular



prisma cuadrado, cubo



prisma rectangular