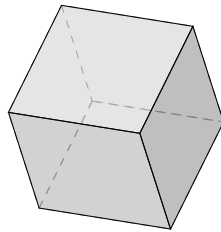
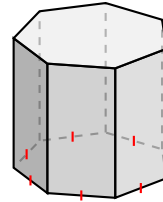


# Clasificar Figuras (E)

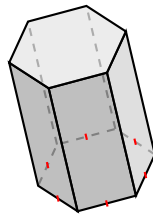
Identifique cada figura.



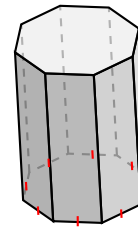
---



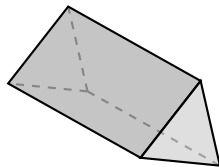
---



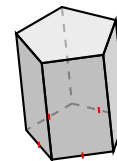
---



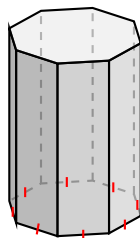
---



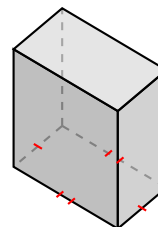
---



---



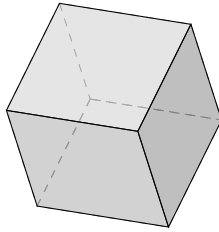
---



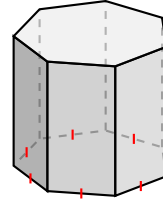
---

# Clasificar Figuras (E) Respuestas

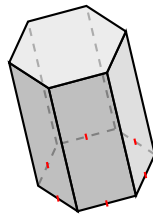
Identifique cada figura.



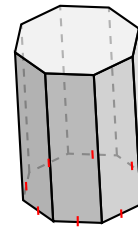
prisma cuadrado, cubo



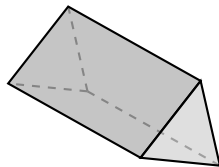
prisma heptagonal



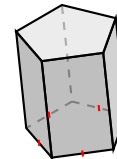
prisma hexagonal



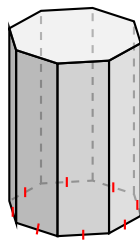
prisma octagonal



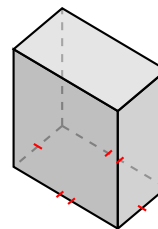
prisma triangular



prisma pentagonal



prisma octagonal



prisma rectangular