






Mediatrices Perpendiculares (D)

Nombre: _____

Fecha: _____

Dibuje la mediatriz perpendicular de cada segmento.



Mediatrices Perpendiculares (D) Respuestas

Nombre: _____

Fecha: _____

Dibuje la mediatriz perpendicular de cada segmento.

