





Mediatrices Perpendiculares (I)

Nombre: _____

Fecha: _____

Dibuje la mediatriz perpendicular de cada segmento.



Mediatrices Perpendiculares (I) Respuestas

Nombre: _____

Fecha: _____

Dibuje la mediatriz perpendicular de cada segmento.

