






Mediatrices Perpendiculares (J)

Nombre: _____

Fecha: _____

Dibuje la mediatriz perpendicular de cada segmento.



Mediatrices Perpendiculares (J) Respuestas

Nombre: _____

Fecha: _____

Dibuje la mediatriz perpendicular de cada segmento.

