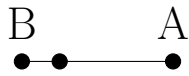


# Rectas Perpendiculares (E)

Construya la recta perpendicular al segmento que pasa por el punto sin marcar.

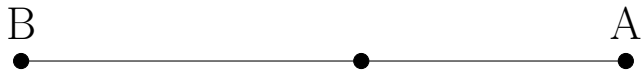
1.



2.



3.



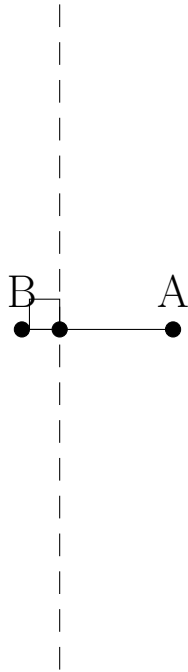
4.



# Rectas Perpendiculares (E) Respuestas

Construya la recta perpendicular al segmento que pasa por el punto sin marcar.

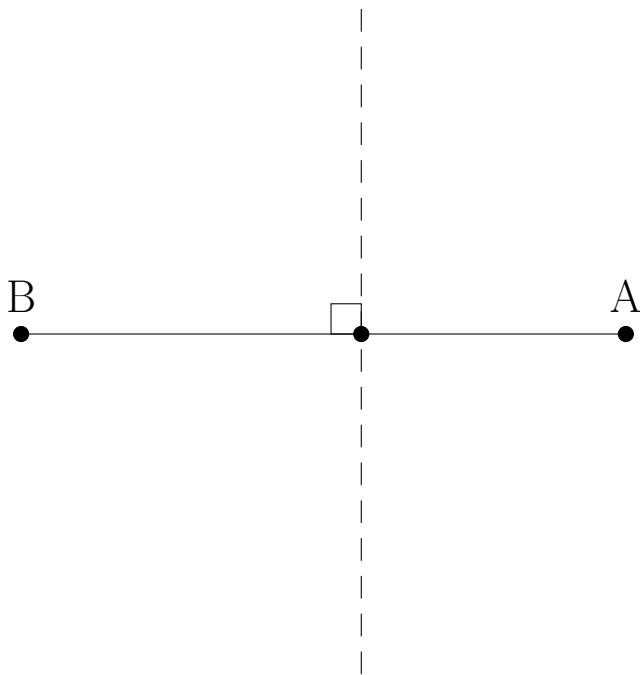
1.



2.



3.



4.

