


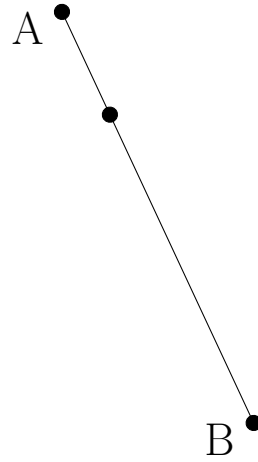
# Rectas Perpendiculares (A)

Construya la recta perpendicular al segmento que pasa por el punto sin marcar.

1.



2.



3.



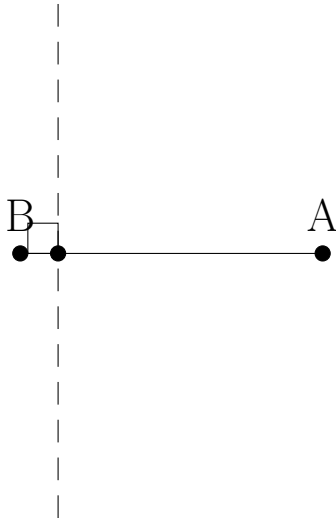
4.



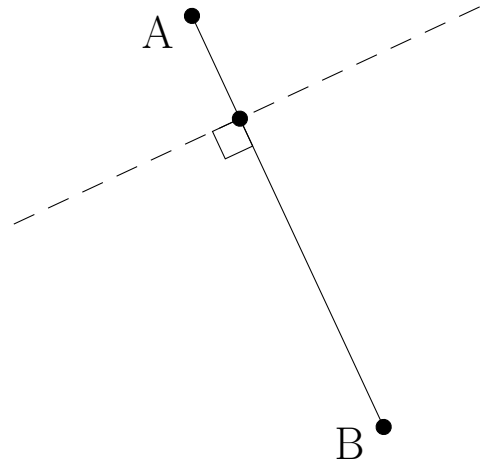
# Rectas Perpendiculares (A) Respuestas

Construya la recta perpendicular al segmento que pasa por el punto sin marcar.

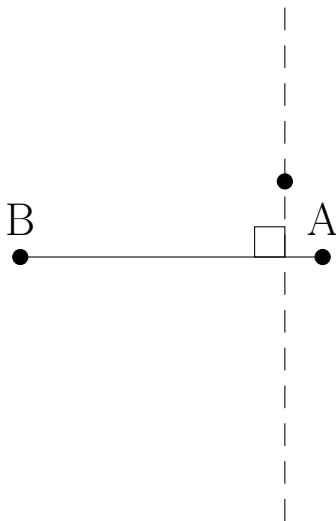
1.



2.



3.



4.

