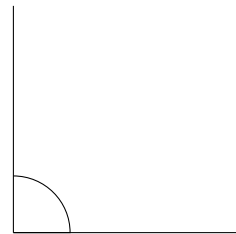
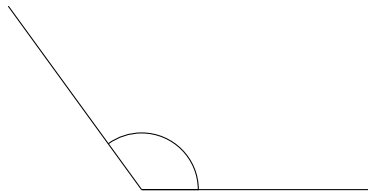
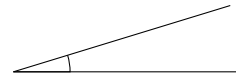
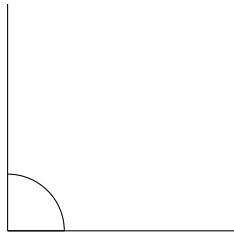
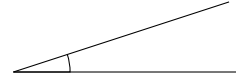
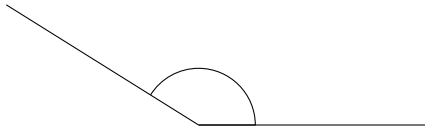


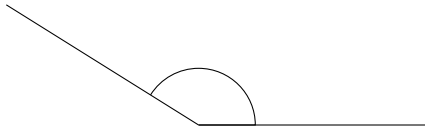
Clasificar Ángulos (B)

Clasifique cada ángulo como agudo, recto, u obtuso.

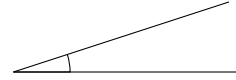


Clasificar Ángulos (B) Respuestas

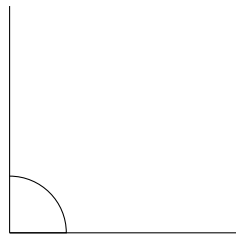
Clasifique cada ángulo como agudo, recto, u obtuso.



obtuso

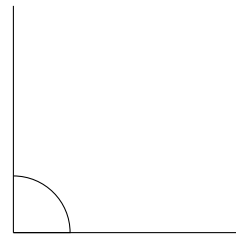
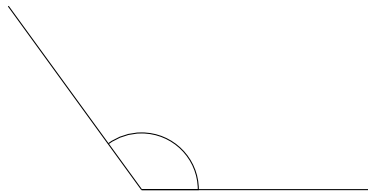


agudo



recto

agudo



obtuso

recto