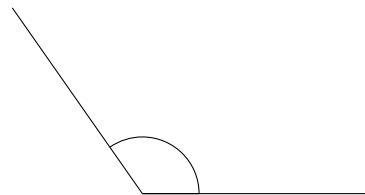
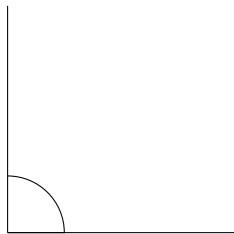
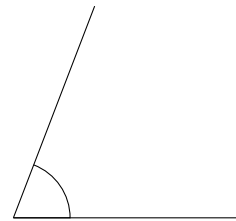
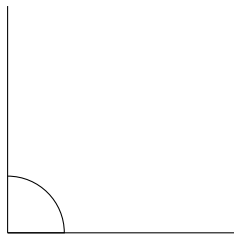
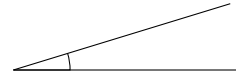


Clasificar Ángulos (G)

Clasifique cada ángulo como agudo, recto, u obtuso.

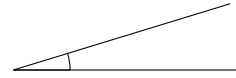


Clasificar Ángulos (G) Respuestas

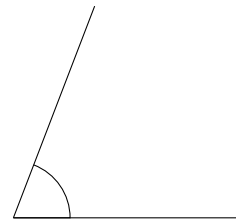
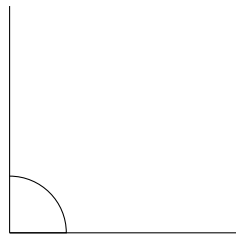
Clasifique cada ángulo como agudo, recto, u obtuso.



obtuso

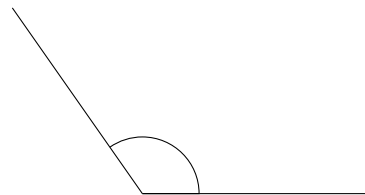
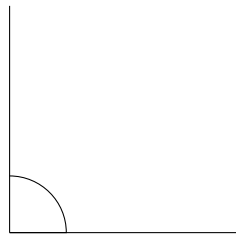


agudo



recto

agudo



recto

obtuso