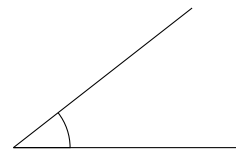
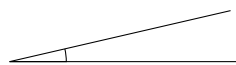
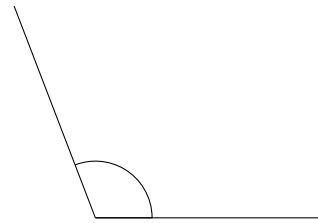
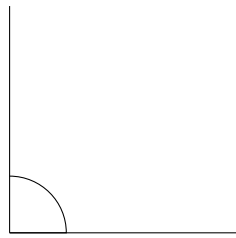
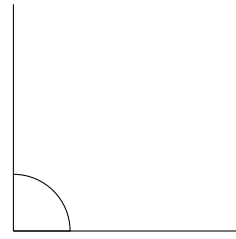


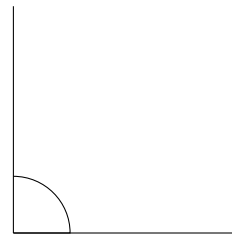
# Clasificar Ángulos (J)

Clasifique cada ángulo como agudo, recto, u obtuso.



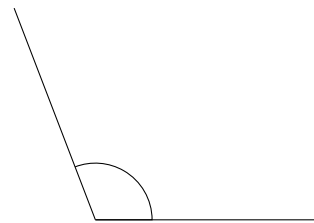
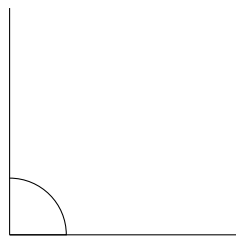
# Clasificar Ángulos (J) Respuestas

Clasifique cada ángulo como agudo, recto, u obtuso.



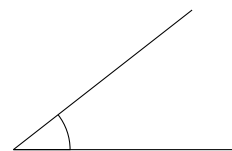

obtuso

recto



recto

obtuso



agudo

agudo