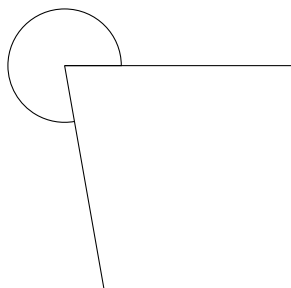
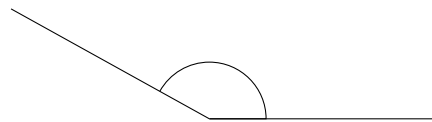
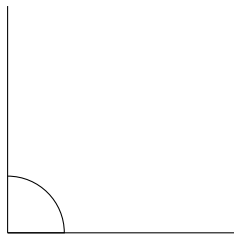
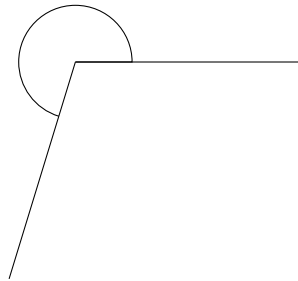
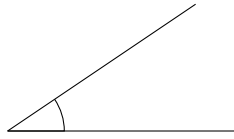


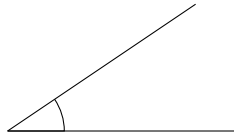
# Clasificar Ángulos (C)

Clasifique cada ángulo como agudo, recto, obtuso, llano o reflejo.

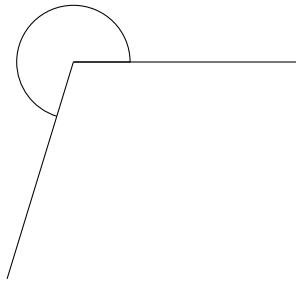


# Clasificar Ángulos (C) Respuestas

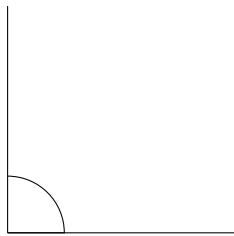
Clasifique cada ángulo como agudo, recto, obtuso, llano o reflejo.



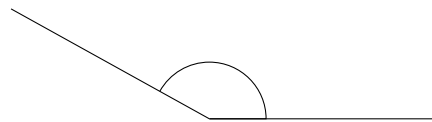
agudo



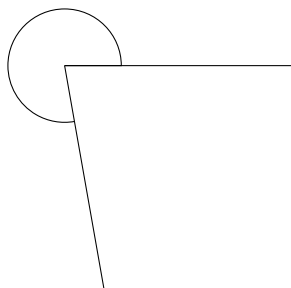
reflejo



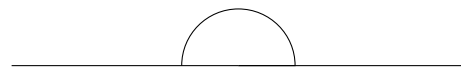
recto



obtuso



reflejo



llano