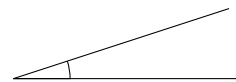
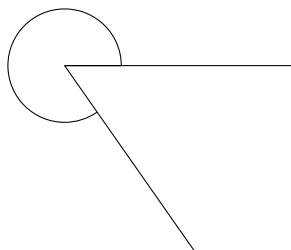
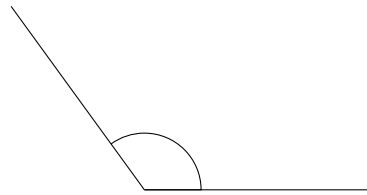
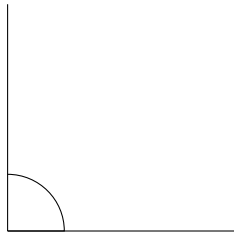


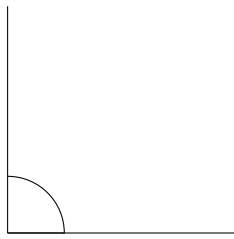
Clasificar Ángulos (J)

Clasifique cada ángulo como agudo, recto, obtuso, llano o reflejo.



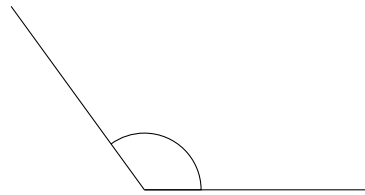
Clasificar Ángulos (J) Respuestas

Clasifique cada ángulo como agudo, recto, obtuso, llano o reflejo.



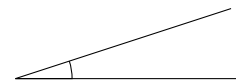
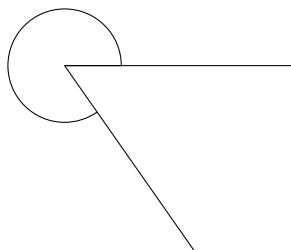
recto

llano



obtuso

obtuso



reflejo

agudo