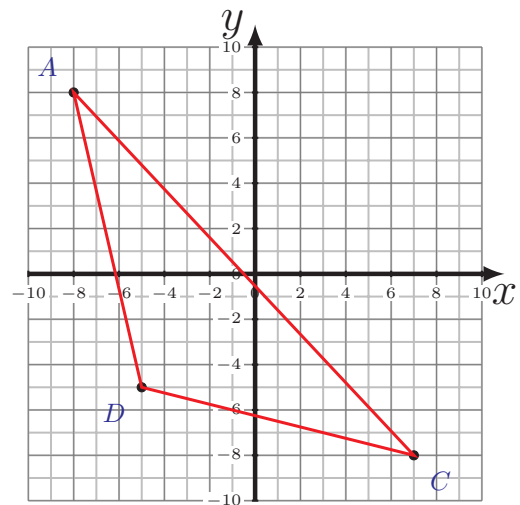
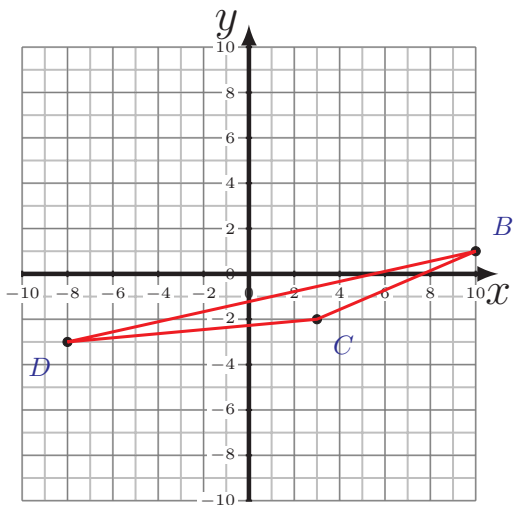
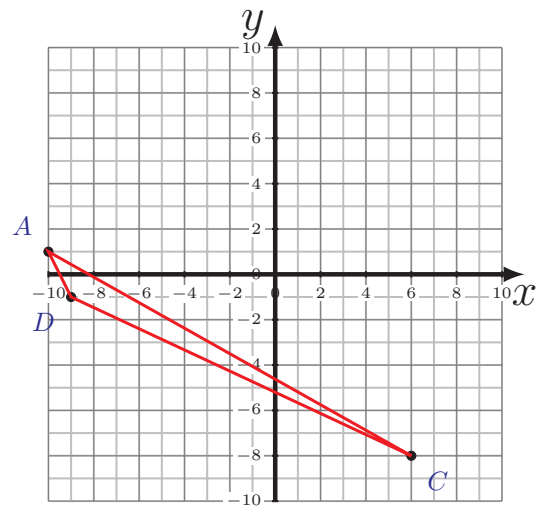
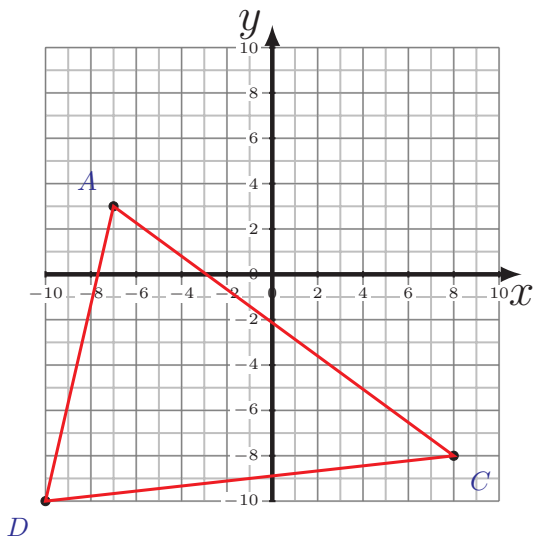


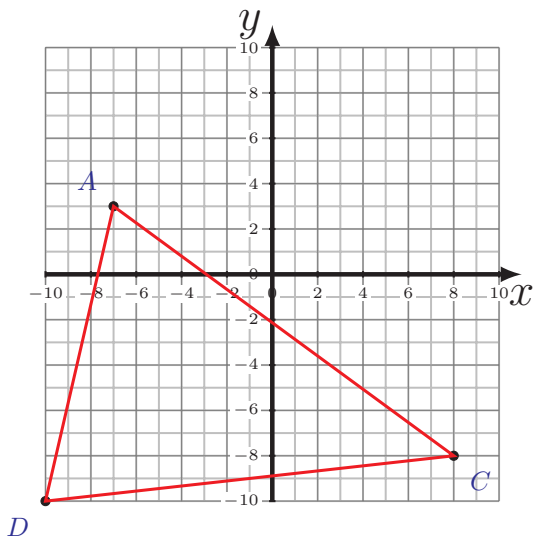
# Área y Perímetro de Triángulos (B)

Calcule el área y perímetro de cada triángulo

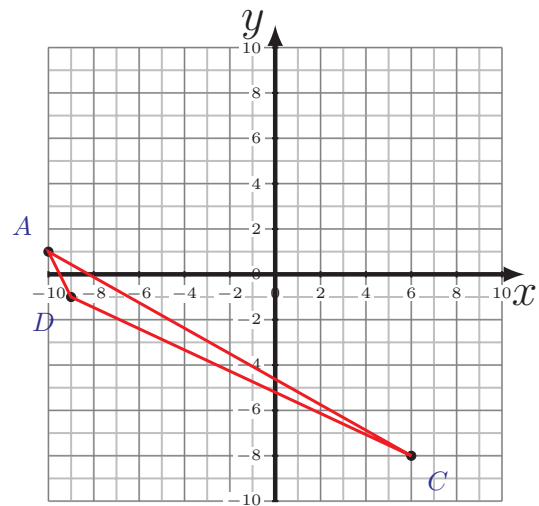


# Área y Perímetro de Triángulos (B) Respuestas

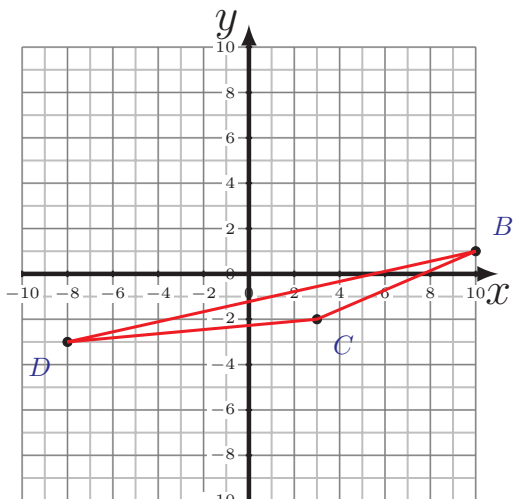
Calcule el área y perímetro de cada triángulo



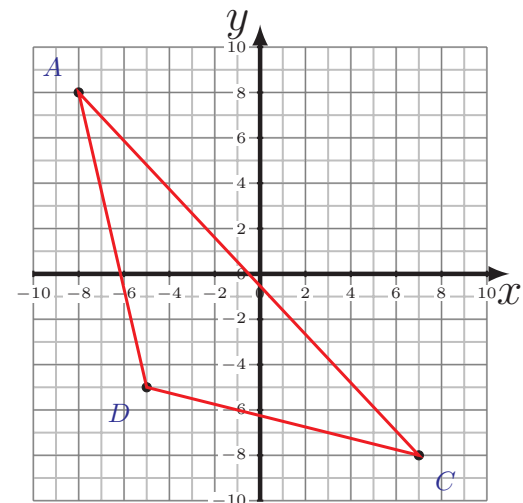
$$\begin{aligned} \overline{AC} &= 18.6 \text{ u} \\ \overline{CD} &= 18.11 \text{ u} \quad \overline{DA} = 13.34 \text{ u} \\ P &= 50.05 \text{ u} \\ A &= 114 \text{ u}^2 \end{aligned}$$



$$\begin{aligned} \overline{AC} &= 18.36 \text{ u} \\ \overline{CD} &= 16.55 \text{ u} \quad \overline{DA} = 2.24 \text{ u} \\ P &= 37.15 \text{ u} \\ A &= 11.5 \text{ u}^2 \end{aligned}$$



$$\begin{aligned} \overline{BC} &= 7.62 \text{ u} \\ \overline{CD} &= 11.05 \text{ u} \quad \overline{DB} = 18.44 \text{ u} \\ P &= 37.11 \text{ u} \\ A &= 13 \text{ u}^2 \end{aligned}$$



$$\begin{aligned} \overline{AC} &= 21.93 \text{ u} \\ \overline{CD} &= 12.37 \text{ u} \quad \overline{DA} = 13.34 \text{ u} \\ P &= 47.64 \text{ u} \\ A &= 73.5 \text{ u}^2 \end{aligned}$$