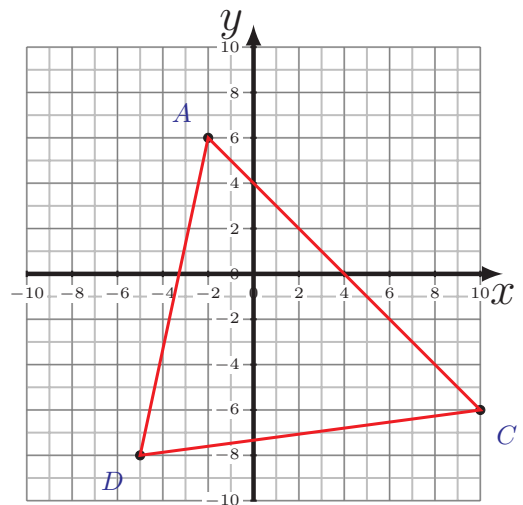
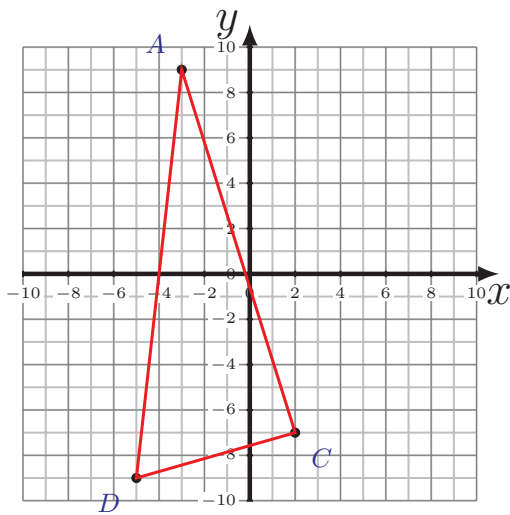
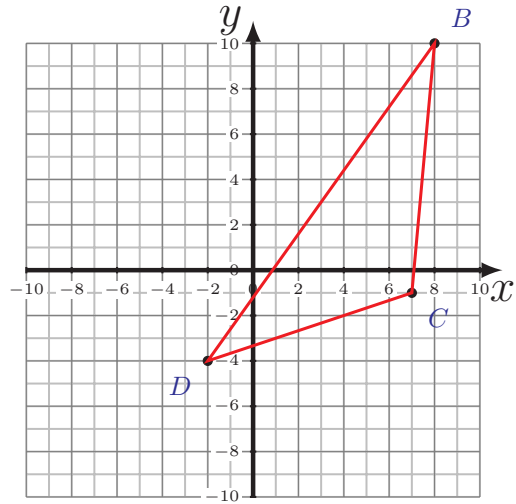
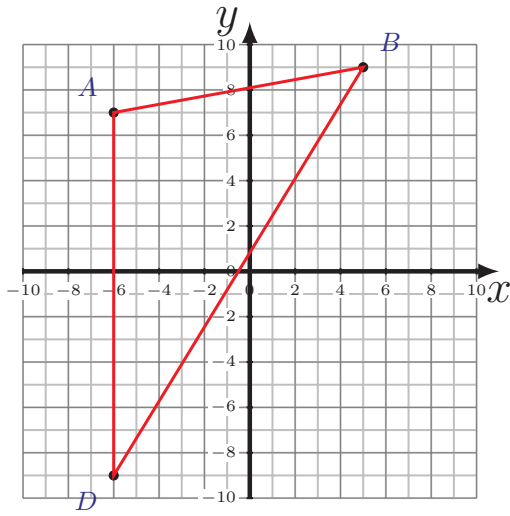


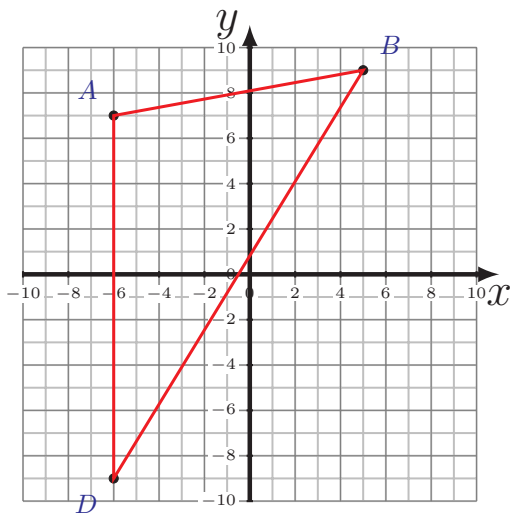
Área y Perímetro de Triángulos (D)

Calcule el área y perímetro de cada triángulo

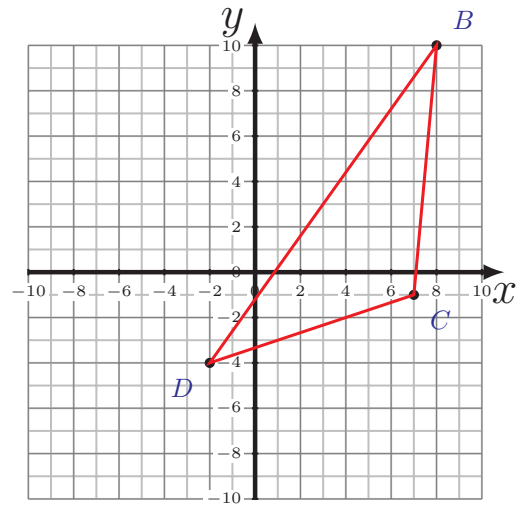


Área y Perímetro de Triángulos (D) Respuestas

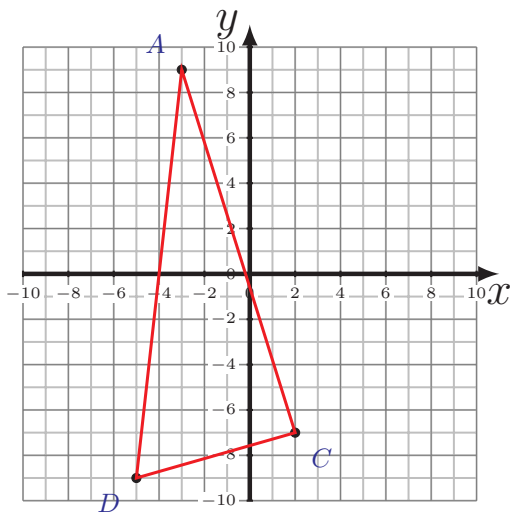
Calcule el área y perímetro de cada triángulo



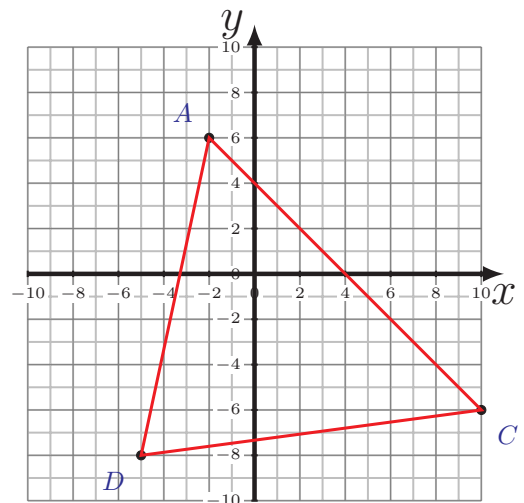
$$\begin{aligned}\overline{AB} &= 11.18 \text{ u} & \overline{BD} &= 21.1 \text{ u} \\ \overline{DA} &= 16 \text{ u} \\ P &= 48.28 \text{ u} \\ A &= 88 \text{ u}^2\end{aligned}$$



$$\begin{aligned}\overline{BC} &= 11.05 \text{ u} \\ \overline{CD} &= 9.49 \text{ u} & \overline{DB} &= 17.2 \text{ u} \\ P &= 37.74 \text{ u} \\ A &= 48 \text{ u}^2\end{aligned}$$



$$\begin{aligned}\overline{AC} &= 16.76 \text{ u} \\ \overline{CD} &= 7.28 \text{ u} & \overline{DA} &= 18.11 \text{ u} \\ P &= 42.15 \text{ u} \\ A &= 61 \text{ u}^2\end{aligned}$$



$$\begin{aligned}\overline{AC} &= 16.97 \text{ u} \\ \overline{CD} &= 15.13 \text{ u} & \overline{DA} &= 14.32 \text{ u} \\ P &= 46.42 \text{ u} \\ A &= 102 \text{ u}^2\end{aligned}$$