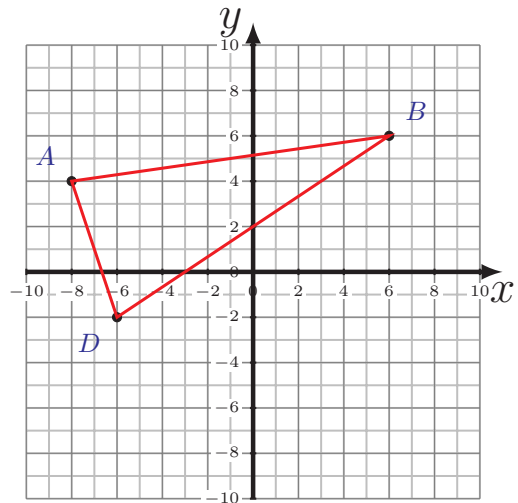
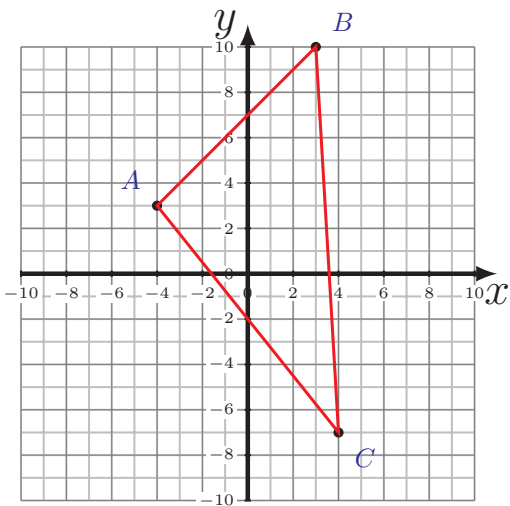
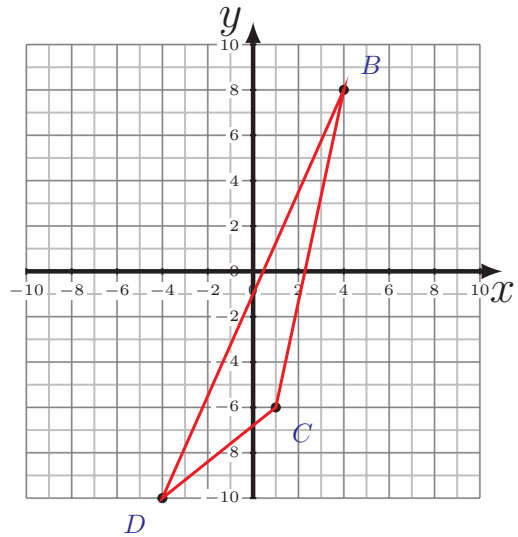
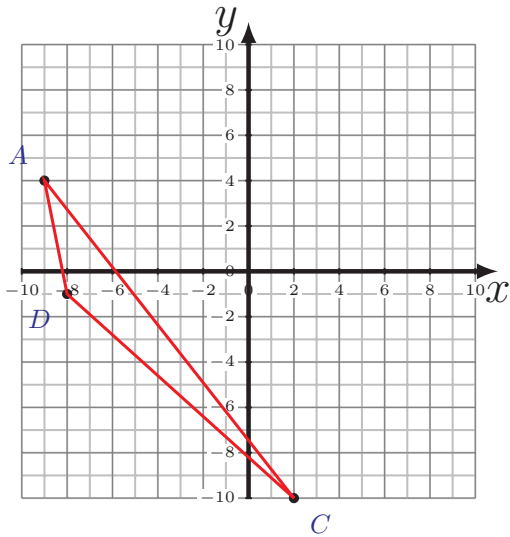


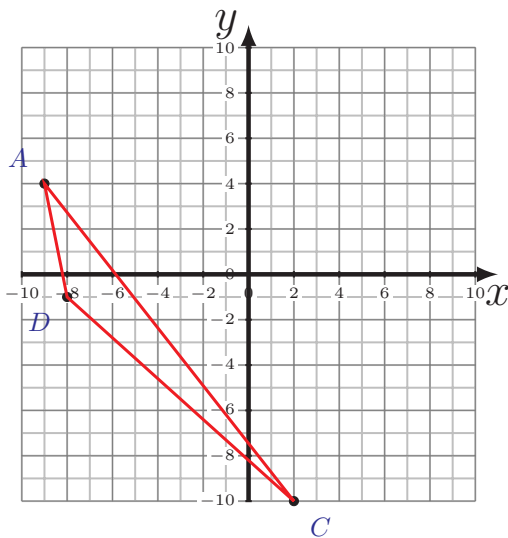
# Área y Perímetro de Triángulos (F)

Calcule el área y perímetro de cada triángulo

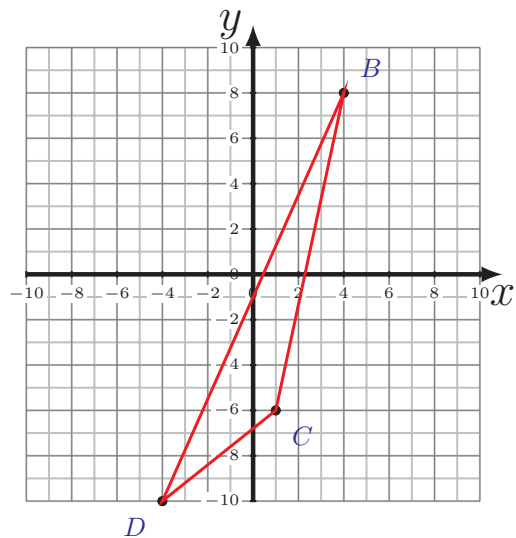


# Área y Perímetro de Triángulos (F) Respuestas

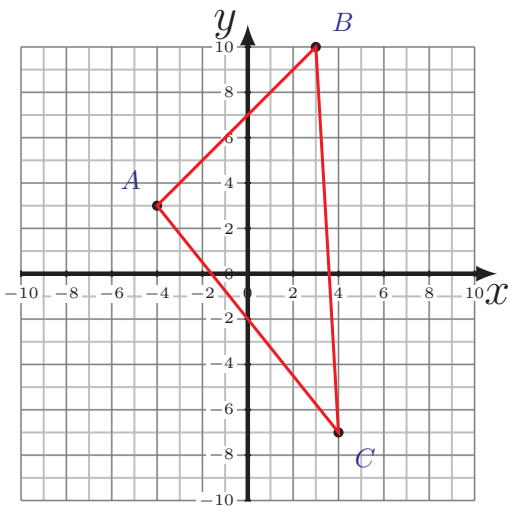
Calcule el área y perímetro de cada triángulo



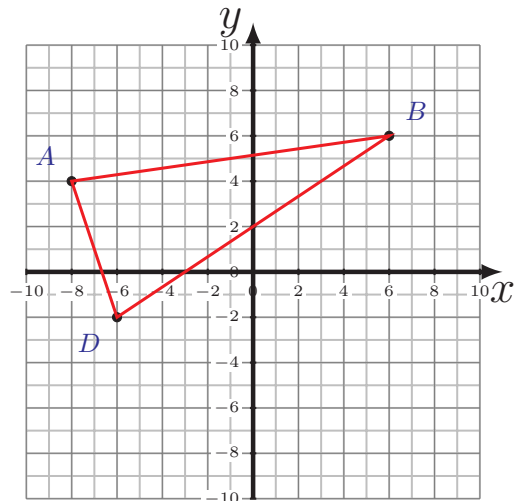
$$\begin{aligned}\overline{AC} &= 17.8 \text{ u} \\ \overline{CD} &= 13.45 \text{ u} \quad \overline{DA} = 5.1 \text{ u} \\ P &= 36.35 \text{ u} \\ A &= 20.5 \text{ u}^2\end{aligned}$$



$$\begin{aligned}\overline{BC} &= 14.32 \text{ u} \\ \overline{CD} &= 6.4 \text{ u} \quad \overline{DB} = 19.7 \text{ u} \\ P &= 40.42 \text{ u} \\ A &= 29 \text{ u}^2\end{aligned}$$



$$\begin{aligned}\overline{AB} &= 9.9 \text{ u} \quad \overline{BC} = 17.03 \text{ u} \\ \overline{CA} &= 12.81 \text{ u} \\ P &= 39.74 \text{ u} \\ A &= 63 \text{ u}^2\end{aligned}$$



$$\begin{aligned}\overline{AB} &= 14.14 \text{ u} \quad \overline{BD} = 14.42 \text{ u} \\ \overline{DA} &= 6.32 \text{ u} \\ P &= 34.88 \text{ u} \\ A &= 44 \text{ u}^2\end{aligned}$$