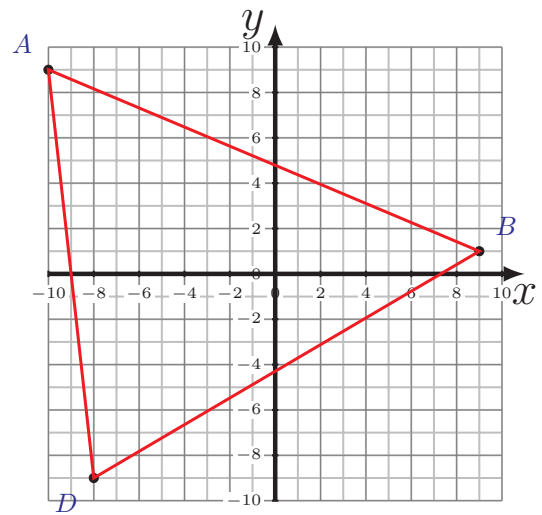
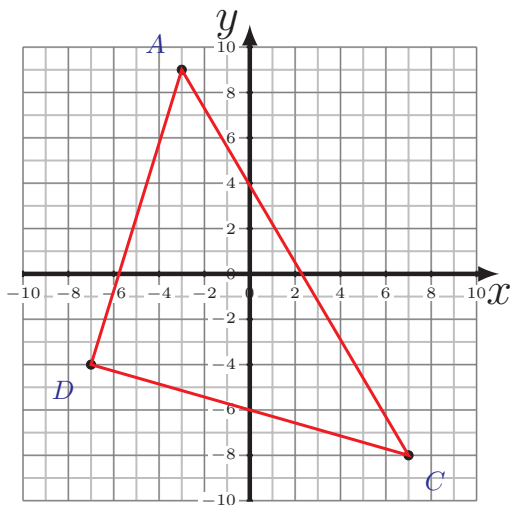
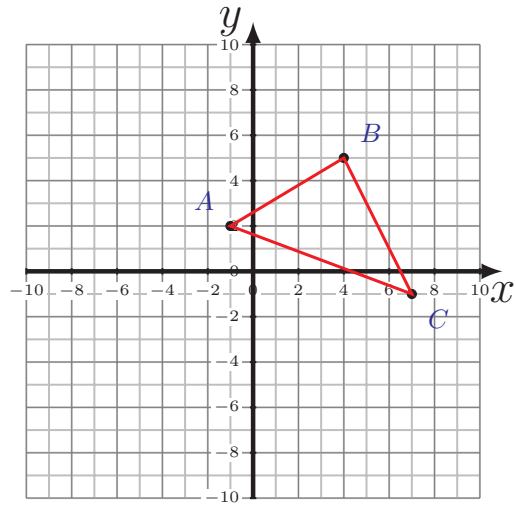
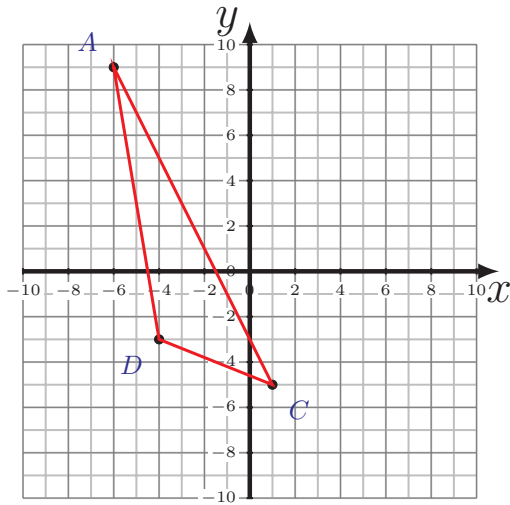


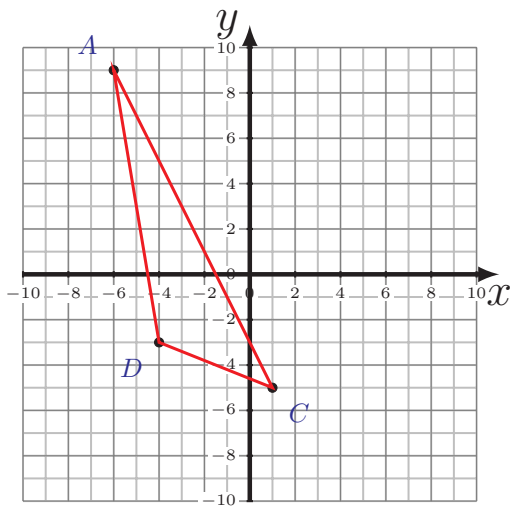
Área y Perímetro de Triángulos (J)

Calcule el área y perímetro de cada triángulo

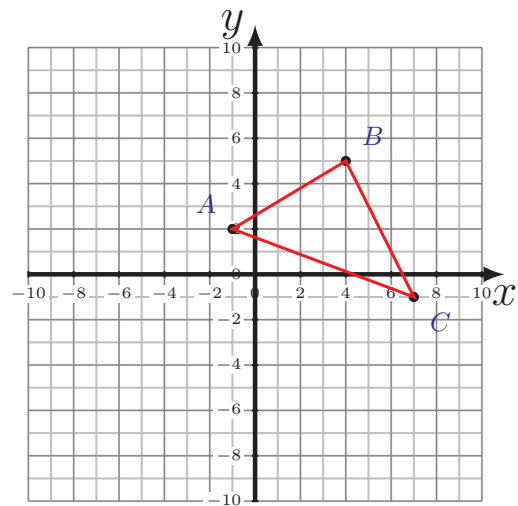


Área y Perímetro de Triángulos (J) Respuestas

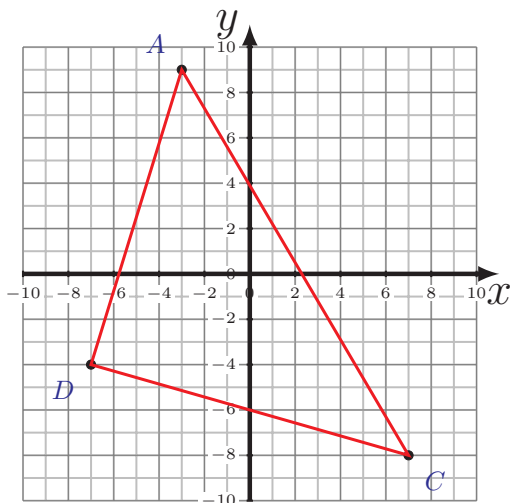
Calcule el área y perímetro de cada triángulo



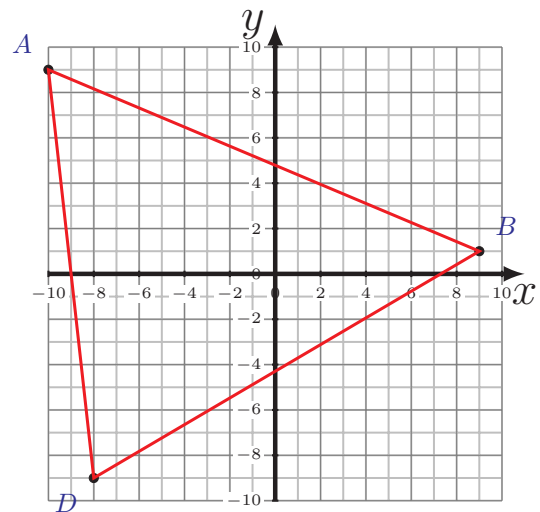
$$\begin{aligned}\overline{AC} &= 15.65 \text{ u} \\ \overline{CD} &= 5.39 \text{ u} \quad \overline{DA} = 12.17 \text{ u} \\ P &= 33.21 \text{ u} \\ A &= 28 \text{ u}^2\end{aligned}$$



$$\begin{aligned}\overline{AB} &= 5.83 \text{ u} \quad \overline{BC} = 6.71 \text{ u} \\ \overline{CA} &= 8.54 \text{ u} \\ P &= 21.08 \text{ u} \\ A &= 19.5 \text{ u}^2\end{aligned}$$



$$\begin{aligned}\overline{AC} &= 19.72 \text{ u} \\ \overline{CD} &= 14.56 \text{ u} \quad \overline{DA} = 13.6 \text{ u} \\ P &= 47.88 \text{ u} \\ A &= 99 \text{ u}^2\end{aligned}$$



$$\begin{aligned}\overline{AB} &= 20.62 \text{ u} \quad \overline{BD} = 19.72 \text{ u} \\ \overline{DA} &= 18.11 \text{ u} \\ P &= 58.45 \text{ u} \\ A &= 163 \text{ u}^2\end{aligned}$$