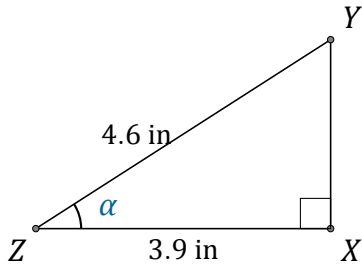


Función Coseno (E)

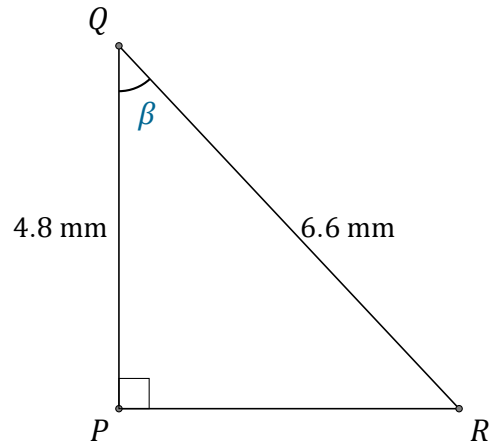
Nombre: _____

Fecha: _____

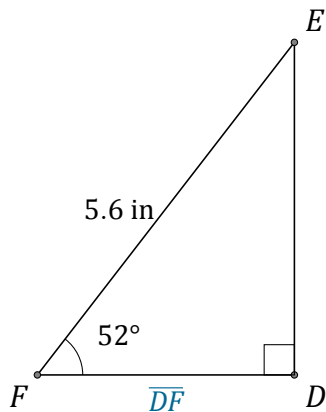
Calcule los valores de los ángulos y lados usando la función coseno: $\cos(\alpha) = \frac{C.A.}{H}$



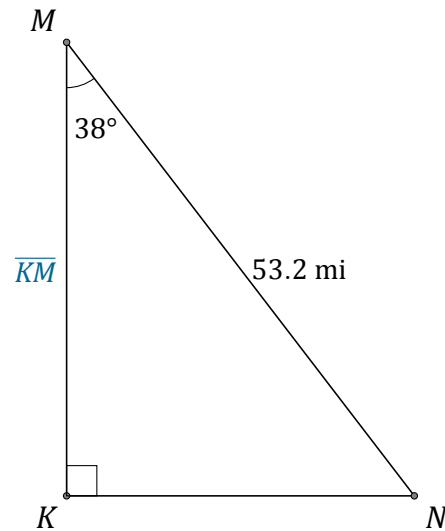
$$\alpha = \angle XZY = \underline{\hspace{2cm}}$$



$$\beta = \angle PQR = \underline{\hspace{2cm}}$$



$$\overline{DF} = \underline{\hspace{2cm}}$$



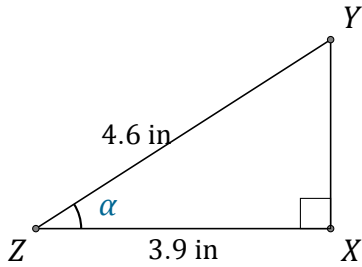
$$\overline{KM} = \underline{\hspace{2cm}}$$

Función Coseno (E) Respuestas

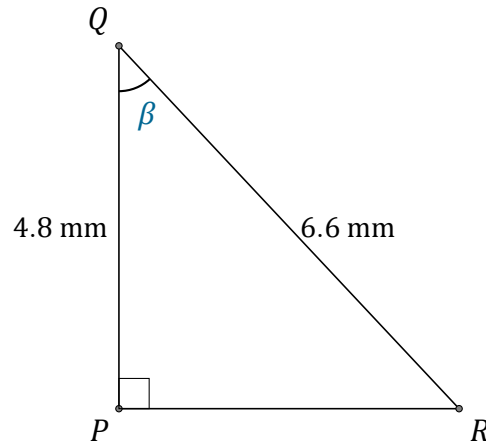
Nombre: _____

Fecha: _____

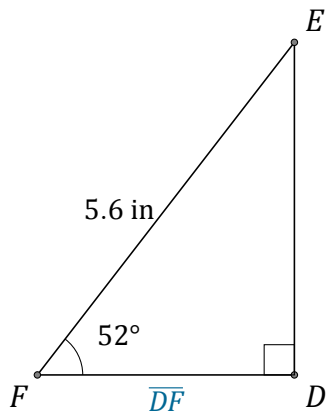
Calcule los valores de los ángulos y lados usando la función coseno: $\cos(\alpha) = \frac{C.A.}{H}$



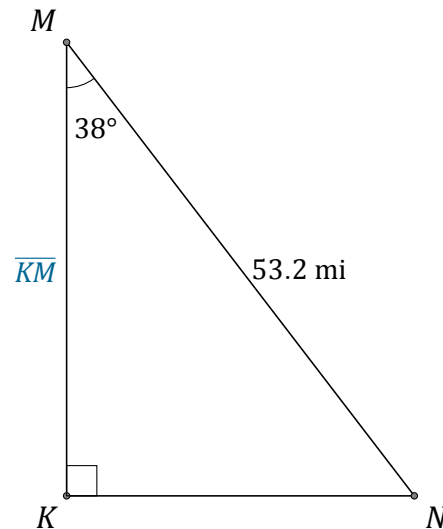
$$\alpha = \angle XZY = \underline{32^\circ}$$



$$\beta = \angle PQR = \underline{43.3^\circ}$$



$$\overline{DF} = \underline{3.4 \text{ in}}$$



$$\overline{KM} = \underline{41.9 \text{ mi}}$$