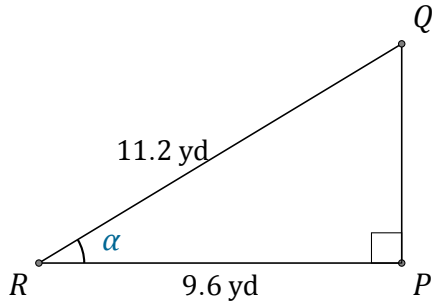


# Función Coseno (F)

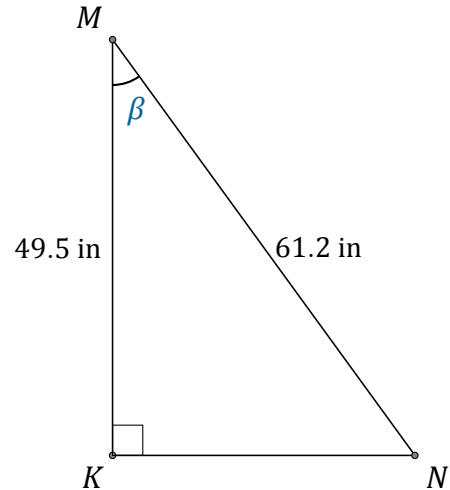
Nombre: \_\_\_\_\_

Fecha: \_\_\_\_\_

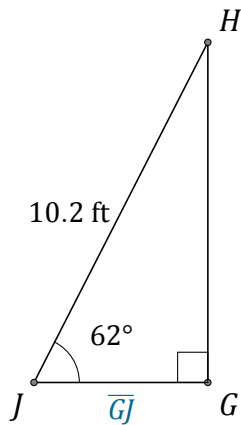
Calcule los valores de los ángulos y lados usando la función coseno:  $\cos(\alpha) = \frac{C.A.}{H}$



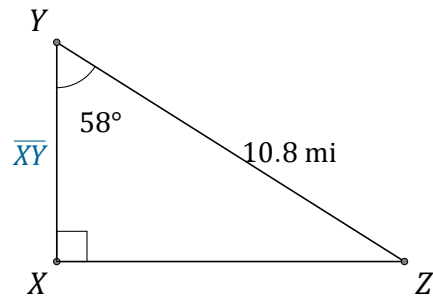
$\alpha = \angle PRQ =$  \_\_\_\_\_



$\beta = \angle KMN =$  \_\_\_\_\_



$\overline{GJ} =$  \_\_\_\_\_



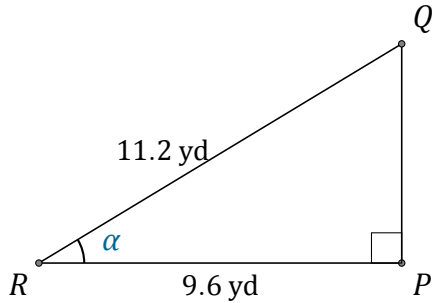
$\overline{XY} =$  \_\_\_\_\_

# Función Coseno (F) Respuestas

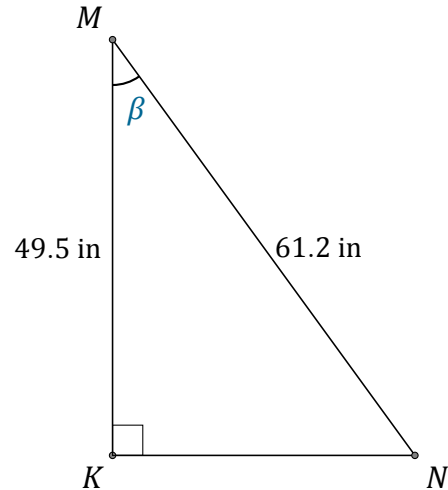
Nombre: \_\_\_\_\_

Fecha: \_\_\_\_\_

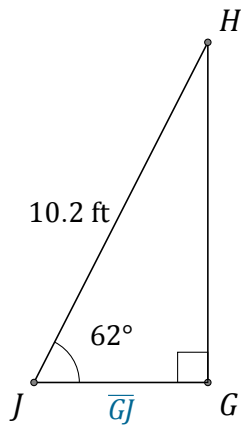
Calcule los valores de los ángulos y lados usando la función coseno:  $\cos(\alpha) = \frac{C.A.}{H}$



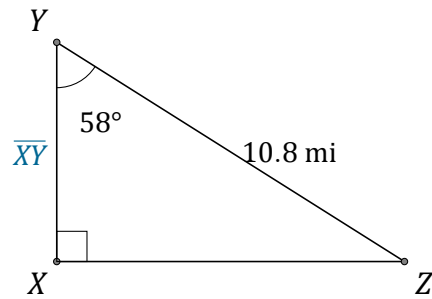
$$\alpha = \angle PRQ = \underline{31^\circ}$$



$$\beta = \angle KMN = \underline{36^\circ}$$



$$\overline{GJ} = \underline{4.8 \text{ ft}}$$



$$\overline{XY} = \underline{5.7 \text{ mi}}$$