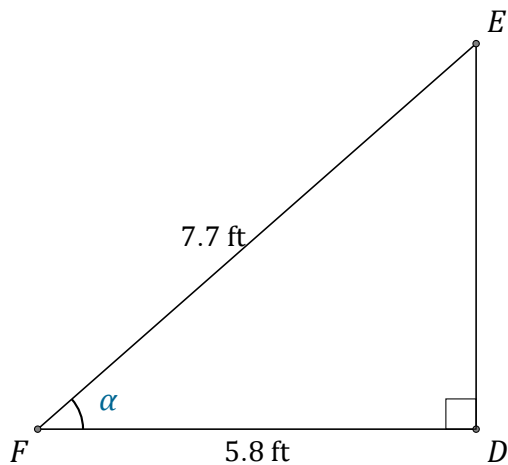


Función Coseno (G)

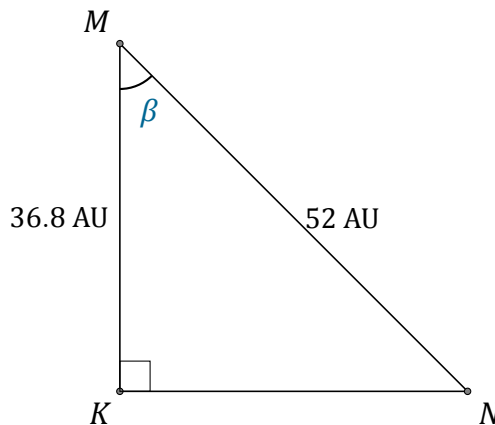
Nombre: _____

Fecha: _____

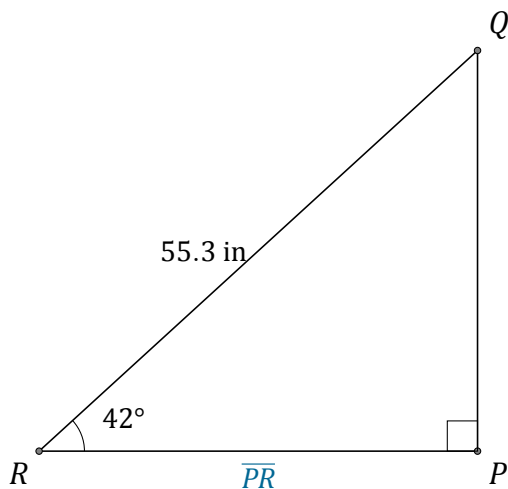
Calcule los valores de los ángulos y lados usando la función coseno: $\cos(\alpha) = \frac{C.A.}{H}$



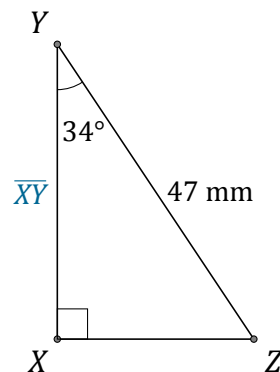
$\alpha = \angle DFE =$ _____



$\beta = \angle KMN =$ _____



$\overline{PR} =$ _____



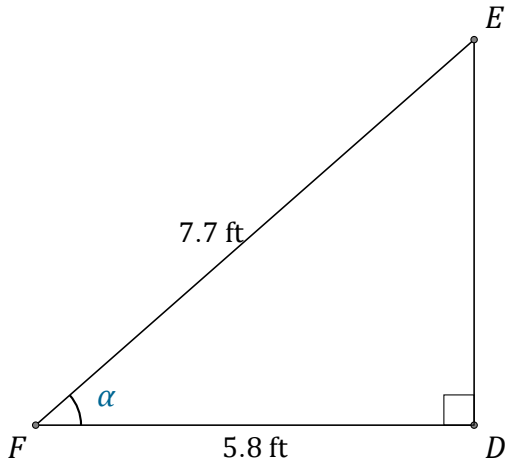
$\overline{XY} =$ _____

Función Coseno (G) Respuestas

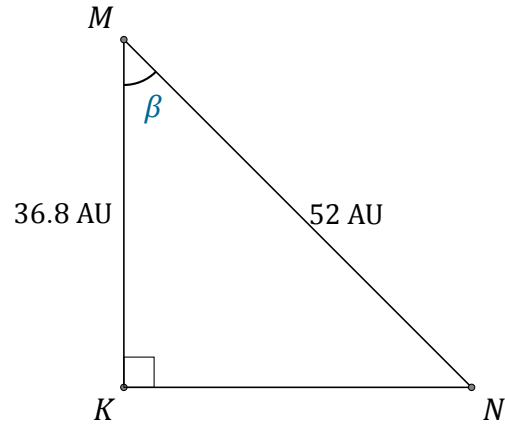
Nombre: _____

Fecha: _____

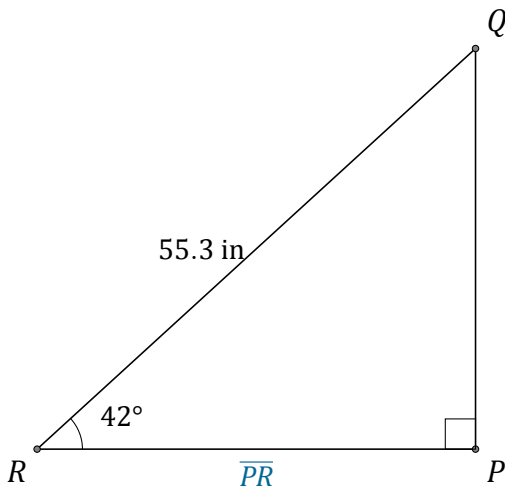
Calcule los valores de los ángulos y lados usando la función coseno: $\cos(\alpha) = \frac{C.A.}{H}$



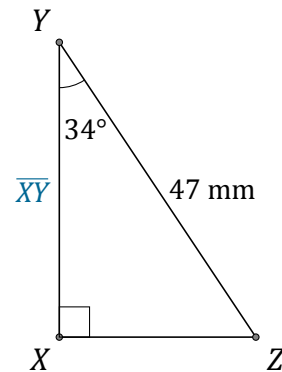
$$\alpha = \angle DFE = \underline{41.1^\circ}$$



$$\beta = \angle KMN = \underline{45^\circ}$$



$$\overline{PR} = \underline{41.1 \text{ in}}$$



$$\overline{XY} = \underline{39 \text{ mm}}$$