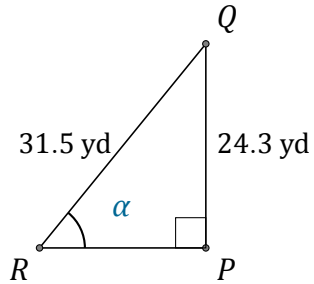


Función Seno (B)

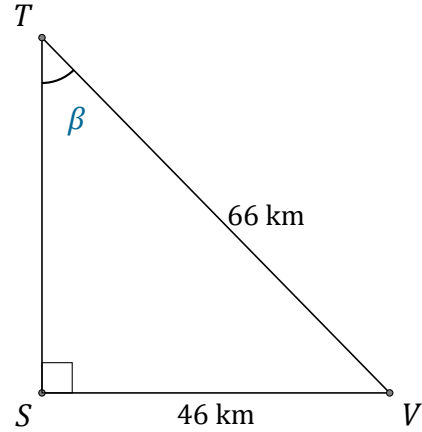
Nombre: _____

Fecha: _____

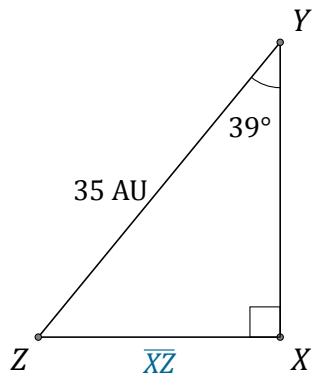
Calcule los valores de los ángulos y lados usando la función seno: $sen(\alpha) = \frac{C.O.}{H}$



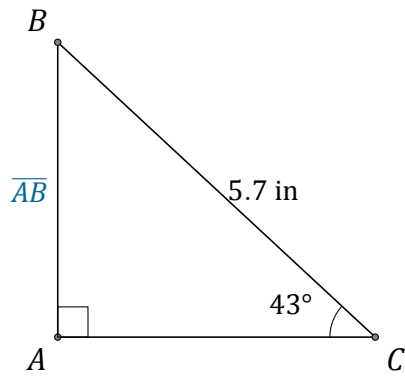
$\alpha = \angle PRQ =$ _____



$\beta = \angle STV =$ _____



$\overline{XZ} =$ _____



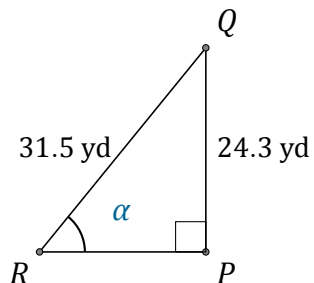
$\overline{AB} =$ _____

Función Seno (B) Respuestas

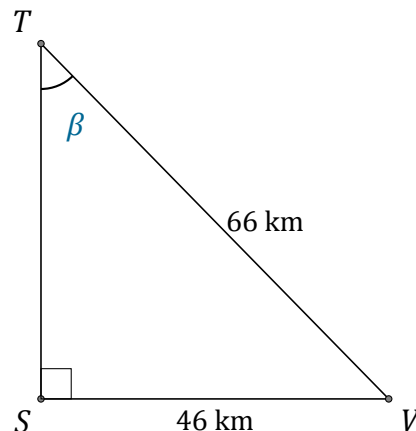
Nombre: _____

Fecha: _____

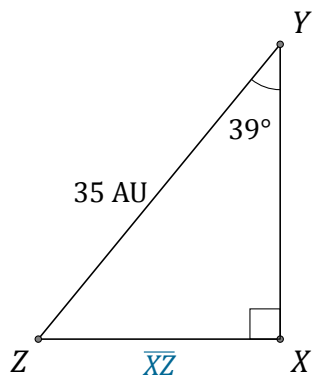
Calcule los valores de los ángulos y lados usando la función seno: $\text{sen}(\alpha) = \frac{C.O.}{H}$



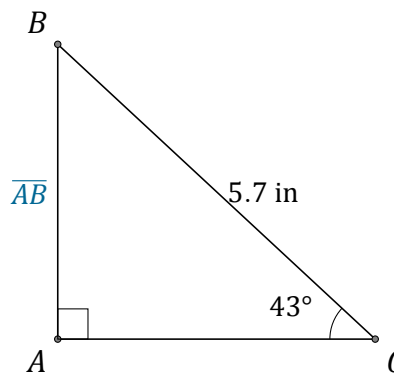
$$\alpha = \angle PRQ = \underline{50.5^\circ}$$



$$\beta = \angle STV = \underline{44.2^\circ}$$



$$\overline{XZ} = \underline{22 \text{ AU}}$$



$$\overline{AB} = \underline{3.9 \text{ in}}$$