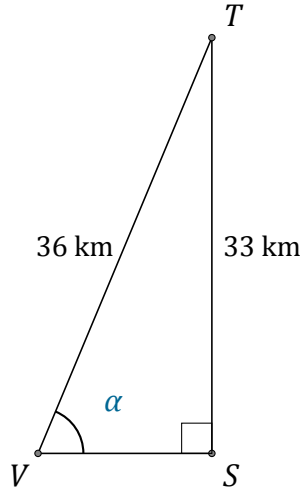


Función Seno (J)

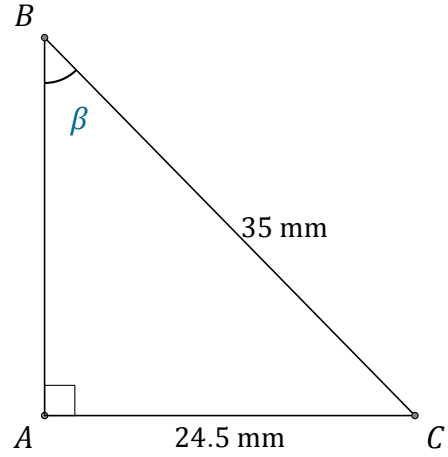
Nombre: _____

Fecha: _____

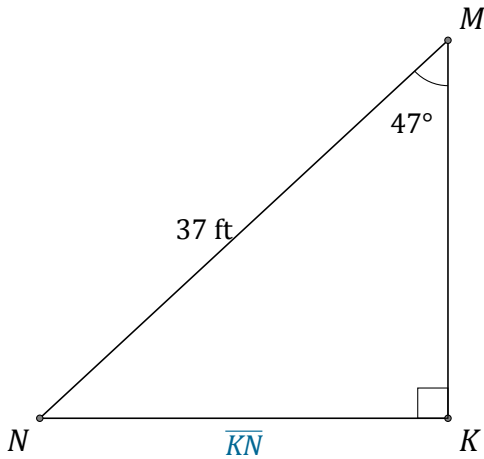
Calcule los valores de los ángulos y lados usando la función seno: $sen(\alpha) = \frac{C.O.}{H}$



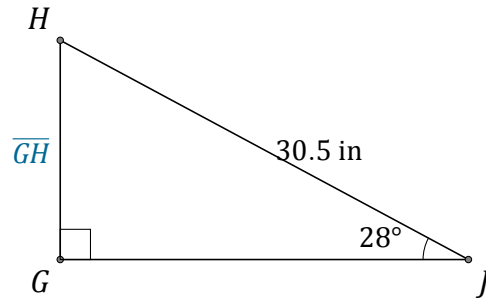
$\alpha = \angle SVT =$ _____



$\beta = \angle ABC =$ _____



$\overline{KN} =$ _____



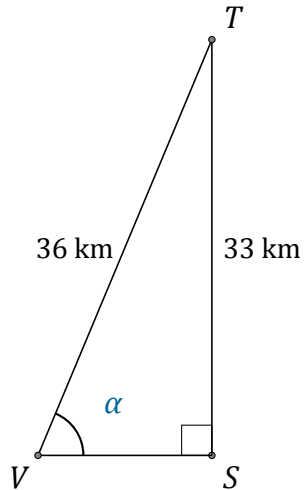
$\overline{GH} =$ _____

Función Seno (J) Respuestas

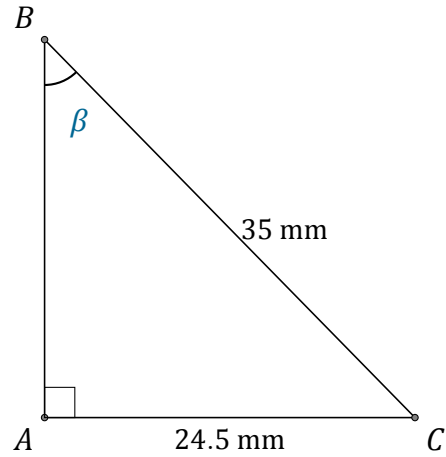
Nombre: _____

Fecha: _____

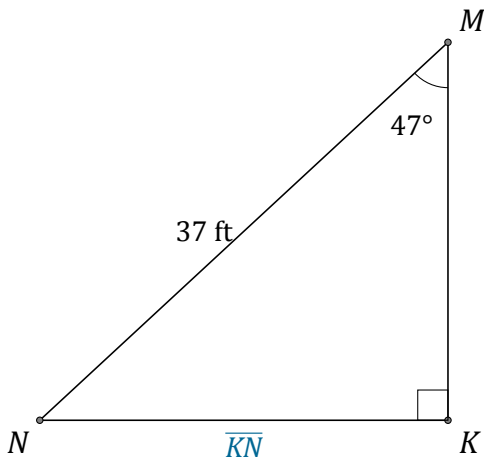
Calcule los valores de los ángulos y lados usando la función seno: $\text{sen}(\alpha) = \frac{C.O.}{H}$



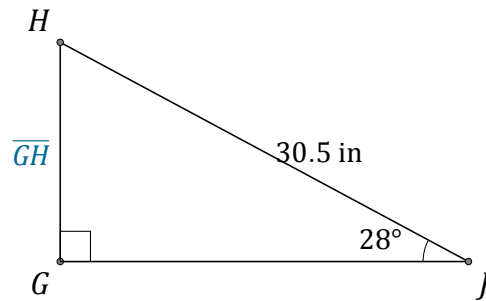
$$\alpha = \angle SVT = \underline{66.4^\circ}$$



$$\beta = \angle ABC = \underline{44.4^\circ}$$



$$\overline{KN} = \underline{27.1 \text{ ft}}$$



$$\overline{GH} = \underline{14.3 \text{ in}}$$