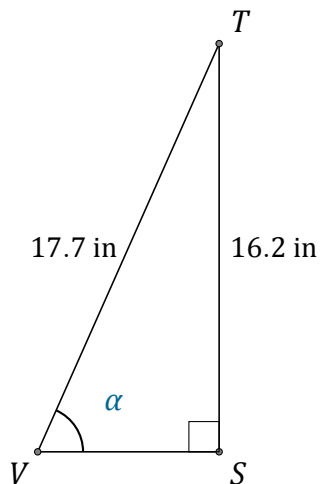


Función Seno (J)

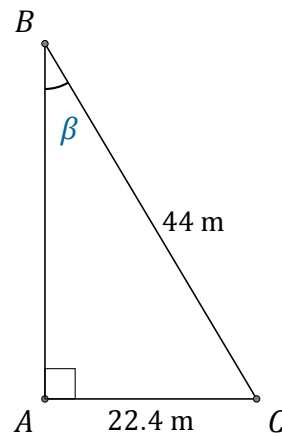
Nombre: _____

Fecha: _____

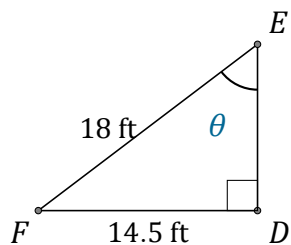
Calcule los valores de los ángulos usando la función seno: $\text{sen}(\alpha) = \frac{C.O.}{H}$



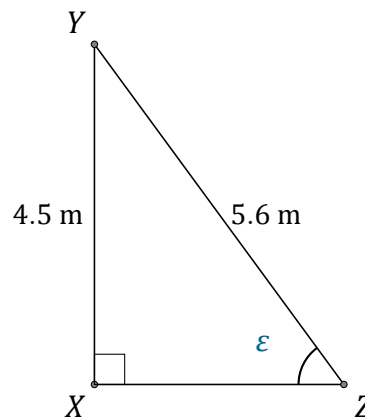
$$\alpha = \angle SVT = \underline{\hspace{2cm}}$$



$$\beta = \angle ABC = \underline{\hspace{2cm}}$$



$$\theta = \angle DEF = \underline{\hspace{2cm}}$$



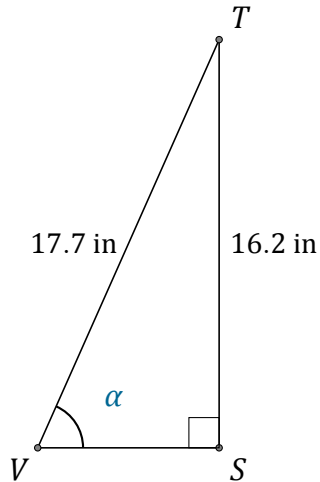
$$\epsilon = \angle XZY = \underline{\hspace{2cm}}$$

Función Seno (J) Respuestas

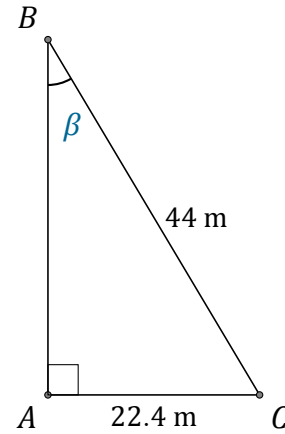
Nombre: _____

Fecha: _____

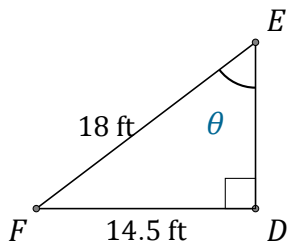
Calcule los valores de los ángulos usando la función seno: $\text{sen}(\alpha) = \frac{C.O.}{H}$



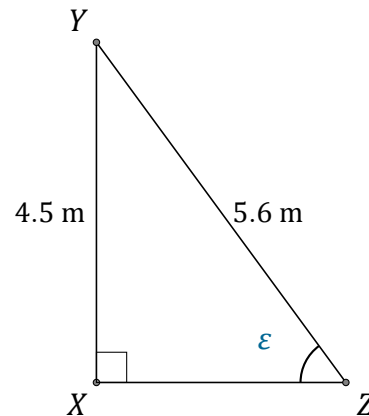
$$\alpha = \angle SVT = \underline{66.2^\circ}$$



$$\beta = \angle ABC = \underline{30.6^\circ}$$



$$\theta = \angle DEF = \underline{53.7^\circ}$$



$$\epsilon = \angle XZY = \underline{53.5^\circ}$$