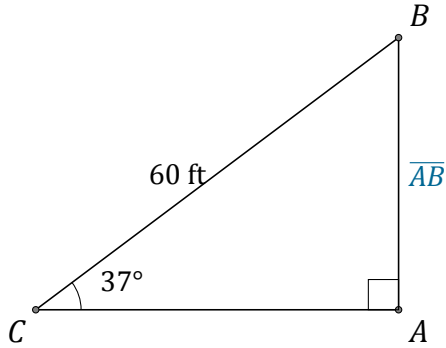


Función Seno (F)

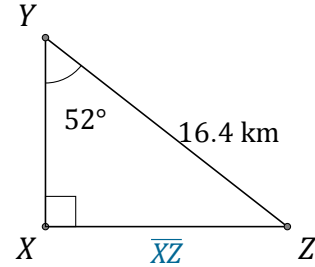
Nombre: _____

Fecha: _____

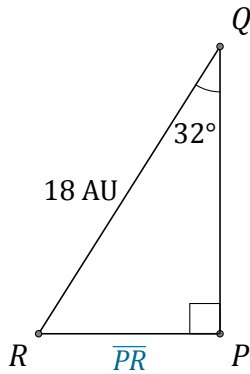
Calcule los valores de los lados usando la función seno: $\text{sen}(\alpha) = \frac{\text{C.O.}}{H}$



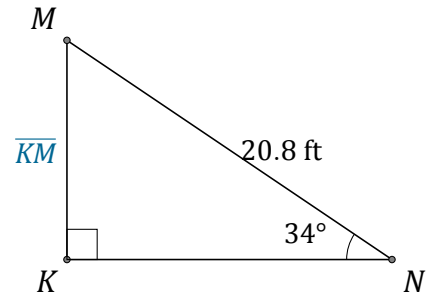
$$\overline{AB} = \underline{\hspace{2cm}}$$



$$\overline{XZ} = \underline{\hspace{2cm}}$$



$$\overline{PR} = \underline{\hspace{2cm}}$$



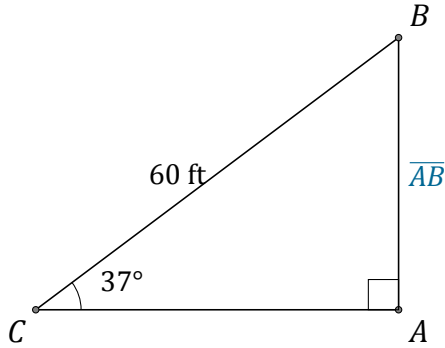
$$\overline{KM} = \underline{\hspace{2cm}}$$

Función Seno (F) Respuestas

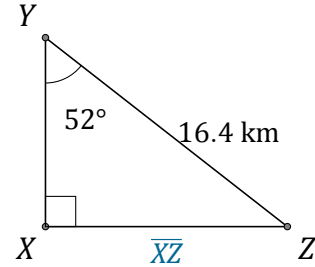
Nombre: _____

Fecha: _____

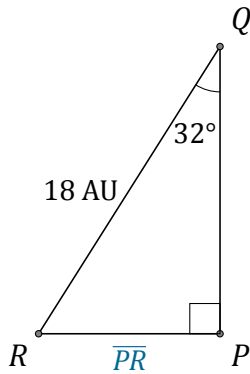
Calcule los valores de los lados usando la función seno: $\text{sen}(\alpha) = \frac{C.O.}{H}$



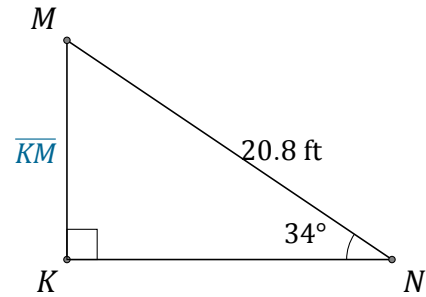
$$\overline{AB} = \underline{36.1 \text{ ft}}$$



$$\overline{XZ} = \underline{12.9 \text{ km}}$$



$$\overline{PR} = \underline{9.5 \text{ AU}}$$



$$\overline{KM} = \underline{11.6 \text{ ft}}$$