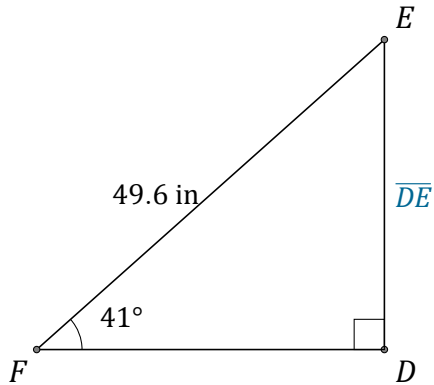


Función Seno (G)

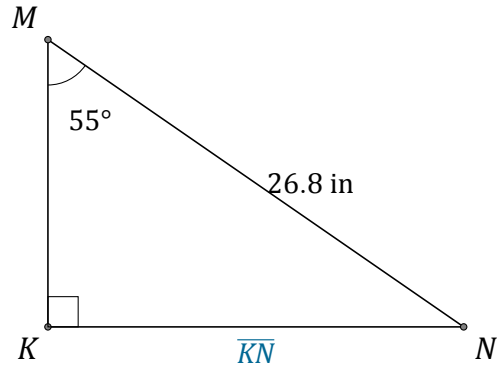
Nombre: _____

Fecha: _____

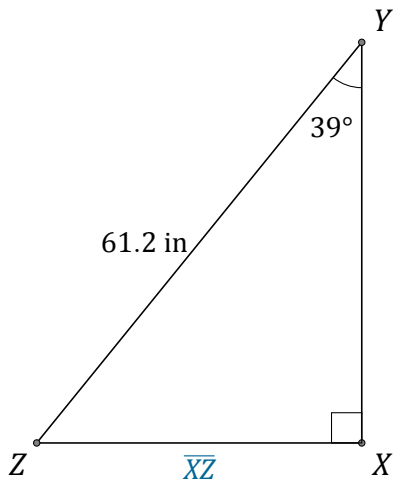
Calcule los valores de los lados usando la función seno: $\text{sen}(\alpha) = \frac{\text{C.O.}}{H}$



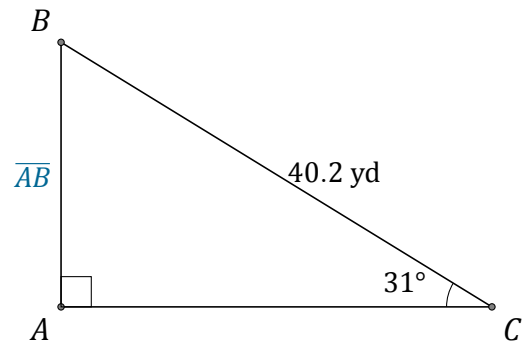
$$\overline{DE} = \underline{\hspace{2cm}}$$



$$\overline{KN} = \underline{\hspace{2cm}}$$



$$\overline{XZ} = \underline{\hspace{2cm}}$$



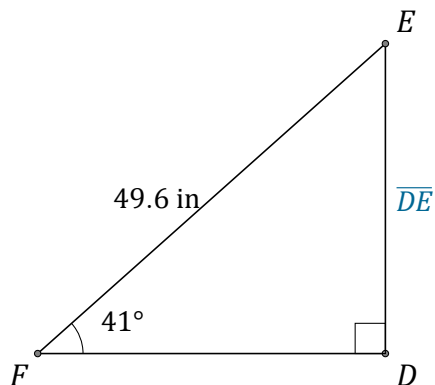
$$\overline{AB} = \underline{\hspace{2cm}}$$

Función Seno (G) Respuestas

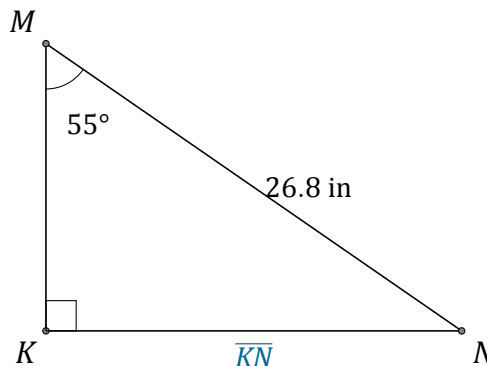
Nombre: _____

Fecha: _____

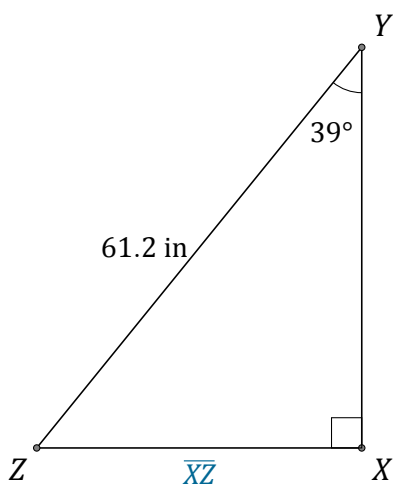
Calcule los valores de los lados usando la función seno: $\text{sen}(\alpha) = \frac{\text{c.o.}}{H}$



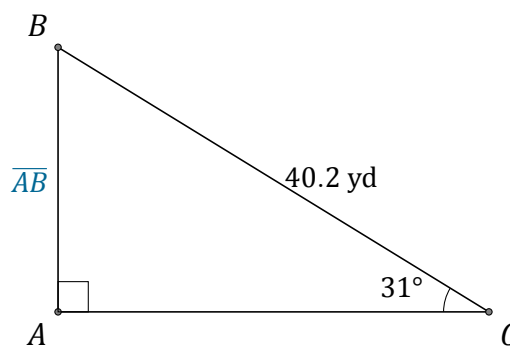
$$\overline{DE} = \underline{32.5 \text{ in}}$$



$$\overline{KN} = \underline{22 \text{ in}}$$



$$\overline{XZ} = \underline{38.5 \text{ in}}$$



$$\overline{AB} = \underline{20.7 \text{ yd}}$$