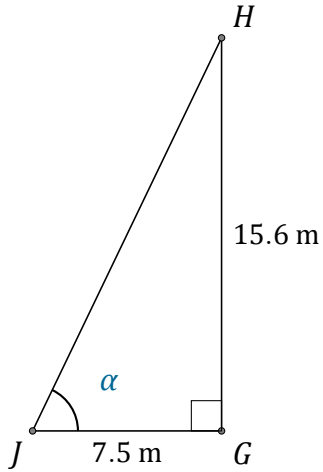


Función Tangente (E)

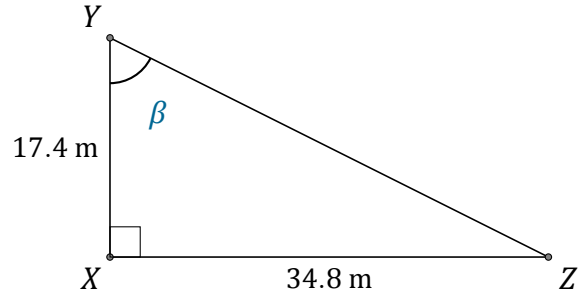
Nombre: _____

Fecha: _____

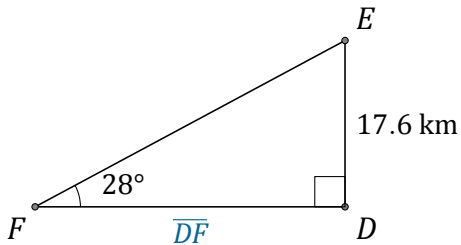
Calcule los valores de los ángulos y lados usando la función tangente: $\tan(\alpha) = \frac{C.O.}{C.A.}$



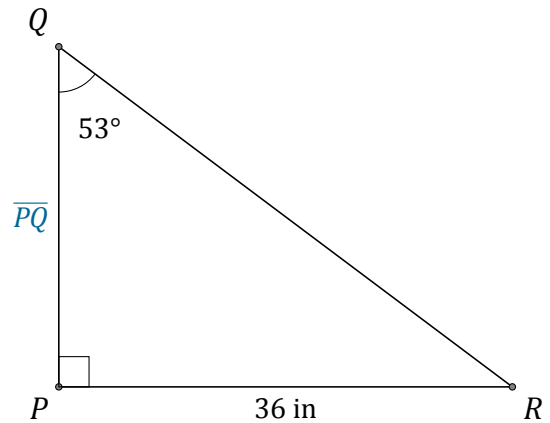
$\alpha = \angle GJH =$ _____



$\beta = \angle XYZ =$ _____



$\overline{DF} =$ _____



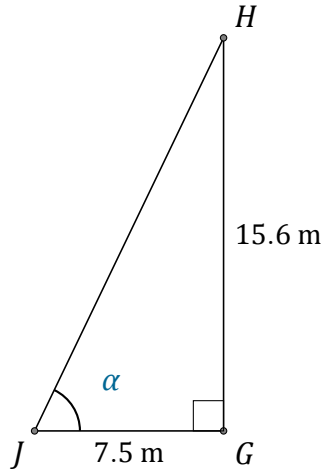
$\overline{PQ} =$ _____

Función Tangente (E) Respuestas

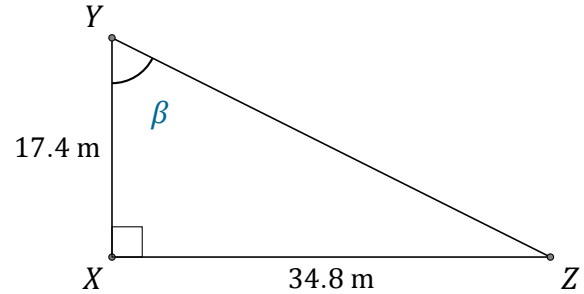
Nombre: _____

Fecha: _____

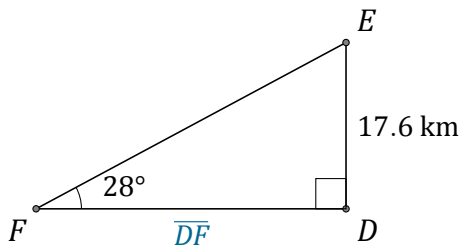
Calcule los valores de los ángulos y lados usando la función tangente: $\tan(\alpha) = \frac{C.O.}{C.A.}$



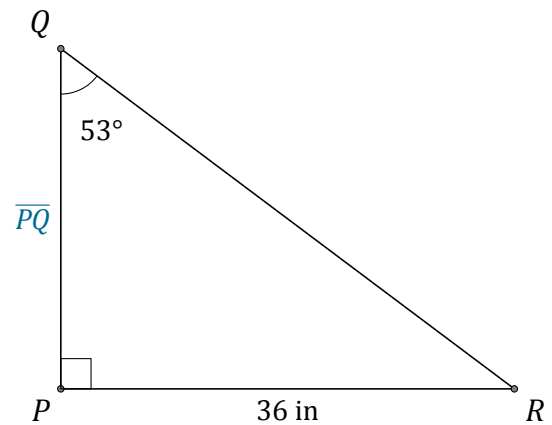
$$\alpha = \angle GJH = \underline{64.3^\circ}$$



$$\beta = \angle XYZ = \underline{63.4^\circ}$$



$$\overline{DF} = \underline{33.1 \text{ km}}$$



$$\overline{PQ} = \underline{27.1 \text{ in}}$$