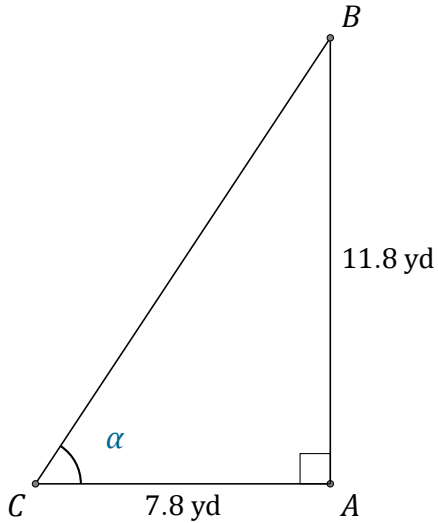


Función Tangente (F)

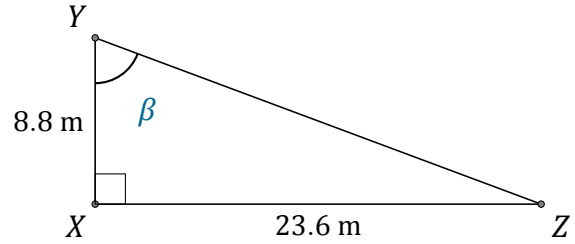
Nombre: _____

Fecha: _____

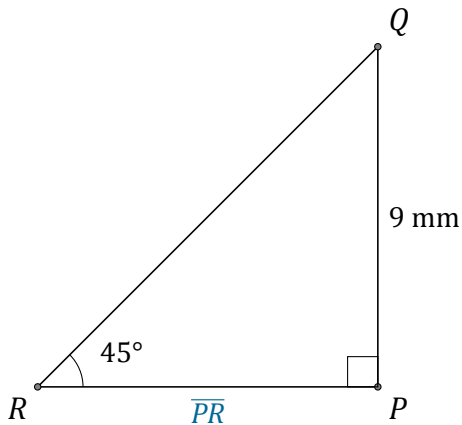
Calcule los valores de los ángulos y lados usando la función tangente: $\tan(\alpha) = \frac{C.O.}{C.A.}$



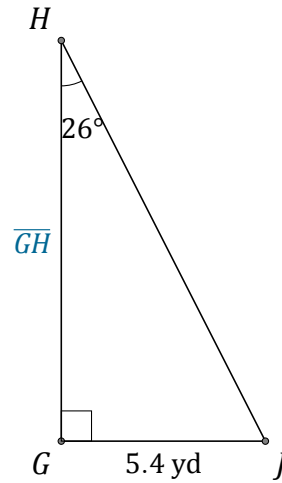
$\alpha = \angle ACB =$ _____



$\beta = \angle XYZ =$ _____



$\overline{PR} =$ _____



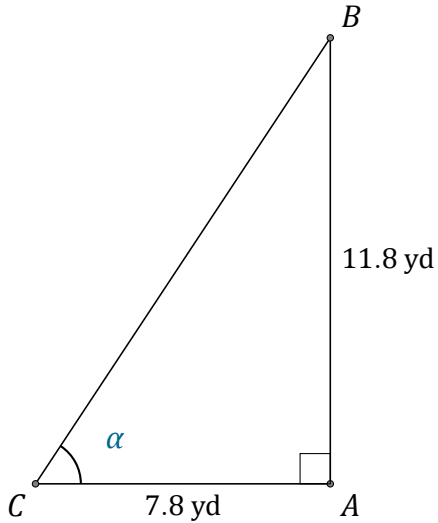
$\overline{GH} =$ _____

Función Tangente (F) Respuestas

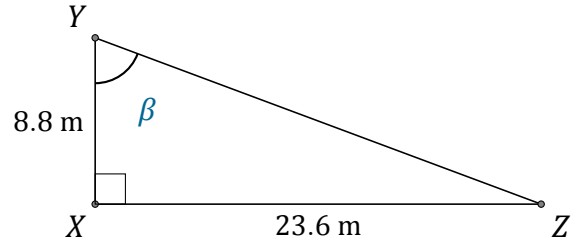
Nombre: _____

Fecha: _____

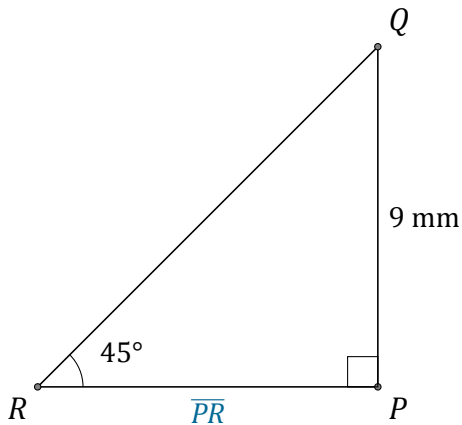
Calcule los valores de los ángulos y lados usando la función tangente: $\tan(\alpha) = \frac{C.O.}{C.A.}$



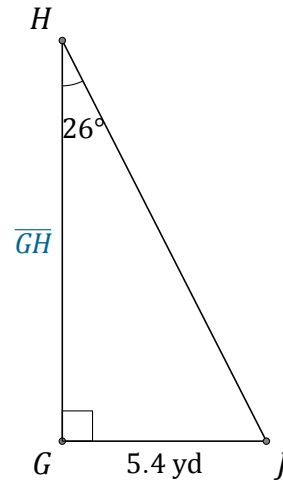
$$\alpha = \angle ACB = \underline{56.5^\circ}$$



$$\beta = \angle XYZ = \underline{69.6^\circ}$$



$$\overline{PR} = \underline{9 \text{ mm}}$$



$$\overline{GH} = \underline{11.1 \text{ yd}}$$