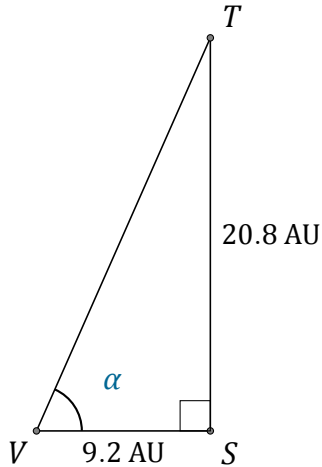


Función Tangente (J)

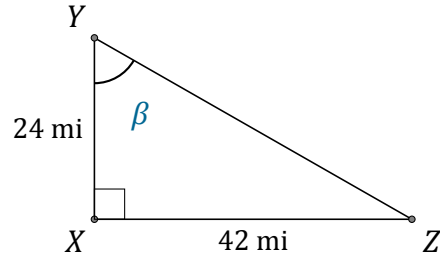
Nombre: _____

Fecha: _____

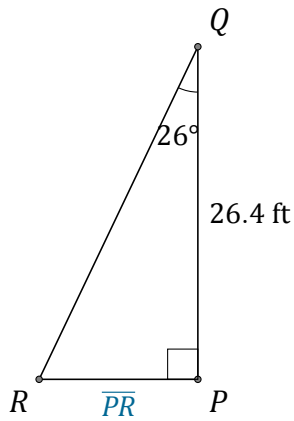
Calcule los valores de los ángulos y lados usando la función tangente: $\tan(\alpha) = \frac{C.O.}{C.A.}$



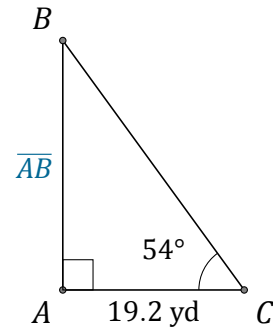
$\alpha = \angle SVT =$ _____



$\beta = \angle XYZ =$ _____



$\overline{PR} =$ _____



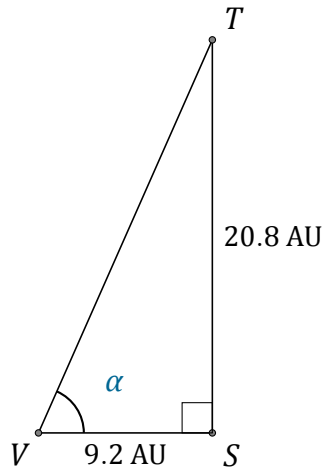
$\overline{AB} =$ _____

Función Tangente (J) Respuestas

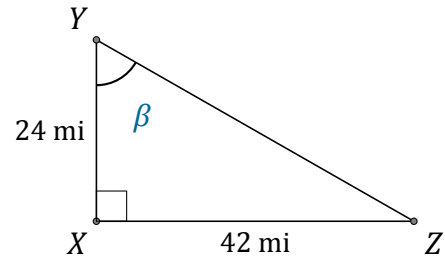
Nombre: _____

Fecha: _____

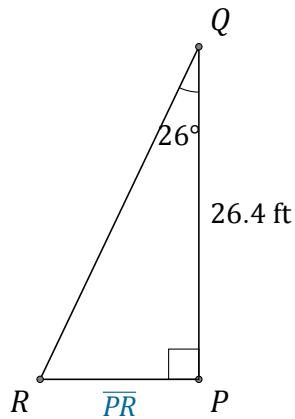
Calcule los valores de los ángulos y lados usando la función tangente: $\tan(\alpha) = \frac{C.O.}{C.A.}$



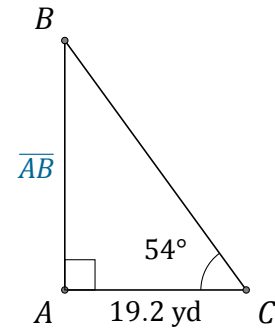
$$\alpha = \angle SVT = \underline{66.1^\circ}$$



$$\beta = \angle XYZ = \underline{60.3^\circ}$$



$$\overline{PR} = \underline{12.9 \text{ ft}}$$



$$\overline{AB} = \underline{26.4 \text{ yd}}$$