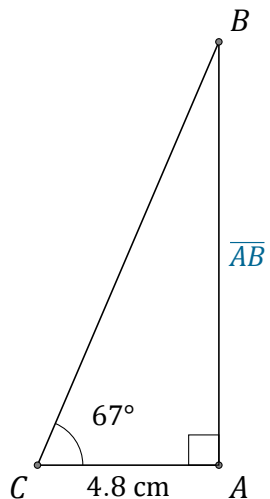


Función Tangente (J)

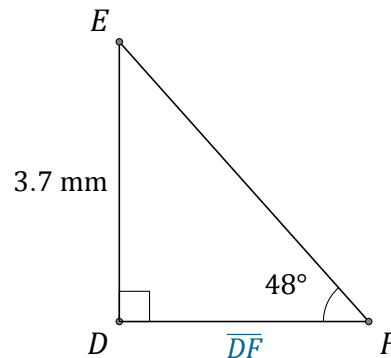
Nombre: _____

Fecha: _____

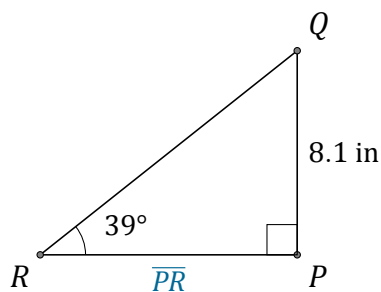
Calcule los valores de los lados usando la función tangente: $\tan(\alpha) = \frac{C.O.}{C.A.}$



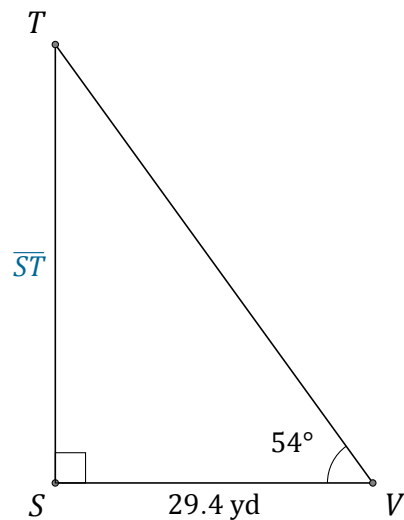
$$\overline{AB} = \underline{\hspace{2cm}}$$



$$\overline{DF} = \underline{\hspace{2cm}}$$



$$\overline{PR} = \underline{\hspace{2cm}}$$



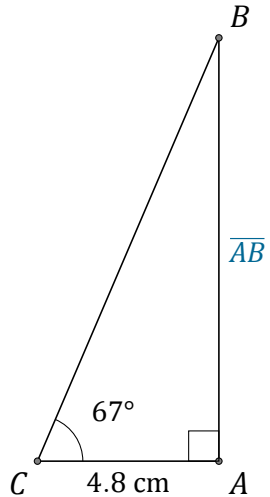
$$\overline{ST} = \underline{\hspace{2cm}}$$

Función Tangente (J) Respuestas

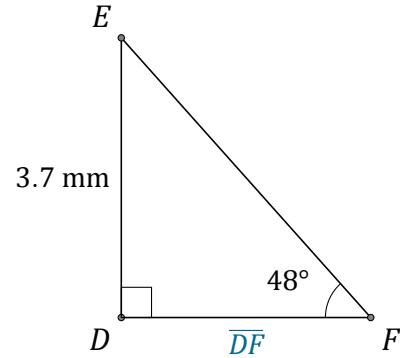
Nombre: _____

Fecha: _____

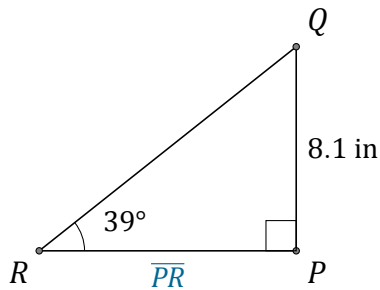
Calcule los valores de los lados usando la función tangente: $\tan(\alpha) = \frac{C.O.}{C.A.}$



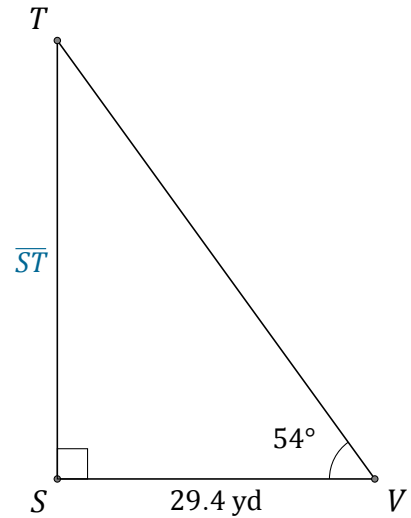
$$\overline{AB} = \underline{11.3 \text{ cm}}$$



$$\overline{DF} = \underline{3.3 \text{ mm}}$$



$$\overline{PR} = \underline{10 \text{ in}}$$



$$\overline{ST} = \underline{40.5 \text{ yd}}$$