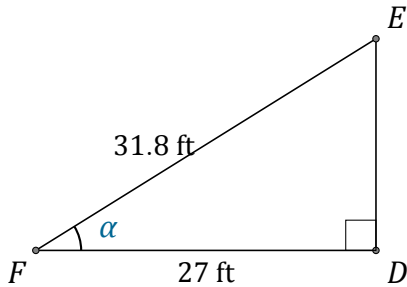


# Funciones Trigonómicas (B)

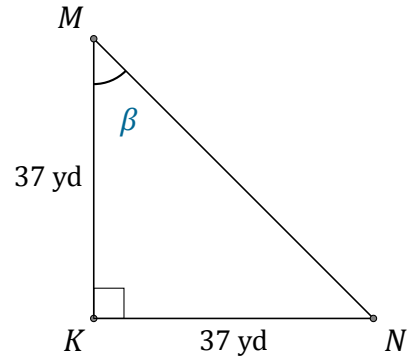
Nombre: \_\_\_\_\_

Fecha: \_\_\_\_\_

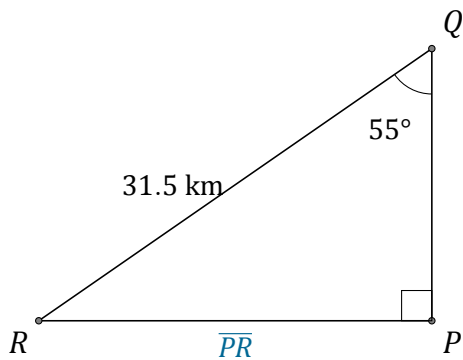
Calcule los valores de los ángulos y lados usando funciones trigonométricas



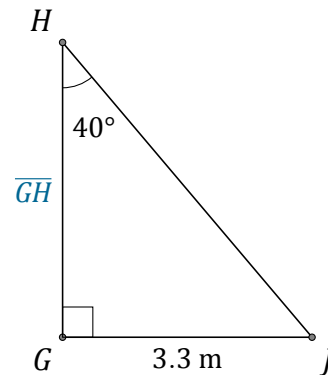
$$\alpha = \angle DFE = \underline{\hspace{2cm}}$$



$$\beta = \angle KMN = \underline{\hspace{2cm}}$$



$$\overline{PR} = \underline{\hspace{2cm}}$$



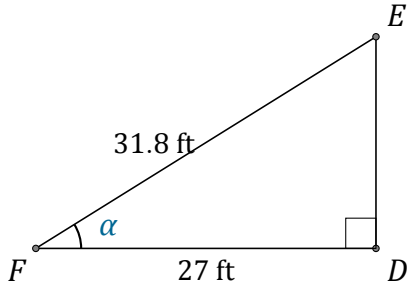
$$\overline{GH} = \underline{\hspace{2cm}}$$

# Funciones Trigonométricas (B) Respuestas

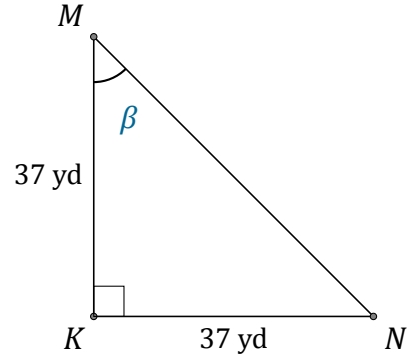
Nombre: \_\_\_\_\_

Fecha: \_\_\_\_\_

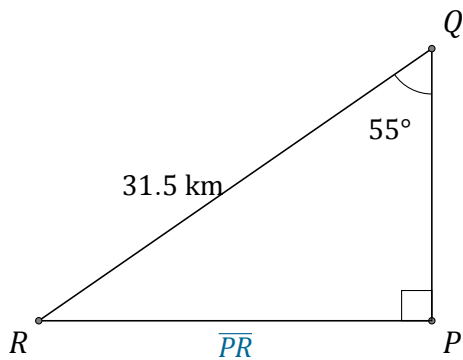
Calcule los valores de los ángulos y lados usando funciones trigonométricas



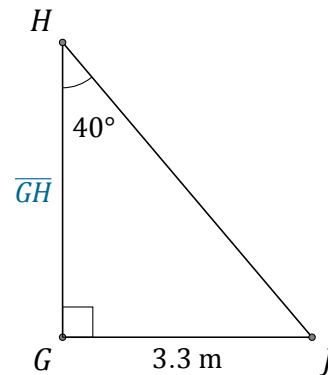
$$\alpha = \angle DFE = \underline{31.9^\circ}$$



$$\beta = \angle KMN = \underline{45^\circ}$$



$$\overline{PR} = \underline{25.8 \text{ km}}$$



$$\overline{GH} = \underline{3.9 \text{ m}}$$