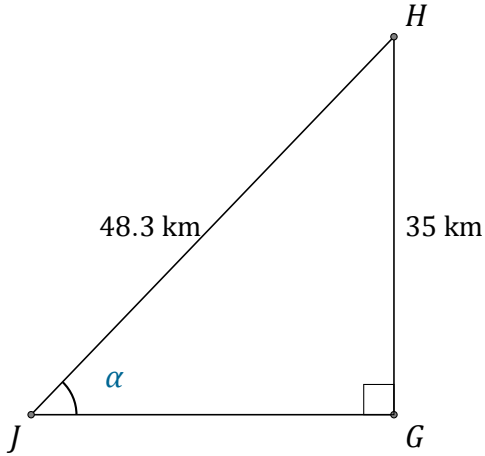


# Funciones Trigonométricas (D)

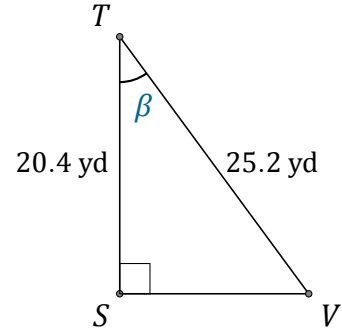
Nombre: \_\_\_\_\_

Fecha: \_\_\_\_\_

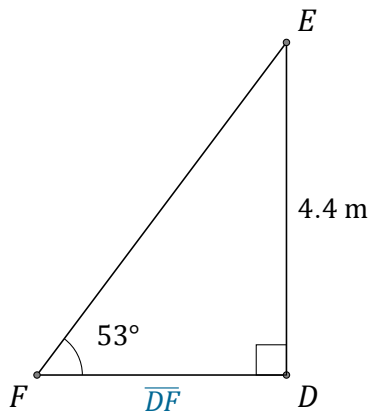
Calcule los valores de los ángulos y lados usando funciones trigonométricas



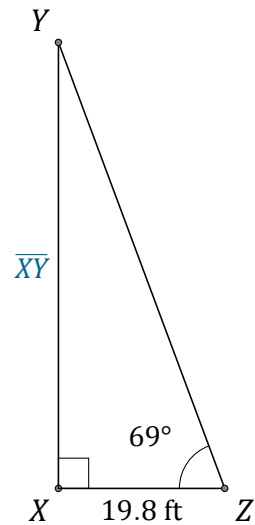
$\alpha = \angle GJH =$  \_\_\_\_\_



$\beta = \angle STV =$  \_\_\_\_\_



$\overline{DF} =$  \_\_\_\_\_



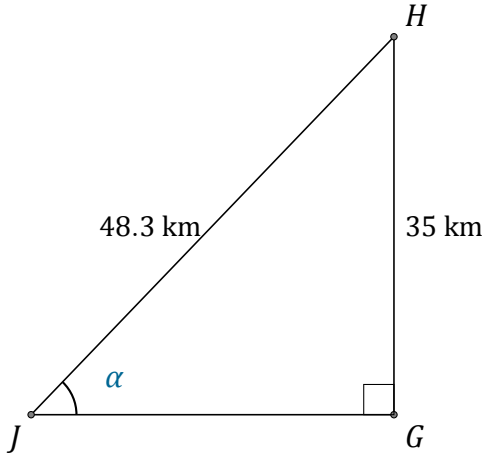
$\overline{XY} =$  \_\_\_\_\_

# Funciones Trigonómicas (D) Respuestas

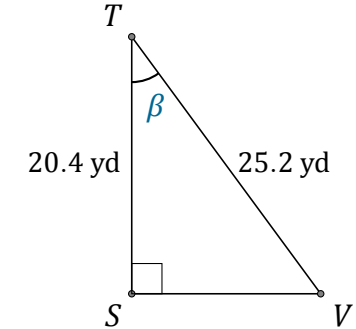
Nombre: \_\_\_\_\_

Fecha: \_\_\_\_\_

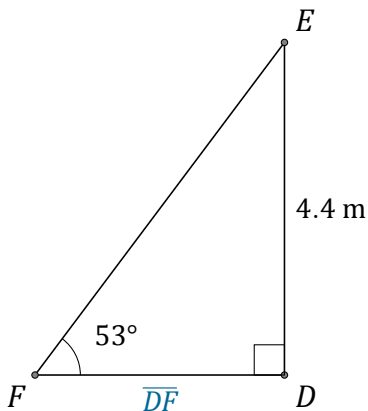
Calcule los valores de los ángulos y lados usando funciones trigonométricas



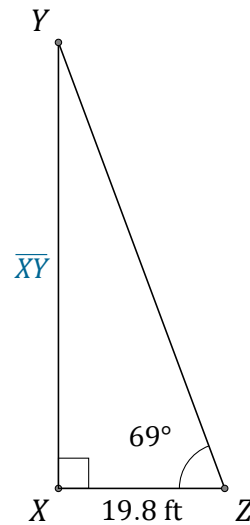
$$\alpha = \angle GJH = \underline{46.4^\circ}$$



$$\beta = \angle STV = \underline{36^\circ}$$



$$\overline{DF} = \underline{3.3 \text{ m}}$$



$$\overline{XY} = \underline{51.6 \text{ ft}}$$