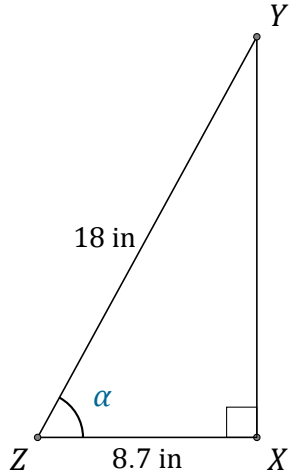


# Funciones Trigonométricas (E)

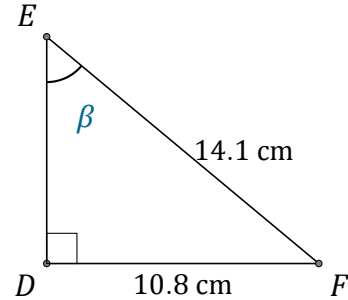
Nombre: \_\_\_\_\_

Fecha: \_\_\_\_\_

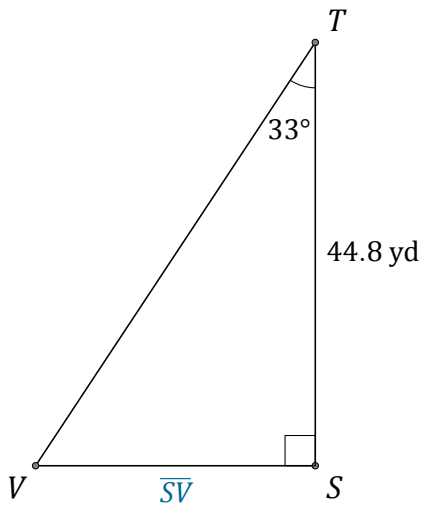
Calcule los valores de los ángulos y lados usando funciones trigonométricas



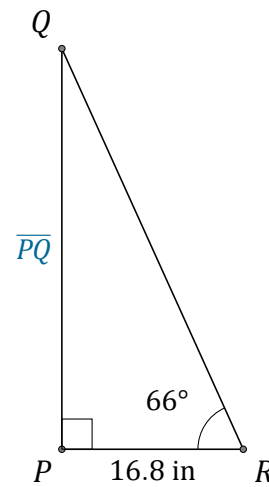
$\alpha = \angle XZY =$  \_\_\_\_\_



$\beta = \angle DEF =$  \_\_\_\_\_



$\overline{SV} =$  \_\_\_\_\_



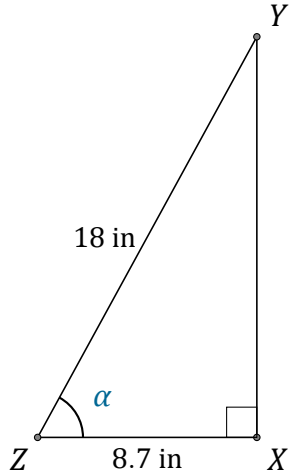
$\overline{PQ} =$  \_\_\_\_\_

# Funciones Trigonómicas (E) Respuestas

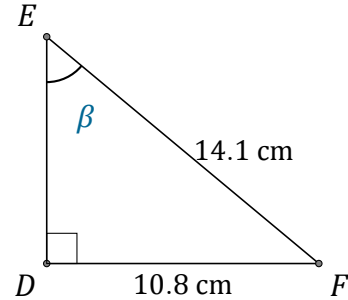
Nombre: \_\_\_\_\_

Fecha: \_\_\_\_\_

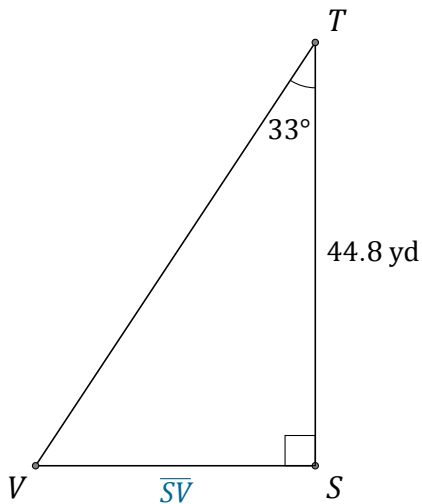
Calcule los valores de los ángulos y lados usando funciones trigonométricas



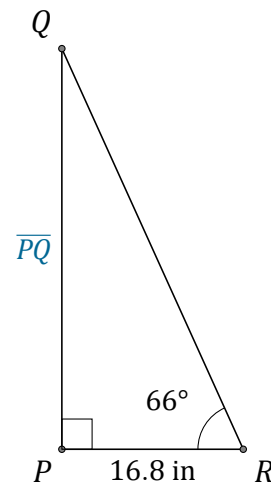
$$\alpha = \angle XZY = \underline{61.1^\circ}$$



$$\beta = \angle DEF = \underline{50^\circ}$$



$$\overline{SV} = \underline{29.1 \text{ yd}}$$



$$\overline{PQ} = \underline{37.7 \text{ in}}$$