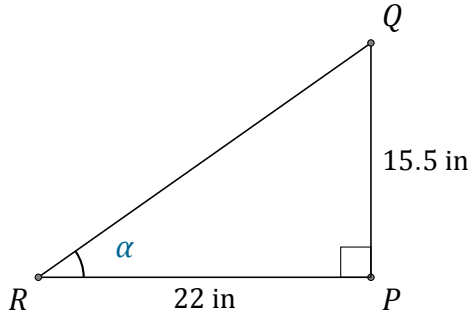


Funciones Trigonométricas (F)

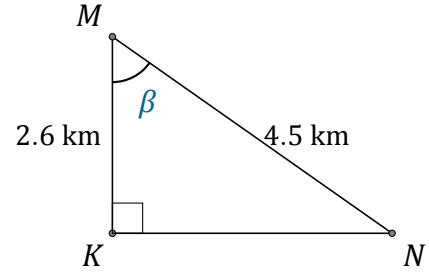
Nombre: _____

Fecha: _____

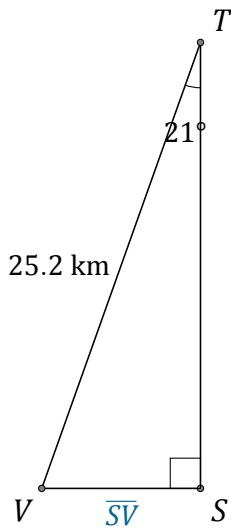
Calcule los valores de los ángulos y lados usando funciones trigonométricas



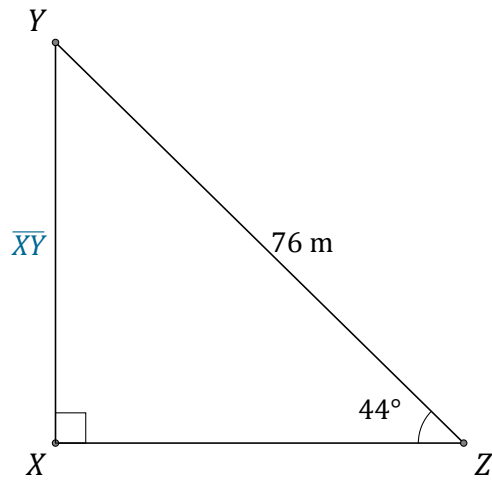
$\alpha = \angle PRQ =$ _____



$\beta = \angle KMN =$ _____



$\overline{SV} =$ _____



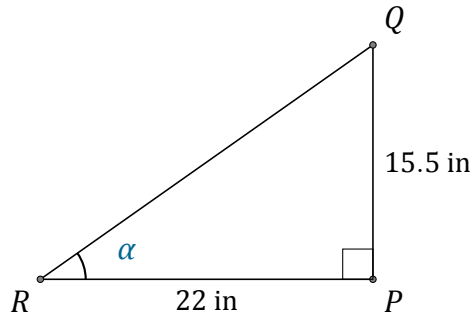
$\overline{XY} =$ _____

Funciones Trigonométricas (F) Respuestas

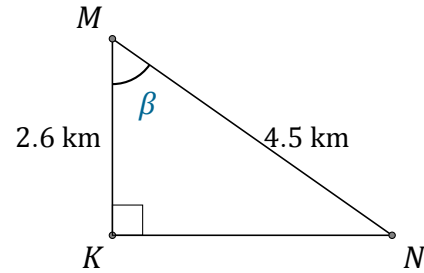
Nombre: _____

Fecha: _____

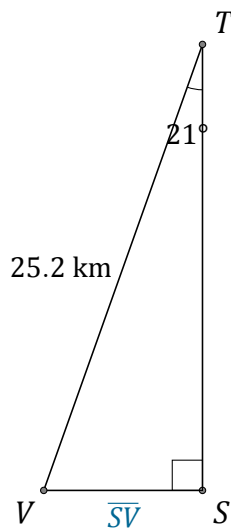
Calcule los valores de los ángulos y lados usando funciones trigonométricas



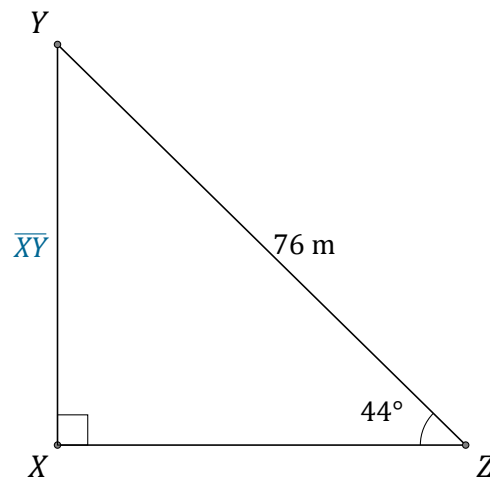
$$\alpha = \angle PRQ = \underline{35.2^\circ}$$



$$\beta = \angle KMN = \underline{54.7^\circ}$$



$$\overline{sV} = \underline{9 \text{ km}}$$



$$\overline{xY} = \underline{52.8 \text{ m}}$$