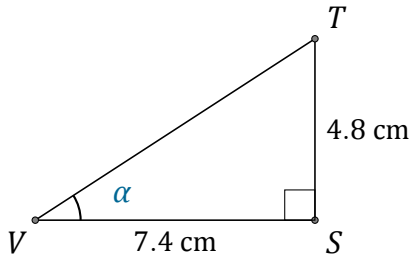


Funciones Trigonométricas (C)

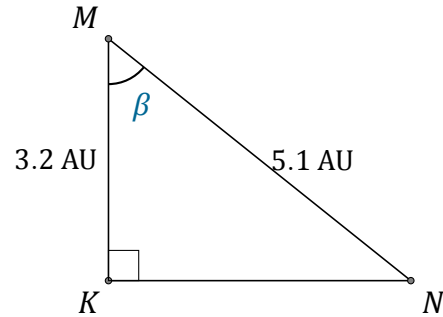
Nombre: _____

Fecha: _____

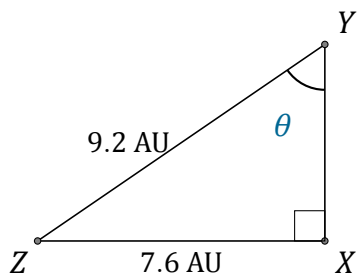
Calcule los valores de los ángulos usando funciones trigonométricas



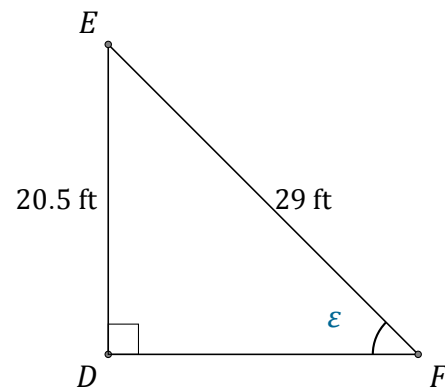
$$\alpha = \angle SVT = \underline{\hspace{2cm}}$$



$$\beta = \angle KMN = \underline{\hspace{2cm}}$$



$$\theta = \angle XYZ = \underline{\hspace{2cm}}$$



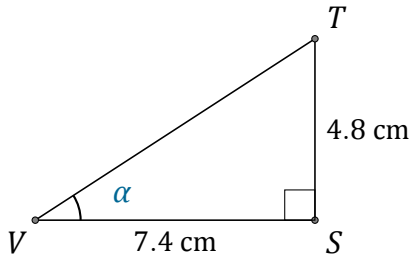
$$\epsilon = \angle DFE = \underline{\hspace{2cm}}$$

Funciones Trigonómicas (C) Respuestas

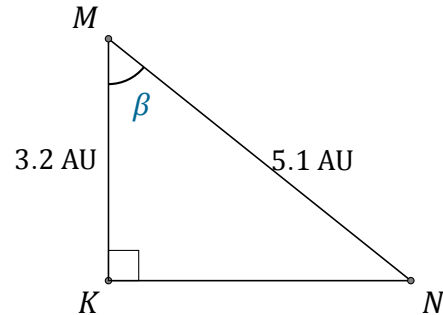
Nombre: _____

Fecha: _____

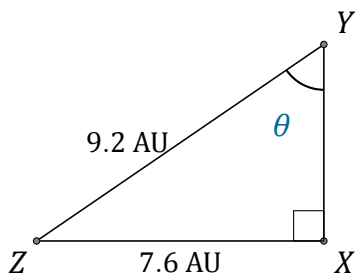
Calcule los valores de los ángulos usando funciones trigonométricas



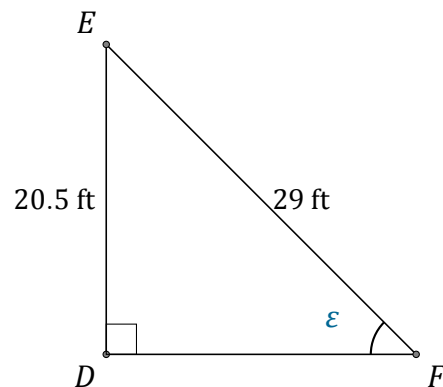
$$\alpha = \angle SVT = \underline{33^\circ}$$



$$\beta = \angle KMN = \underline{51.1^\circ}$$



$$\theta = \angle XYZ = \underline{55.7^\circ}$$



$$\epsilon = \angle DFE = \underline{45^\circ}$$