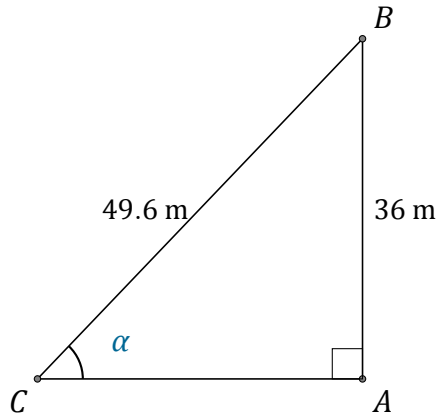


Funciones Trigonómicas (E)

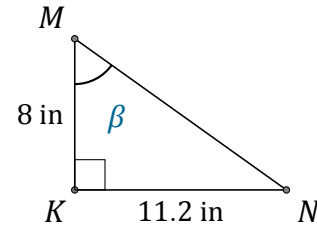
Nombre: _____

Fecha: _____

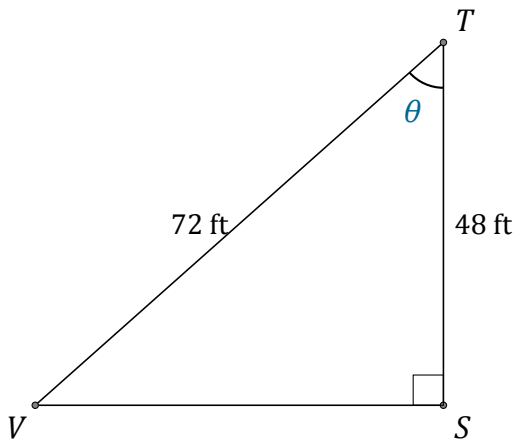
Calcule los valores de los ángulos usando funciones trigonométricas



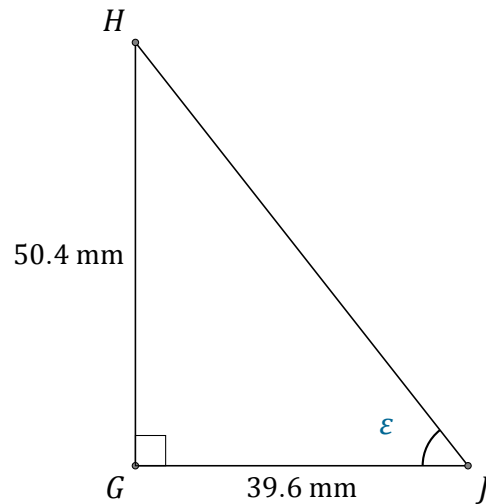
$$\alpha = \angle ACB = \underline{\hspace{2cm}}$$



$$\beta = \angle KMN = \underline{\hspace{2cm}}$$



$$\theta = \angle STV = \underline{\hspace{2cm}}$$



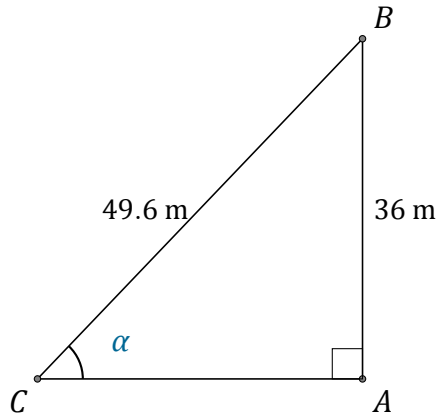
$$\epsilon = \angle GJH = \underline{\hspace{2cm}}$$

Funciones Trigonómicas (E) Respuestas

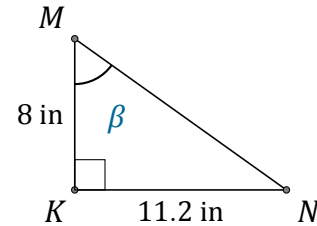
Nombre: _____

Fecha: _____

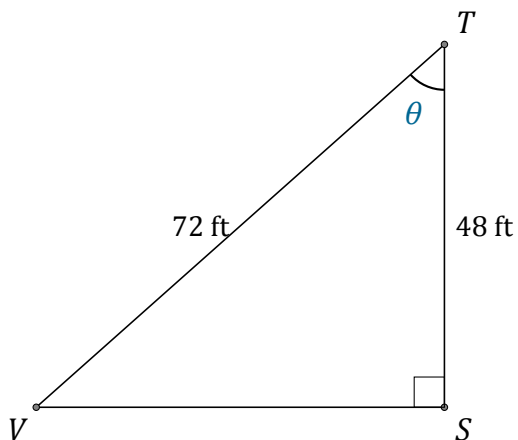
Calcule los valores de los ángulos usando funciones trigonométricas



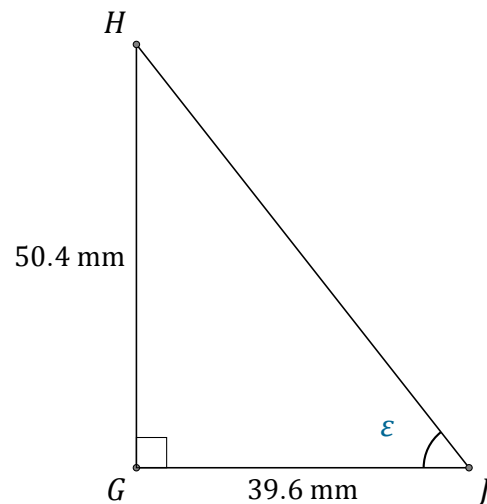
$$\alpha = \angle ACB = \underline{46.5^\circ}$$



$$\beta = \angle KMN = \underline{54.5^\circ}$$



$$\theta = \angle STV = \underline{48.2^\circ}$$



$$\epsilon = \angle GJH = \underline{51.8^\circ}$$